

STANDARD TWO END TERM 2 EXAM, 2017


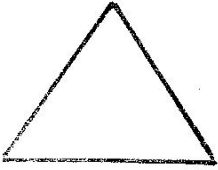


MATHEMATICS

NAME:	
SCHOOL:	

Write the numbers in symbols or words

1. Ninety five _____
2. Eight eight _____
3. 48 _____
4. Forty three _____
5. 12 _____

Name the shapes

6.  _____
7.  _____
8.  _____
9.  _____

(Circle, Square, Oval, Rectangle, Triangle)

10.
$$\begin{array}{r} 18 \\ +20 \\ \hline \end{array}$$

11.
$$\begin{array}{r} 25 \\ +14 \\ \hline \end{array}$$

12. $55 + 10 =$ _____

13. $4 + 24 =$ _____

14. $9 + \square = 11$

15. $\square + 5 = 16$

16. $12 - \square = 6$

17. $9 - \square = 5$

18. $5 - \square = 3$

19. $\square - 6 = 7$

Subtract

20. $12 - 4 =$ _____

21. $16 - 9 =$ _____

22. $18 - 8 =$ _____

23.
$$\begin{array}{r} 99 \\ - 29 \\ \hline \end{array}$$

24.
$$\begin{array}{r} 84 \\ - 22 \\ \hline \end{array}$$

$$\begin{array}{r} 25. \quad 10 \\ - 6 \\ \hline \hline \end{array}$$

$$\begin{array}{r} 26. \quad 12 \\ - 4 \\ \hline \hline \end{array}$$

27. 6 tens and 9 ones = _____

28. 49 = _____ tens and _____ ones

29. 4 = _____ tens and _____ ones

Write the next numbers

30. 2, 4, 6, 8, _____, _____

31. 10, 20, 30, _____, _____

32. 77, 76, _____, _____, 73

33. $4 \times 3 =$ _____

34. $2 \times 3 =$ _____

35. $4 \times \square = 8$

36. $80 + 10 =$ _____

37. $69 + 0 =$ _____

Put (x) or (-)

38. $10 \square 5 = 5$

39. $3 \square 2 = 6$

40. $90 - \square = 40$

41. $20 \div 5 =$ _____

$$\begin{array}{r} 42. \quad 415 \\ + 423 \\ \hline \hline \end{array}$$

$$\begin{array}{r} 43. \quad 514 \\ + 124 \\ \hline \hline \end{array}$$

44. 2 weeks = _____ days

45. One year has _____ months

46. $0 + 6 + 4 =$ _____

47. 5 boys have _____ legs

48. $724 - 523 =$ _____

49. $221 + 500 =$ _____

50. Share 6 oranges between Mercy and Mary. How many does each get? _____