
STANDARD EIGHT MID-TERM 3 EXAMS

2016 SOCIAL STUDIES & RELIGIOUS EDUCATION

Coordinated by KENPRO,
Macjo Arcade, 4th Floor, Suite 15E,
Off Magadi Road, Ongata Rongai |Tel: +254202319748 |
E-mail:infosnkenya@gmail.com | Website:www.schoolsnetkenya.com

NATIONAL SERIES 2016
SOCIAL AND RELIGIOUS STUDIES

-TIME: 2HRS: 15Mins

READ THESE INSTRUCTIONS CAREFULLY

1. You have been given this question booklet and a separate answer sheet. The question booklet contains 90 questions
2. Do any necessary rough work in this booklet.
3. When you have chosen your answer mark it on the **ANSWER SHEET**, not in the question paper.

HOW TO USE THE ANSWER SHEET

4. Use an ordinary pencil only.
5. Make sure that you have written on the answer sheet:-
YOUR INDEX NUMBER
YOUR NAME
NAME OF YOUR SCHOOL
6. By drawing a dark line inside the correct numbered boxes mark your full Index Number (i.e.) School Code Number and the three - figure Candidates Number) in the grid near the top of (the answer sheet.
7. Do not make any marks outside the boxes.
8. Keep your answer sheet as clean as possible and **DO NOT FOLD IT**.
9. For each of the questions 1- 90 four answers are given. The answers are lettered A,B,C, D. In each case only **ONE** of the four answers is correct. Choose the correct answer.
10. On the answer sheet show the correct answer by drawing a **dark line** inside the box in which the letter you have chosen is written.

Example

In the Question Booklet:

20. The main tourist attraction in Africa is _____

- A. Sandy beaches
- B. Favourable climate
- C. Wildlife
- D. Forest

The correct answer is C.

On the Answer Sheet:

19. [A] [B] [C] [D] 20. [A] [B] [C] [D] 21. [A] [B] [C] [D] 22. [A] [B] [C] [D]

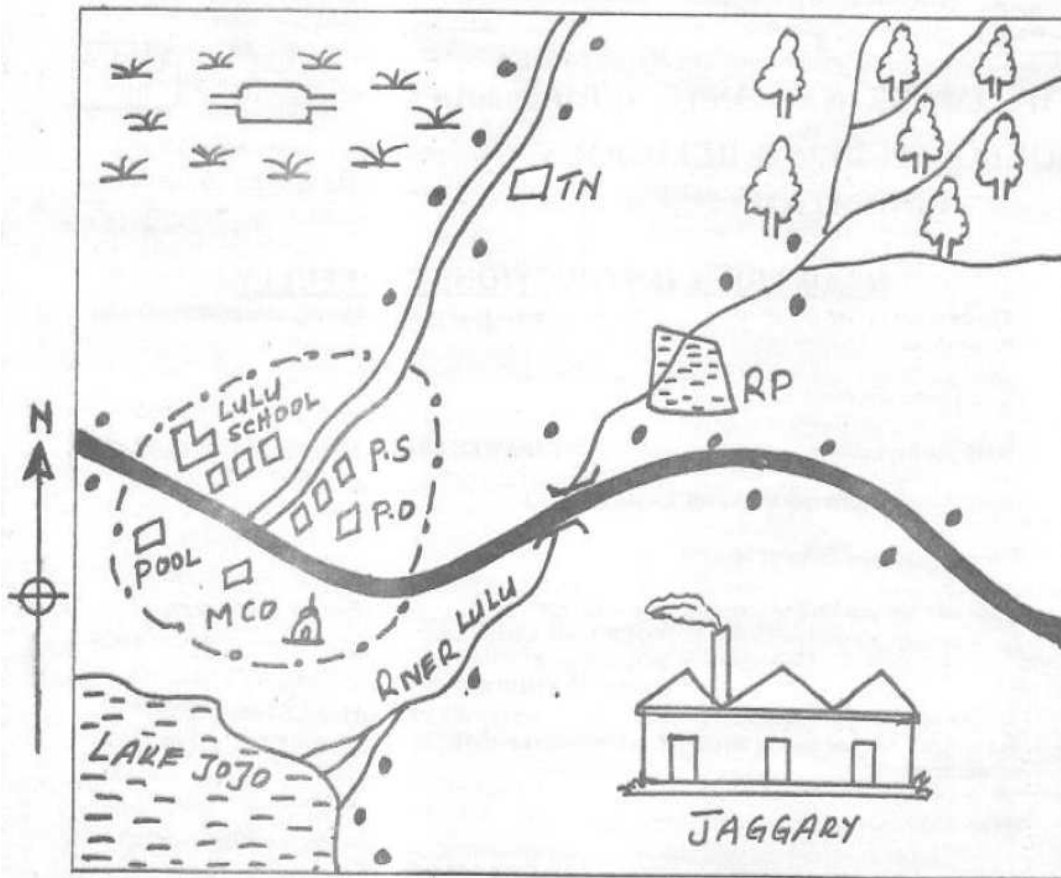
In the set of boxes number 38, the box with letter B printed in it is marked.

11. Your dark line **MUST BE** within the box.
12. For each question **ONLY ONE** box is to be marked in each set of four boxes.

Candidates should check the question paper to ensure that all the pages are printed

TURN OVER

LULU AREA



Scale:

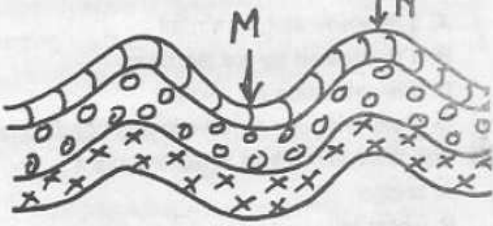
KEY:

Tarmac road	T.N. Trees nursery	Settlements	P.S. Police station
Murram road	R.P. River project	A river & bridge	P.O. Post office
Forest	M.CO Municipal council office	Grass land	Temple
Cattle dip	Build up areas	Cattle dip	

Study the map of Lulu area and answer question 1-7.

1. Three of the following are benefits of the projects along River Lulu except
 - A. reduced floods down stream
 - B. promotes industrialization in lulu town
 - C. traps water for domestic use
 - D. increase fish in the region
2. Three of the following are sources of livelihood in Lulu area. Which one is not?
 - A. fishing
 - B. tourism
 - C. lumbering
 - D. trading
3. Lulu town serves as three of the following except

STD 8 SSRE

- A. as a recreational centre
 B. as a trading centre
 C. as an administration centre
 D. as a tourist centre
4. Three of the following crops are likely to do well in the South Eastern part **except**
 A. rice
 B. pyrethrum
 C. cotton
 D. sugarcane
5. People of Lulu area are likely to worship on
 A. Saturday
 B. Friday
 C. Sunday
 D. Thursday
6. The main function of the governor in Lulu area is to
 A. maintain law and order
 B. solve land dispute in the area
 C. initiate development projects in the area
 D. make laws that will govern the county
7. The main soils to the South Eastern part are likely
 A. volcanic soils
 B. alluvial soils
 C. loamy soils
 D. clay soils
8. Which one of the following statements is true about clans in traditional African societies?
 A. They were headed by wealthy people
 B. They were formed by people from the same age group
 C. They were made of people with a common ancestor
 D. They were made of warriors
9. Children are expected to take part in family duties because
 A. it prepares them for future roles
 B. it promotes their physical development
 C. it is a sign of respect for their parents
 D. it helps them develop courage
10. Which of the following is **not true** about the rotation of the earth?
 A. It causes day and night
 B. It causes daily rise and fall of tides
 C. It causes deflection of ocean currents and winds
 D. It causes seasons
11. The main tourists attraction in Mauritius is
 A. kruger national park
 B. warm sandy beaches
 C. museums and zoos
 D. snow - capped mountain
12. Which of the following communities migrated and settled in South Africa before the 19th century?
 A. Ovipundu
 B. Khoikhoi
 C. Songhai
 D. Amharans
13. Most hills on the floor of the Rift valley were formed through
 A. faulting
 B. folding
 C. uplifting
 D. volcanicity
14. The government always carries out cens mainly to
 A. plan for the needs of her population
 B. provide good services
 C. track criminals
 D. provide good health care and schools
15. i) **Leadership was in the hands of family heads**
 ii) **Family heads made decision on behalf of the family**
 iii) **They practised a form of direct democracy**
 The community discussed above are the
 A. the Khoi khoi
 B. the old Ghana
 C. the San
 D. the Wanyamwezi
- Use the diagram to answer questions 16.
- 
16. The parts labelled M and N respectively are
 A. Anticline and fold
 B. Anticline and syncline
 C. Fold and syncline
 D. Syncline and anticline

STD 8 SSRE

17. Which one of the following interactions least occurred between the Luo and the Abaluhya during the pre - colonial period?
- They fought over fishing grounds
 - They intermarried with one another
 - They traded with one another
 - They shared aspects of their culture
18. The main challenge affecting African economy is
- insecurity
 - corruption
 - HIV/AIDS prevalence
 - unemployment
19. What is the time at town K $15^{\circ}W$ when it is 9.00 p.m at town m $30^{\circ}E$?
- 6.00 am
 - 6.00 pm
 - 12 noon
 - 12 midnight

Use the map of Africa to answer questions 20 - 23.

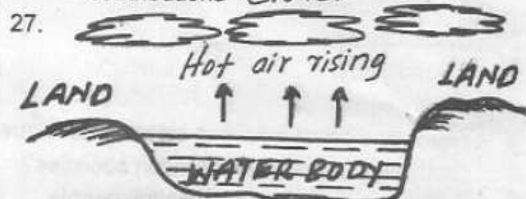


20. The island marked X was colonised by
- Portuguese
 - Germans
 - French
 - Italians
21. The prevailing wind marked A are called
- Westerlies
 - Harmattan
 - Eastlies
 - North East
22. The region marked C is sparsely population because
- it receives alot of rainfall
 - it is infested by tse tse flies
 - it is set a side for wildlife
 - it experiences harsh climatic conditions
23. The feature marked B represents a
- bridge
 - water fall
 - river
 - dam
24. Below are the statements about an African leader
- He over threw the king of his time
 - He abolished sheria laws in his country

- He took land from individual and distributed to people equally
- He constructed a dam and naturalized water ways which was under the British

The above described leader is

- Kwame Nkurumah
 - Leopold Senger
 - Kennedy Kaunda
 - Gamal Abdel Nasser
25. The following are problems facing horticultural production or farming in Kenya except
- perishability of the produce
 - availability of cheap labour
 - competition from other countries like Netherlands
 - poor means of transport
26. The following are problems facing African union (AU). Which one is not?
- Lack of standing army
 - Good membership
 - Civil war among some member states
 - Some member states fail to pay their contributions



This type of rainfall shown above is likely to be experienced in the following places except

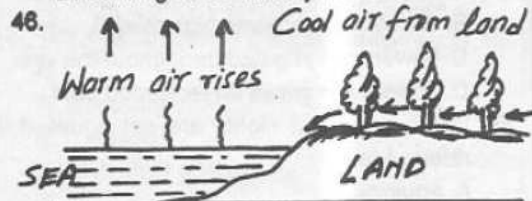
- Mwanza
 - Musoma
 - Nyeri
 - Kisumu
28. Which policy of administration was used by french in Senegal that referred Africans as subjects and not citizens of France?
- assimilition
 - Association
 - Indirect rule
 - Paternism
29. Three of the following factors influence climate in Africa except
- altitude
 - nature of the coastline
 - latitude
 - longitude
30. Which of the following rivers does not provide water to Akosomba Dam in Ghana?
- Benue
 - Black volta

STD 8 SSRE

- C. White volta
D. Oti
31. Which of the following is a main growing area of sisal in Tanzania?
A. Kigezi
B. Solai
C. Moshi
D. Songea
32. At what time of the year is the sun overhead at the tropical of Capricorn?
A. June
B. April
C. December
D. March
33. The method used in mining of petroleum in Nigeria is
A. planning method
B. shaft method
C. open cast method
D. drilling method
34. Which of the following set of towns comprises of towns making up the cocoa triangle?
A. Kumasi, Arim, Sekondi
B. Sekondi, Accra, Kumasi
C. Tamale, Accra, Takoradi
D. Sekondi, Kofi, Takoradi
35. The line Isohytes used on the map is used to
A. show the places of the same temperatures
B. show the places of the same altitude
C. show the places of the same atmosphere pressure
D. places which receives equal amount of rainfall
36. Which colonial power is correctly matched with its colonies by 1910?
Country Colonies
A. Germany Cameroon and Mozambique
B. Belgium Rwanda and Burundi
C. France Libya and Algeria
D. Britain Ghana and Madagascar
37. Lewanika is remembered in the history of Zambia due to
A. influenced the other African leader to welcome the British into Zambia
B. Welcomed the British in Zambia
C. Assisted the Africans to welcome the Christians
D. Refuse to co-operate with the British who came to Zambia
38. Netherlands is able to produce more flowers than Kenya mainly because
A. farming is highly mechanized
B. the country receives high rainfall
C. flowers are irrigated throughout the year
D. flowers are grown on reclaimed land
39. When days and nights are not equal, it is referred to as
A. equinox
B. solistice
C. revolution
D. rotation
40. Growing of vegetables is referred to as horticulture while growing of fruits only is referred as
A. aquaculture
B. floriculture
C. viticulture
D. agriculture
41. Which of the following important events happened on 27th August 2010?
A. Referendum
B. General elections
C. Promulgation of the new constitution
D. Review of the new constitution
42. Which one of the following statements best explains why most rivers in Africa are not navigable?
A. They contain large rocks
B. The volume of water is small
C. The rivers are short
D. The rivers are narrow
43. Julius Nyerere is remembered by Tanzania for starting ujamaa villages. The aim was to
A. increase agricultural production in the country
B. end the problem of landlessness among people
C. make it easier for the government to collect taxes
D. make it easier for people to share resources
44. The artic circle had 24 hrs of darkness in the month of
A. March
B. September
C. June
D. December

STD 8 SSRE

45. Orkoiyot Samoe led his community to resist against the British due to the following reasons **except**
- British alienation of their land
 - heavy taxes imposed on their people
 - British destroyed their sacred shrines
 - building of the railway line on their land



- The diagram above shows a breeze. Which of the following is true about the breeze?
- It is a sea breeze and occurs during the day
 - It is a land breeze and occurs during the day
 - It is a sea breeze and happens during the night
 - It is a land breeze and happens during the night
47. Three of the following statements are correct about the reasons for the failure of the maji maji rebellion. Which one is **not**?
- Collaboration of some African communities with the Germans
 - Some communities surrender during the course of the war
 - Africans had superior weapons compared to the Germans
 - Some influential communities did not take part in the rebellion
48. Rendile migrated from Ethiopia to Kenya mainly to
- look for minerals
 - look for good places with good roads
 - look for pasture for their animals
 - look for fertile land for growing crops
49. Who among the following African traditional leader collaborated with the British?
- Kabaka Mutesa I
 - Kabaka Mwanga
 - Kabaka Mutesa II
 - Kabaka Daudi Chwa
50. Which one of the following is **not** away of demonstrating patriotism of one's a country?
- Keeping the secrets of the country
 - not engaging in corruption
 - Not paying taxes
 - Obeying the laws of the country
51. Which of the following is the **main** problem facing regional trade in Africa?
- Production of similar goods

- Lack of common currency
 - Difference in development skills
 - Good mode of transport
52. Who were the last Bantu people to migrate to eastern Africa from Southern Africa?
- Ndebele
 - Luo
 - Nyamwezi
 - Ngoni
53. The main mining areas of gold in South Africa is
- Orange free state and wit watersrand
 - Witwatersrand and Johannesburg
 - Witwatersrand and Transvaal province
 - Port harcourt and Warri
54. One major similarity between the government of Kenya and that of Swiziland is that
- general elections are held after every five years
 - there are many political parties
 - parliament consists of two houses
 - the leaders rule throughout their life time
55. The following are statements about the U.N Agency
- It was formed in a 1951
 - It headquarters are in Geneva -Switzerland
 - It provides basic human need to the refugees
- Which UN agency is described above?
- UNEP
 - WHO
 - UNHCR
 - FAO
56. Which of the following was the name given to the treasurer amongst the Baganda?
- Katikiro
 - Omwanyika
 - Omulamuzi
 - Lukiko
57. The following were political associations formed in kenya before 1939. Which one was **not**?
- The East African Association (EAA)
 - The Young Kikutu Association (YKA)
 - The Kikuyu Central Associations (KCA)
 - The Kenya African Study union (KASU)
58. Which one of the following was a result of settler farming in Kenya?
- Introduction of long horned cattle
 - Introduction of bee keeping
 - Introduction of intercropping
 - Introduction of cash crops
59. Which one of the following groups of countries in Africa got assistance from OAU to achieve independence?
- Algeria, Uganda, Angola
 - Ethiopia, Kenya, Nigeria
 - Tanzania, Egypt, South Africa

STD 8 SSRE

- D. Namibia, Mozambique, Zimbabwe
60. Three of the following are benefits of democracy . Which one is **not**?
- Laws are applied fairly to all people
 - People are made to join the ruling party
 - People are free to elect their leader
 - People respect human rights

PART II C.R.E

61. Which of the following is the **main reason** why God created Eve? He wanted her to
- look after the animals
 - take care of the garden of Eden
 - be a companion to Adam
 - eat the fruits of the garden of Eden
62. The **main reason** why Noah built on ark was to make him be able to
- fulfil God's wish
 - worship God there
 - keep the animals
 - hide his family
63. Joseph was able to over come the temptations from the wife of Potipher because he was _____
- hardworking
 - faithful
 - courageous
 - forgiving
64. Which one of the following activities was carried out by the Israelites on the night of the Passover in Egypt ? They
- drank wine
 - ate roast meat
 - offered their first borns to God
 - worshipped the golden calf
65. Which one of the following commandments shows respect to human life?
- Do not commit adultery
 - Do not steal
 - Do not accuse anyone falsely
 - Do not murder
66. Which one of the following was an achievement of king David?
- Bringing the ark of the covenant to Jerusalem
 - Judging cases in Israel
 - Fighting against idol worship in Israel
 - Writing the first books of the Bible
67. Who among the following kings was punished by God because of performing the duty of a priest?
- Ahaz
 - Saul
 - Jehu
 - Ahab
68. Which one of the following miracles was performed by both prophets Elijah and Elisha?
- Bringing fire from heaven
 - Purification of the water
 - Multiplication of oil

- D. Raising the son of Shunamite woman
69. The prophet who foretold about the suffering servant is
- Isaiah
 - Micah
 - Jeremiah
 - Amos
70. Which one of the following happenings took place on the eighth day after Jesus was born?
- Jesus was dedicated
 - The angel appeared to Mary
 - Jesus was circumcised
 - The angel appeared to the shepherds
71. "Didn't you know that I had to be in my father's house? **Luke 2 : 49** when did Jesus say these words?
- when he was found by his parents in the temple
 - when he chased the traders from the temple
 - during his baptism by John
 - during his trial before the high priest
72. Which one of the following statements is a teaching of Jesus from sermon on the mount?
- Let the children come to me
 - Love your enemies and pray for them
 - You must be born of water and spirit
 - sell your property and have riches in heaven
73. The story of the rich man and Lazarus teaches Christians to be
- faithful
 - courageous
 - holy
 - caring
74. Which story of the following groups of people made up the first disciples of Jesus?
- Andrew, John , Simon, James
 - Simon, Judah, James, Andrew
 - Levi, Thomas, John, Simon
 - Mathew, John, Philip, Andrew
75. The parable of the good samaritan teaches Christians to
- help those who are in need
 - pray for one another
 - preach the word of God
 - lay hands on the sick
76. Which one of the following words were spoken by the Roman officer who witnessed the death of Jesus on the cross?
- "Today salvation has come"
 - "Save yourself and us"
 - " Father forgive them"
 - Surely, this was a righteous man"
77. Which one of the following events took place

STD 8 SSRE

- when Jesus resurrected?
- There was darkness over the land
 - The curtain in the temple was torn
 - A voice was heard from heaven
 - There was an earthquake
78. "These people are not drunk as you suppose, it is only nine o'clock in the morning" Acts 2: 15 Peter spoke these words during the
- Resurrection of Jesus
 - Day of Pentecost
 - Last supper
 - Sermon on the mount
79. Who among the following people baptized the Ethiopian Eunuch?
- Stephen
 - Paul
 - Philip
 - Peter
80. Which one of the following is a gift of the Holy Spirit?
- Wisdom
 - Gentleness
 - Goodness
 - Humility
81. Who among the following people were sent to take money to help the believers in Judea?
- Philip and Mathew
 - Barnabas and Saul
 - Andrew and Mathias
 - Silas and James
82. Which one of the following beliefs about God is found in both traditional African communities and in the Apostles creed? God
- is the creator
 - lives in caves
 - is three in one
 - is the father of Jesus
83. The living dead in traditional African communities were mainly remembered through
- lighting fire
 - pouring libation
 - composing sings for them
 - holding dancing ceremonies
84. In both Christianity and traditional African communities, children are told stories mainly to
- entertain them
 - teach them moral values
 - teach them about their past
 - keep them busy
85. The main reason why Christians should obey their leaders is because they
- keep peace in the community
 - ask people to do good
 - are chosen to rule with justice
 - are God's representatives on earth
86. Brandon is sent to buy a kilogram of sugar. The shopkeeper gives him more change . As a Christian Brandon should
- return to the shopkeeper
 - use it to buy sweets
 - take it home
 - keep quiet about it
87. Tobiah has been spending a lot of time playing games and his parents are complaining that his performance in class has dropped. As a Christian, what action should he take?
- Stop playing games
 - Transfer to another school
 - Stay with a friend and continue with the games
 - Balanced the time used in games and studies
88. Barchok a teacher of class six asked the pupils to weed the flower bed. Anita is not willing because it will make her dirty. As a Christianity, what advice can you give her?
- Ask permission to go home
 - Ask a friend to do the work for her
 - Report the matter to her parents
 - Do the work as well as she can
89. While waiting for Kenya certificate of primary education examination results Peter Bii is asked by an old lady for hand in marriage. As a Christian the best action to take is
- tell the pastor about it
 - tell her he is not ready for it
 - tell his parents about it
 - seek advice from his friends
90. The main reason why missionaries came to Kenya was to
- introduce western continuation
 - stop female circumcision
 - spread the gospel
 - stop slave trade