
**STANDARD SEVEN MID-TERM 3
EXAMS**

**2016
SOCIAL AND RELIGIOUS STUDIES**

Coordinated by KENPRO,
Macjo Arcade, 4th Floor, Suite 15E,
Off Magadi Road, Ongata Rongai |Tel: +254202319748 |
E-mail:infosnkenya@gmail.com | Website:www.schoolsnetkenya.com

SOCIAL STUDIES & RELIGIOUS EDUCATION

TIME: 2HRS: 15Mins

READ THESE INSTRUCTIONS CAREFULLY

1. You have been given this question booklet and a separate answer sheet. The question booklet contains 90 questions
2. Do any necessary rough work in this booklet.
3. When you have chosen your answer mark it on the ANSWER SHEET, not in the question paper.

HOW TO USE THE ANSWER SHEET

4. Use an ordinary pencil only.
5. Make sure that you have written on the answer sheet:-
YOUR INDEX NUMBER
YOUR NAME
NAME OF YOUR SCHOOL
6. By drawing a dark line inside the correct numbered boxes mark your full Index Number (i.e.) School Code Number and the three - figure Candidates Number) in the grid near the top of (the answer sheet.
7. Do not make any marks outside the boxes.
8. Keep your answer sheet as clean as possible and **DO NOT FOLD IT.**
9. For each of the questions 1- 90 four answers are given. The answers are lettered A,B,C, D. In each case only **ONE** of the four answers is correct. Choose the correct answer.
10. On the answer sheet show the correct answer by drawing a **dark line** inside the box in which the letter you have chosen is written.

Example

In the Question Booklet:

20. The main tourist attraction in Africa is _____

- A. Sandy beaches
- B. Favourable climate
- C. Wildlife
- D. Forest

The correct answer is C.

On the Answer Sheet:

19. [A] [B] [C] [D] **20.** [A] [B] [C] [D] **21.** [A] [B] [C] [D] **22.** [A] [B] [C] [D]

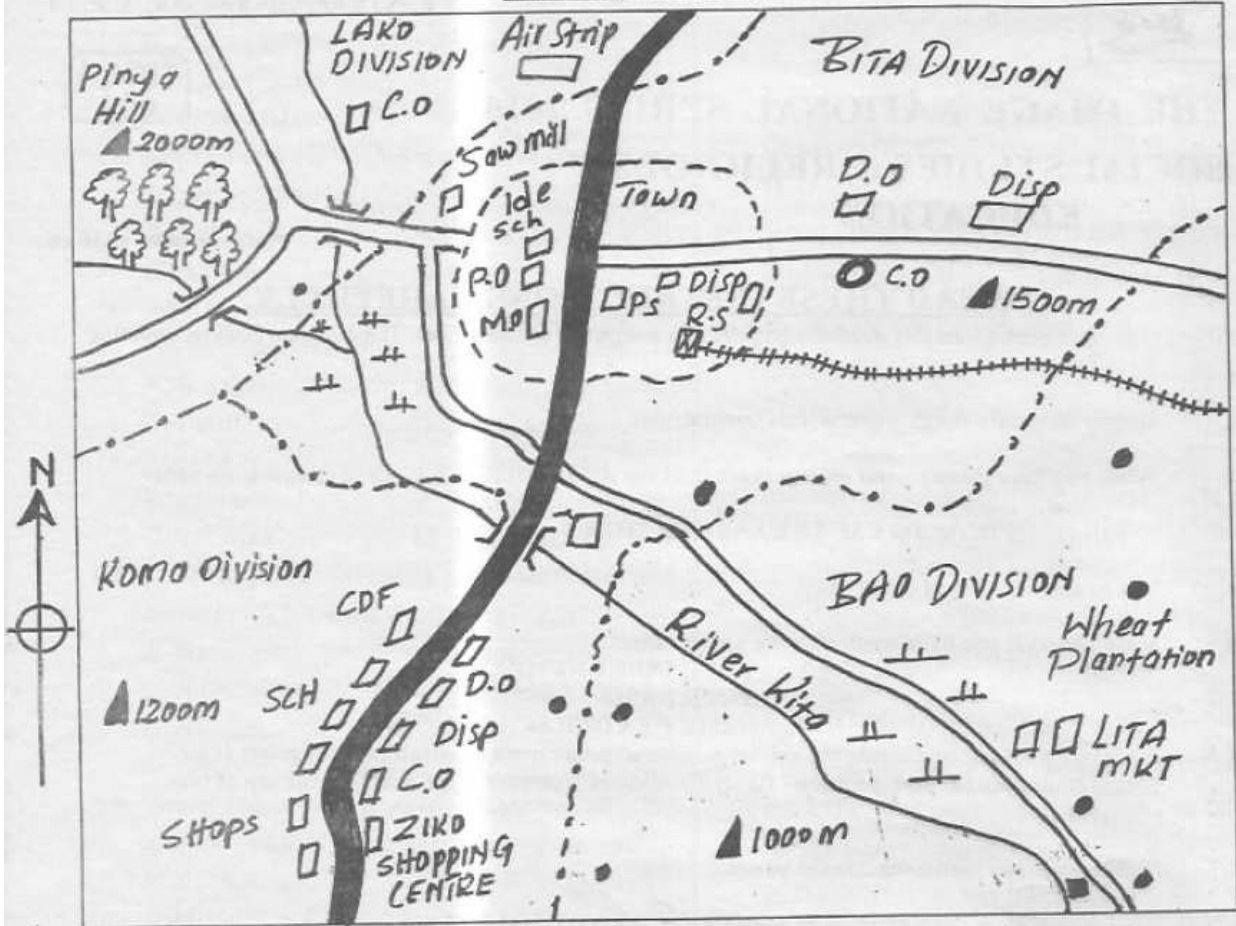
In the set of boxes number 38, the box with letter B printed in it is marked.

11. Your dark line **MUST BE** within the box.
12. For each question **ONLY ONE** box is to be marked in each set of four boxes.

Candidates should check the question paper to ensure that all the pages are printed

TURN OVER

LINDONI AREA



Scale: 0 1 2 3 4 5 6 7 8 9 10 11 12 13 14 Km

KEY:

- | | | | | |
|----------------------|--------------------------------------|---------------------|---------------------|----------------------------|
| Tarmac road | Murrum road | River | Railway | Divisional boundary |
| River bridge | Municipal boundary | Permanent | House | Forest |
| Scrub, | C.D.F. Constituency development fund | C.O. Chief's office | Disp. Dispensary | D.C. District commissioner |
| papyrus swamp | D.O. Divisional office | P.O. Post office | P.S. Police station | MKT Market |
| R.S. Railway station | M.D. Municipal council | F.M. Flour mill | SCH School | |

Study the map of Lindoni area provided and answer questions 1 to 7

1. The general direction of flow of river Kita is
 - A. North east to south west
 - B. North west to south east
 - C. South east to north west
 - D. South west to north east

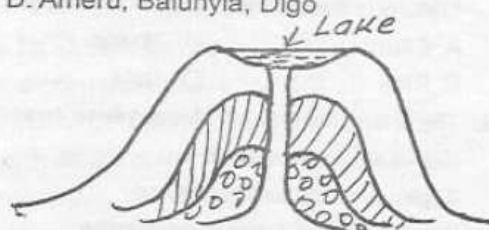
2. The approximate length of the tarmac road in Lindoni area is
 - A. 10 km
 - B. 13 km
 - C. 19 km
 - D. 23 km
3. The main means of transport in Lindoni area is
 - A. water transport
 - B. railway transport

STD 7 SSRE

- C. air transport
D. road transport
4. The highest point in Lindoni area is
A. 100m B. 1200 m
C. 1500 m D. 2000m
5. Which one of the following divisions is likely to have a cool and wet climate?
A. Lako division
B. Bitu division
C. Bao division
D. Koma division
6. Kenda found a person breaking into a shop at Ziko shopping centre. Which one of the following would be the appropriate office in Lindoni area him to report the crime?
A. The headteacher's office
B. The chiefs office
C. CDF office
D. Municipal council office
7. A tourist was travelling along the murram road from lita market towards pinya hill. Which one of the following is the correct order of natural vegetation that he saw?
A. Forest, papyrus, scrub
B. Papyrus, scrub, forest
C. Scrub, papyrus, forest
D. Forest, scrub, papyrus
8. The revolution of the earth has the following effects **except**
A. Different seasons
B. Day and night
C. Differences in lengths of days and nights
D. Changes in the position of the midday sun
9. The time is 12.00 noon at Accra 0° . What is the time at marigat 36°E ?
A. 9.36 a.m
B. 9.36 p.m
C. 2.24 p.m
D. 2.24 a.m
10. Which one of the following factors influences population growth **most**?
A. Availability of enough food
B. Better means of transport
C. Better industries for employment
D. Better communication facilities
11. Which one of the following Kenyan communities belong to the same language group?
A. Somali, Aembu, Turkana
B. Kuria, Iteso, Maasai

- C. Samburu, Pokomo, Tugen
D. Ameru, Baluhyia, Digo

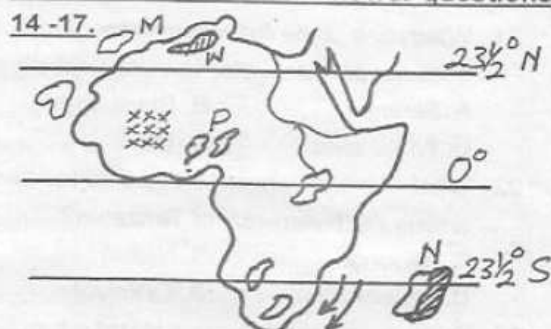
12.



Which one of the following lakes was formed through the above process?

- A. L. Bangweulu B. L. Kyoga
C. L. Natron D. L. Nyos
13. The national language of Ethiopia is
A. Arabic B. Amharic
C. French D. Italic

Use the map below to answer questions.



14. The capital city of the country marked N is
A. Zanzibar
B. Windhoek
C. Brazavile
D. Antananarivo
15. The island marked M is
A. Comoros
B. Canaries
C. Mauritius
D. Sao Tome and principal
16. The feature marked xxx is?
A. Mt Ahaggar
B. Jos plateau
C. Adamawa highlands
D. Fouta Djan
17. The mountain marked W was formed through?
A. block B. faulting
C. volcanic D. folding

STD 7 SSRE

18. Three of the following are groups of the Mijikenda community. Which one is **not**?
- A. Chonyi B. Jibana
C. Ribe D. Taita
19. The main benefit of Mara game reserve to Kenyan government is
- A. provision of social service
B. provision of foreign exchange
C. centre of education
D. creation of employment
20. Which kind of forest is found at the coast of Kenya?
- A. Savannah grassland
B. Miombo woodland
C. Tropical rainforest
D. Mangrove forest
21. Which one of the following rivers given below does not provide water to volta river project?
- A. Senegal B. Black volta
C. White volta D. Oti
22. What title was given to the traditional chief among the Nyamwezi of Tanzania?
- A. Nabongo B. Ntemi
C. Oloibon D. Orkoiyot
23. Which one of the following is **not** a function of the school committee?
- A. Employing assistant teachers
B. Assisting in admission of new pupils
C. Employing teachers
D. Maintaining the school traditions
24. Which one of the following is **not** an importance of marriage?
- A. To procreate
B. For companionship
C. To unite two families
D. To please our parents
25. Which one of the following is **not** a use of trees?
- A. Sources of fuel
B. Help regulate air pressure
C. Home for wild animals
D. Act as wind breakers
26. The following are characteristics of a crop
- i) planted for sale*
ii) grown in the highlands
iii) grows well in well - drained volcanic soil
iv) requires high rainfall
- Which of the following crop is described above?
- A. Coffee B. Maize
C. Sorghum D. Wheat
27. Which one of the following is not a fishing method?
- A. Seining B. Traps
C. Sundrying D. handline
28. Tourists should be encouraged because of the three reasons below. Which one is not?
- A. Source of employment
B. Source of money
C. Encourages poaching
D. Leads to exchange of culture
29. In Uganda, which one of the following people are nomadic pastoralists?
- A. Maasai B. Rendile
C. Karamajong D. Baganda
30. A polygamous marriage is allowed in one of the following faiths. Which one is it?
- A. Christianity B. Hinduism
C. Islam D. Sikhism
31. Schools promote good behaviour in society **mainly** by
- A. ensuring that children do their homework
B. ensuring that children go to school on time
C. teaching children to fear punishment
D. teaching children to obey the laws of the land and respect one another
32. Below are characteristics of a certain climatic region in Africa
- i) high temperatures during the day*
ii) rainfall is less than 250 mm per year
iii) the skies are normally cloudless
iv) a big diurnal range of temperatures
- The climatic region described above is
- A. mountain climatic region
B. tropical climatic region

STD 7 SSRE

- C. desert climatic region
D. temperate climatic region
33. _____ is known as a plateau within a plateau
A. Merti B. Yatta
C. Laikipia D. Uasin Gishu
34. *i) it is grown on estate on small scale
ii) it is commonly used as a food spice
iii) the crop is usually intercropped with coconuts*
The World largest produce of the crop mentioned above is _____
A. Zanzibar B. Mauritius
C. Tanganyika D. Madagascar
35. The lower Tana River projects, that have not yet been completed are
A. Masinga and Kiambere dams
B. Kiambere and Mutonga dams
C. Mutonga and grand falls dams
D. Kiambere and Grand falls dams
36. Which one of the following species of trees is odd one out?
A. Mahogany B. Spruce
C. Teak D. Obeche
37. Main inland fishing ground in Africa is
A. L. Nasser
B. L. Victoria
C. L. Chad
D. L. Tanganyika
38. Which one of the following is not an important reasons for holding the school assembly?
A. Announcements are made by teachers
B. The wrong - doers are punished by the headteacher
C. The morning prayer is conducted
D. The flag hoisting ceremony takes place
39. Kenyan citizens are allowed to register as voters when they
A. become members of political parties
B. have completed primary level education
C. participate in development projects
D. have attained the age of 18 years
40. A good citizen of Kenya is one who
A. obeys the laws of the land
B. attends political rallies regularly
C. owns alot of property
D. attend prayer meetings regularly
41. In order for a section of the constitution to be affected it should get a majority support of
A. all the members of parliament
B. two thirds of the members of parliament
C. three quarters of the members of parliament
D. all members of the opposition
42. Which one of the following was not a function of the Kabaka of Buganda?
A. He was the overall head of the kingdom
B. He was the chief judge
C. He let the army during the war
D. He was the commander - in - chief of the army
43. Who led the Ethiopians in resting the Italians at the battle of adowa in 1896?
A. Menelik III
B. Abuma Zaiduti
C. Haile Selasie
D. Menelik II
44. Which one of the following is not a principle of democracy?
A. Promotion of justice for all
B. Promotion of equality before the law
C. Provision of unequal opportunities for all citizens
D. Recognizing that power belongs to the citizens
45. Which one of the following is not a benefit of democracy?
A. It promotes transparency and accountability
B. It promotes fairness to all
C. It enables citizens to say anything they want
D. It allows positive criticism of the government
46. The electoral commission officer incharge of voting in a polling station is the
A. returning officer
B. supervisor of the elections
C. presiding officer
D. candidate agents
47. Which one of the following is not a reason why peace in the society is important?
A. It promotes cattle rustling

STD 7 SSRE

- B. It helps in the creation of a just society
 C. It promotes co - operation amongst people
 D. It enables people to remain in harmony with one another
48. Which of the following is **not** a symbol of national unity?
 A. The constitution B. Coat of arms
 C. The national flag D. The national seal
49. Which one of the following undermines law and order?
 A. Faithfulness B. Equality
 C. Nepotism D. Patriotism
50. Who is elected to represent citizens in a constituency in Kenya?
 A. Women representative
 B. Senator
 C. Member of parliament
 D. Member of county assembly
51. Which one of the following is **not** a cause of conflict in society?
 A. Religious differences
 B. High poverty levels
 C. Equal distribution of resources
 D. Gender discrimination
52. Which one of the following is the arm of government that implements its policies?
 A. Legislature B. Executive
 C. Judiciary D. Cabinet
53. Which one of the following is away through which one may become a Kenyan citizen?
 A. By nomination
 B. By election
 C. By recommendation
 D. By registration
54. The following are problems facing IGADS programmes in the horn of Africa except
 A. political stability in the region
 B. poor means of transport
 C. inadequate funds to run the activities
 D. shortage of rainfall
55. Elections in Kenya are conducted by the
 A. parliament
 B. independent electoral and boundaries commission
 C. constitution review commission of Kenya
 D. returning officer
56. Abdallah, the area chief was told to go and solve a dispute between teachers and the headteacher in Namakolo Primary school. Which of the following peaceful methods did he use?
 A. Reconciliation B. Arbitration
 C. Dialogue D. Negotiation
57. Oil discovery in Nigeria led to the following benefits **except** one. Which one?
 A. Decline in agriculture output
 B. Establishment of oil related industries
 C. Creation of jobs opportunities in Nigeria
 D. Increased foreign exchange earning
58. Miombo woodland in central Tanzania and Lambwe valley in Kenya have got one thing in common. Which one?
 A. Densely populated areas
 B. Good farming areas
 C. Areas infested with tsetseflies
 D. Both areas receives high rainfall
59. Who swears in the speakers of the national assembly?
 A. Attorney General
 B. Chief justice
 C. Clerk to the national assemble
 D. The speaker
60. Three of the following are members of parliament **except**
 A. Cabinet secretaries
 B. Member of parliament
 C. The speaker
 D. Senator
- PART II : C.R.E**
61. Adam and Eve hid from God in the garden of Eden because they
 A. built a place of worship
 B. ate the forbidden fruit
 C. talked to the serpent
 D. worshipped idols

STD 7 SSRE

62. The sign of covenant made between Noah and God was
- fire
 - circumcision
 - rainbow
 - last supper
63. What was Moses doing in Midian when the Israelites were living in Egypt as slaves?
- He was working for Jethro
 - He had gone to marry Zipporah
 - He had gone to worship
 - He was hiding from possible persecutions
64. Which one of the following statements about the ark of the covenant is **not true**?
- God made its dimensions
 - The Jews made it while in Egypt
 - It was carried by the priests
 - King David brought it to Jerusalem
65. Jacob wrestled with an angel of the lord at
- Peniel
 - Moreh
 - Bethel
 - Schechem
66. Which of the following commandments was broken by Cain?
- Do not commit murder
 - Do not steal
 - Do not accuse anyone falsely
 - Do not commit adultery
67. King Saul was angry with David mainly because
- David was more successful in war
 - David was talented in playing harp
 - Saul did not like David's friendship with Jonathan
 - David had been anointed king by Samuel
68. Who among the following foretold that Jesus would enter Jerusalem riding on a donkey?
- Zachariah
 - Micah
 - Joel
 - Isaiah
69. Which one of the following books of the New Testament is a book of prophecy?
- Acts
 - Revelation
 - Galatians
 - Romans
70. Which one of the following actions took place when John the Baptist was born?
(Luke 1 :64 - 65)
- The angels sang
 - There was an earth quake
 - Zechariah began to speak
 - Mary visited Elizabeth
71. During the baptism of Jesus, three of the following took about except one. Which one is it?
- The heaven opened
 - The Holy Spirit came down like a dove
 - A voice was heard from Heaven
 - There was a strong wind
72. Which one of the following parables of Jesus teaches about persistence in a prayer?
- The parable of the widow and judge
 - The parable of the mustard seed
 - The parable of the sower
 - The parable of the lost sheep
73. The woman with the flow of blood was healed
- because of her faith
 - because Jesus forgave her sins
 - on sabbath
 - she had suffered for along time
74. The healing of the ten lepers teaches Christians to be
- repentant
 - prayerful
 - kind
 - thankful
75. Who among the following apostles accompanied Jesus in the Garden of Gethsemane?
- Peter, John and Andrew
 - John, Andrew and James
 - Peter , John and Judas Iscariot
 - Peter , John and James

76. Jesus had transfigured on
 A. mount Hermon
 B. mount Olives
 C. mount Calvalry
 D. mount Sinai
77. Who among the following prophets foretold the coming of the Holy Spirit?
 A. Joel B. Amos
 C. Isaiah D. Micah
78. Who among the following was **not** among the seven deacons?
 A. Stephen B. Timon
 C. Paul D. Nicolas
79. Apostle Mathias was chosen to replace
 A. James B. Stephen
 C. Thomas D. Judas Iscariot
80. In which of the following place were the first believers first called Christians?
 A. Nazareth
 B. Nain
 C. Antioch
 D. Capernaum
81. When Jesus was arrested (**Mathew 26 : 27**) and persecuted, who was the high priest?
 A. Sunhedren
 B. herod
 C. Caiaphas
 D. Pontius pilate
82. Which one of the following is a similarity between traditional African society and Christianity?
 A. Reading of Bible scriptures
 B. Worshipping while facing sacred places
 C. Leading of worship by religious specialists
 D. Presence of Jesus Christ
83. Which one of the following is **not** a quality of a committed Christian?
 A. Self - denial B. Intolerance
 C. Good deeds D. Compassion
84. Which one of the following is **not** a fruit of the Holy Spirit?
 A. Wisdom B. Peace
 C. Faithfulness D. Humility
85. The special meal that Jesus shared with His disciple before he was arrested is known as
 A. holy meal
 B. holy communion
 C. holy supper
 D. last supper
86. What was the main virtue expected of a youth after initiation in traditional African Society?
 A. Obedience
 B. Humility
 C. Responsibility
 D. Honesty
87. Who among the following specialists is found in traditional African societies?
 A. Pastor
 B. Nun
 C. Bishop
 D. Rainmaker
88. Your classmate has refused to lend you a pen. As a christian what action would you take?
 A. Tell her to help others
 B. Report her to the class prefect
 C. Ask the classteacher to talk to her
 D. Ask people to do good
89. Which is the **best** way for a std 7 pupil to use leisure time?
 A. Helping the needy
 B. Playing football
 C. Reading Bible
 D. Visiting neighbours
90. Timothy a std 7 boy avoids paying bus fare on his way to school by hiding himself. Which Christian value does he lack?
 A. Fairness
 B. Kindness
 C. Honesty
 D. Generosity

STD 7 SSRE