
STANDARD FOUR MID-TERM 3 EXAMS

2016 SCIENCE

Coordinated by KENPRO,
Macjo Arcade, 4th Floor, Suite 15E,
Off Magadi Road, Ongata Rongai |Tel: +254202319748 |
E-mail:infosnkenya@gmail.com | Website:www.schoolsnetkenya.com

SCIENCE

TIME: 1 HR 40 MIN

1. Which one of the following is the function of the teeth drawn below?




- A. Tearing
B. Biting
C. Chewing
D. Grinding
2. Which one of the following is **not** a reason why animals move?
- A. To look for food
B. To look for water
C. To look for enemies
D. To look for shelter
3. Which one of the following is an example of unwanted plant?
- A. Maize
B. Coffee
C. Sunflower
D. Blackjack
4. The following are ways in which animals protect themselves from enemies **except**
- A. Walking
B. Flying away
C. Coiling
D. Stinging
5. HIV stands for,
- A. Human Immune Virus
B. Human Immunodeficiency Virus
C. House Immune Virus
D. HIV/AIDS

6. An example of a beverage crop is _____
- A. cotton
B. coffee
C. sunflower
D. wheat
7. Which one of the following is **not** a use of soil?
- A. Eating
B. Modelling
C. Building
D. Farming
8. A lot of water can be transported using _____
- A. dams
B. cans
C. tankers
D. water
9. The first type of teeth to shed are:-
- A. canines
B. incisors
C. molars
D. premolars
10. _____ makes moving easier?
- A. Wheelbarrow
B. Ladder
C. Wheels
D. Spade
11. Which one of the following plants grows in dry areas?
- A. Mangroves
B. Acacia
C. Reeds
D. Maize

STD 4 SCIENCE

12. The type of leaf drawn below belong to a _____ plant.



- A. maize
- B. sugarcane
- C. beans
- D. sisal

13. We eat the stem of a _____ plant.

- A. carrot
- B. onions
- C. cassava
- D. sugarcane

14. Which one of the following is a sense organ for sight?

- A. Eye
- B. Nose
- C. Tongue
- D. Skin

15. A class four boy wanted to make a toy car. Which one of the following materials could not be used to make wheels?

- A. Maize cobs
- B. Sand
- C. Bottle tops
- D. Lids

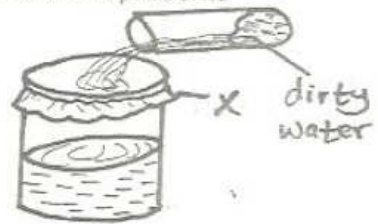
16. A true insects has _____ legs.

- A. eight
- B. four
- C. six
- D. ten

17. On a cold day we wear _____ around the neck.

- A. shirt
- B. vest
- C. T- shirt
- D. scarf

18. The part marked x represents



- A. piece of cloth
- B. clean water
- C. dirty water
- D. soil

19. Nimbus clouds have a _____ colour.

- A. white
- B. yellow
- C. blue
- D. dark grey

20. Gestures are _____ that people make with their bodies to tell others something.

- A. movements
- B. noises
- C. words
- D. smiling

21. Weeds cannot be controlled by _____

- A. watering them
- B. weeding
- C. uprooting
- D. slashing

22. _____ is used to cut big trees.

- A. Panga
- B. Knife
- C. Saw
- D. Axe

23. To be healthy we must eat _____

- A. too much food
- B. very little food
- C. a balanced diet
- D. fried food

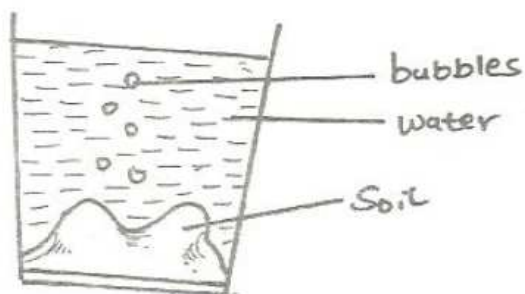
24. Poultry are classified into _____ and _____
- beef and dairy
 - layers and broilers
 - layers and dairy
 - beef and broilers

25. For healthy strong teeth, one should eat
- vegetables
 - cakes
 - sweets
 - honey

26. Which one of the following animals is not found in soil?
- Chameleon
 - Millipede
 - Safari ants
 - Mole

27. All animals _____
- make food
 - lay eggs
 - give birth
 - reproduce

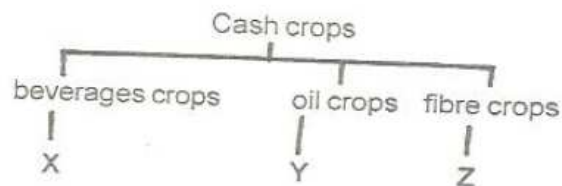
28. The experiment below was carried out by pupils at Bidij Primary school?



- What were the pupils investigating?
- Soil in water
 - Air in soil
 - Bubbles in water
 - Air in water

29. Which one of the following is a good table manner when having meals?
- Licking fingers
 - Serving a lot of food
 - Chewing food well before swallowing
 - Chewing food with open mouth

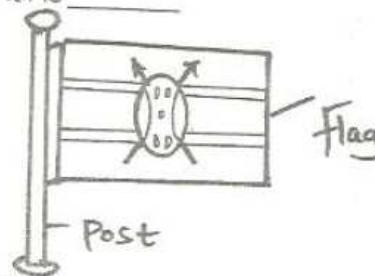
30. Study the diagram below



Which one of the following crops can be placed at the part marked Z?

- Coffee
- Tea
- Sunflower
- Sisal

31. From the diagram below, it is true to say that the weather is _____



- cloudy
- windy
- calm
- rainy

32. Sound travels in _____ directions.
- two
 - four
 - all
 - one

33. Which one of the following food is eaten when not raw?
 A. Oranges B. Carrot
 C. Tomatoes D. Cabbage
34. Which one of the following is a source of water?
 A. Tap B. Tank
 C. Pipe D. Lake
35. Which one of the following is **not** a way of caring for animals?
 A. Watering them B. Feeding them
 C. Beating them D. Housing them
36. An inflated balloon is full of _____
 A. water B. air
 C. soil D. saliva
37. Which one of the following fraction does not affect sinking and floating?
 A. Size B. Shape
 C. Weight D. Material
38. Goats are not kept for _____
 A. milk B. meat
 C. mohair D. wool
39. Kales, spinach and cabbage are all examples of
 A. fruits B. cereal
 C. vegetable D. beverage
40. Which one of the following is a use of water at home?
 A. Irrigation B. bathing
 C. Transport D. Swimming
41. The instrument below produces sound when
 A. blown B. plucked
 C. beaten D. bitten
42. We should not _____ a towel.
 A. share B. wash
 C. use D. store
43. Most animals have one _____
 A. leg B. ear
 C. eye D. tail
44. Holes in enamel part of teeth are known as
 A. dentines B. cavities
 C. gingivities D. dental carries
45. Which one of the following is not an harmful animal?
 A. Snake B. Spider
 C. Fish D. Tick
46. Cows removes solid wastes in the form of
 A. dung B. soil
 C. pellets D. urine
47. Shadows are shortest in the _____
 A. morning B. evening
 C. noon D. 8 o'clock
48. After hardwork the body needs _____
 A. sleep B. medicine
 C. food D. rest
49. Which statement is **incorrect** about molars?
 A. They are the last to shed off
 B. They grow last
 C. They have three roots
 D. They are located at the back of mouth
50. _____ is the best soil in building?
 A. Sand
 B. Clay
 C. Loam
 D. Loam and clay