
STANDARD ONE MID-TERM 3 EXAMS

2016 MATHEMATICS

Coordinated by KENPRO,
Macjo Arcade, 4th Floor, Suite 15E,
Off Magadi Road, Ongata Rongai | Tel: +254202319748 |
E-mail: infosnkenya@gmail.com | Website: www.schoolsnetkenya.com

STANDARD ONE MATHEMATICS

NAME :	
SCHOOL :	

1. 

2. $5 - 4 = \underline{\quad}$

3. $6 + 3 + 6 = \underline{\quad}$

4. $8 + 0 + 0 = \underline{\quad}$

Write in words.

5. $19 = \underline{\hspace{2cm}}$

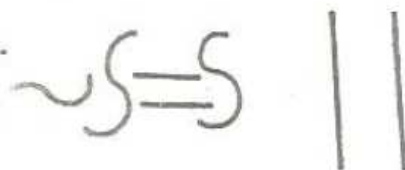
6. $15 = \underline{\hspace{2cm}}$

7. $12 = \underline{\hspace{2cm}}$

8.
$$\begin{array}{r} 5 \\ 7 \\ +7 \\ \hline \hline \end{array}$$

9.
$$\begin{array}{r} 14 \\ -5 \\ \hline \hline \end{array}$$

10. $\underline{\quad} 16 \quad 15 \quad 14 \quad \underline{\hspace{2cm}}$

11. 
How many are straight? $\underline{\quad}$

12.
$$\begin{array}{r} 0 \\ +0 \\ \hline \hline \end{array}$$

13.
$$\begin{array}{r} 9 \\ +9 \\ \hline \hline \end{array}$$

14. A table has $\underline{\quad}$ legs.

Write in order.

15. $8, 3, 0, 6, 1 = \underline{\hspace{2cm}}$

16. $40, 70, 10, 60, 80, = \underline{\hspace{2cm}}$

Match.

17. $4 + 7 =$ 19

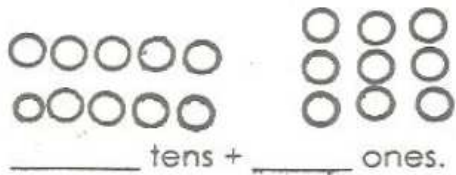
18. $11 + 6 =$ 13

19. $7 + 6 =$ 17

20. $10 + 7 =$ 11

21. Ten take away ten = $\underline{\hspace{2cm}}$

22.



23. Monday _____, Wednesday

24. $10 + \square = 16$

25. $9 - \square = 7$

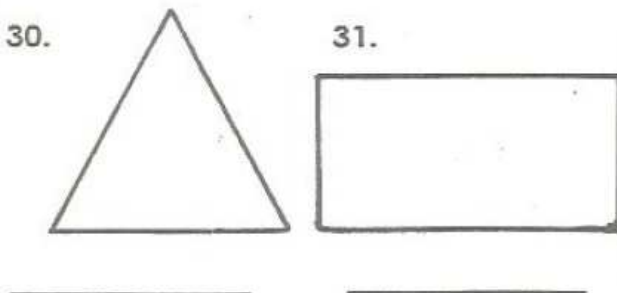
26. $\square + 3 = 9$

$$\begin{array}{r} 7 \\ + 10 \\ \hline \hline \end{array}$$

$$\begin{array}{r} 11 \\ - 4 \\ \hline \hline \end{array}$$

29. _____ + 6 = 10

Name the shapes.



32. 3 tens + 3 ones = _____

33. You have _____ fingers.

34. Eleven + seven = _____

Write in figures.

35. Twelve _____

36. Eighteen _____

37. Zero _____

38. Thirteen _____

$$\begin{array}{r} 50 \\ + 30 \\ \hline \hline \end{array}$$

40. $40 - 20 =$ _____

41. _____	nine	_____	Eleven
-----------	------	-------	--------

42. How old are you? _____

43. Seven days = _____ week.

44. Six boys have _____ noses.

45. $10 + 0 =$ _____

Fill in the missing letters.

46. S _____ nday

47. Sh _____ pes

Match the symbol.

48. Addition =

49. is equal +

50. Subtraction -