

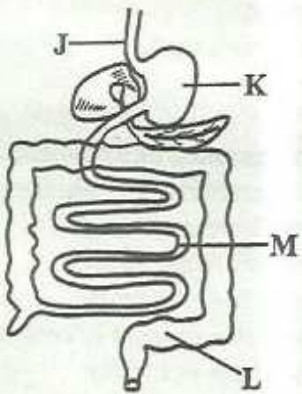
PRIMARY END TERM 3 EXAMS 2016

SCIENCE STD 5

Osiligi House, Opposite KCB, Ground Floor
Off Magadi Road, Ongata Rongai | Tel: 0711 88 22 27
E-mail: infosnkenya@gmail.com | Website: www.schoolsnetkenya.com

SCIENCE

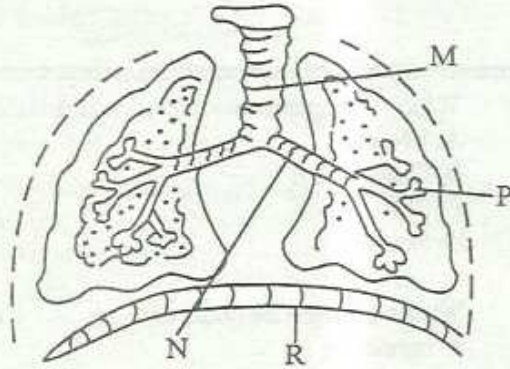
TIME: 1 HRS 40 MIN

1. Amount of medicine to be taken at a time is
 - A. tablet
 - B. dosage
 - C. expiry date
 - D. curatives
 2. In which part of the digestive system does digestion begin?
 - A. Stomach
 - B. Small intestine
 - C. Mouth
 - D. Large intestine
 3. The following are products from a goat **except**
 - A. mutton
 - B. milk
 - C. mohair
 - D. beef
- Use the diagram below to answer question 4 - 5
- 
4. The part marked N is known as
 - A. small intestine
 - B. rectum
 - C. pancreas
 - D. gall bladder
 5. Water and mineral salts are absorbed in the part marked

A. K	B. J
C. M	D. L
6. Which one is **not** a source of natural light?
 - A. Moon
 - B. Glow worm
 - C. Sun
 - D. Star
 7. Weeds can best be controlled by
 - A. uprooting
 - B. slashing
 - C. digging out
 - D. burning
 8. The following are special sounds **except**
 - A. screaming
 - B. singing in a choir
 - C. fire siren
 - D. ringing a bell
 9. The following are organs of the breathing system **except**
 - A. liver
 - B. trachea
 - C. bronchus
 - D. lungs
 10. The sense organ for sight is the
 - A. nose
 - B. ear
 - C. mouth
 - D. eye
 11. A ship floats in water mainly because of its
 - A. size
 - B. shape
 - C. material
 - D. colour
 12. Which weed can be used as vegetable?
 - A. Pigweed
 - B. Oxalis
 - C. Datura
 - D. Sodom apple

13. The following are cereal crops **except**
- | | |
|-----------|----------|
| A. wheat | B. rice |
| C. barley | D. beans |

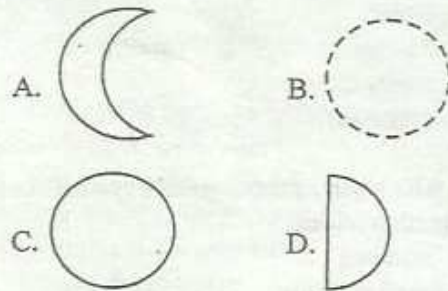
Use the diagram below to answer questions 14 - 15



14. Gaseous exchange takes place in the part marked
- | | |
|------|------|
| A. P | B. R |
| C. N | D. M |
15. The part marked R is called
- trachea
 - bronchus
 - diaphragm
 - lungs
16. Which of these animals protects itself by coiling?
- Centipede
 - Frog
 - Chameleon
 - Millipede
17. Which one is not a problem related to teeth?
- Dental plaque
 - Dental carries
 - Dental floss
 - Dental cavities
18. Neem plant is **mainly** used to make
- clothes
 - drinks
 - medicine
 - furniture

19. The following are reasons why it is important to light a house. Which one is **not**?
- To keep the house warm
 - To enable us read easily
 - To keep pests away
 - To keep the house safe

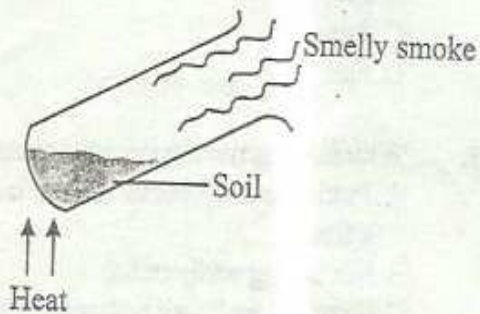
20. Which phase of the moon below is always invisible?



21. In the initials AIDS, letter S stands for Syndrome meaning
- lack of
 - got from
 - protection against
 - many signs
22. The following are characteristics of animals **except**
- they germinate
 - they feed
 - they remove waste
 - they grow
23. Omollo was asked by the Science teacher to give the characteristics of nimbus clouds. He gave the following:
- Dark grey in colour
 - Sign of heavy rainfall
 - Looks like bundles of cotton wool
 - Found low in the sky
- Which characteristic was not correct?
- | | |
|--------|-------|
| A. iii | B. i |
| C. iv | D. ii |
24. Which type of soil makes the longest ribbons?
- Sand
 - Loam
 - Clay
 - Both loam and sand

25. Filtering water helps to remove
 A. germs
 B. taste
 C. colour
 D. dirt
26. Onsarigo observed the sky during the day. Which of the following could he not see?
 A. Stars
 B. Moon
 C. Sun
 D. Clouds
27. A guitar produces sound when it is
 A. hit
 B. blown
 C. plucked
 D. shaken
28. The following are sources of water **except**
 A. ocean
 B. river
 C. rainfall
 D. tap
29. Which of the following is **not** a way of taking care of animals?
 A. Housing them
 B. Feeding them
 C. Beating them
 D. Giving them water
30. The type of teeth shown below is used for
-
- A. biting food
 B. tearing food
 C. cutting food
 D. grinding food
31. The following are uses of heat **except**
 A. ironing clothes
 B. taking photographs
 C. cooking food
 D. warming the house
32. A normal person has how many sense organ?
 A. five
 B. six
 C. three
 D. four
33. Which one is **not** a good table manners?
 A. Putting small portions of food in the mouth at a time
 B. Not talking while eating
 C. Chewing food well before swallowing
 D. Licking fingers while eating
34. Which of the following crops is an oil crop?
 A. Sunflower
 B. Beans
 C. Millet
 D. Barley
35. A person who can see small things clearly is said to have
 A. weak eye sight
 B. strong eyesight
 C. poor eyesight
 D. sick eyesight
36. A drum produces sound when it is
 A. blown
 B. plucked
 C. rang
 D. hit
37. Which one of the following is **not** a tuber crop?
 A. Sweet potatoes
 B. Arrow roots
 C. Cabbages
 D. Yams
38. People mostly use umbrellas when the weather is
 A. rainy
 B. cloudy
 C. windy
 D. calm
39. The best soil for cultivation is
 A. clay
 B. sand
 C. loam
 D. both sand and loam

40. Class four pupils performed the experiment below.



- Which component of soil were they investigating?
- A. Air
B. Organic matter
C. Water
D. Living organisms
41. Winnowing grains is best done when the weather is
- A. windy
B. calm
C. rainy
D. cloudy
42. Poultry kept for meat are known as
- A. layers
B. broilers
C. dairy
D. beef
43. The sun appears bigger than the stars because the sun
- A. is far away than the stars
B. is nearer than the stars
C. is naturally bigger than the stars
D. is hotter than the stars
44. Which of these clouds appears like bundles of cotton wool and have a flat base?
- A. Cirrus
B. Nimbus
C. Cumulus
D. Stratus
45. Which of these animals lives in soil?
- A. Antlion
B. Butterfly
C. Tick
D. Mosquito
46. AIDS is a disease that
- A. has a cure
B. has no cure
C. affects only women
D. cannot infect children
47. The following are ways of taking care of simple tools. Which one is not?
- A. Using them regularly
B. Sharpening cutting tools
C. Cleaning tools after use
D. Storing tools safely
48. Animals move because of the following reasons except
- A. to look for food
B. to escape from danger
C. to look for a partner
D. to look for an enemy
49. A person who treats the eyes is called
- A. dentist
B. veterinary
C. optician
D. surgeon
50. The following are ways of transporting water except
- A. pipes
B. dams
C. tankers
D. animals