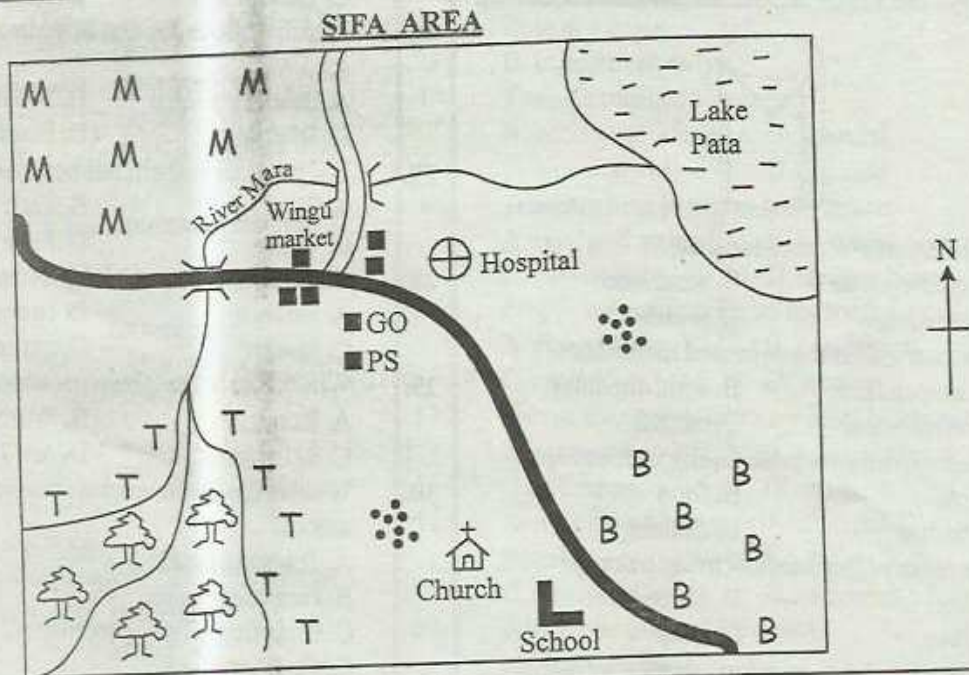


PRIMARY END TERM 3 EXAMS 2016

SOCIAL STUDIES AND CRE STD 4

Osiligi House, Opposite KCB, Ground Floor
Off Magadi Road, Ongata Rongai | Tel: 0711 88 22 27
E-mail: infosnkenya@gmail.com | Website: www.schoolsnetkenya.com

SOCIAL STUDIES & C.R.E



KEY

	Forest		River and Bridge	T	Tea	P.S - Police Station
	Tarmac Road	M	Maize		Village	G.O - Governor's Office
	Murrum Road	B	Beans		Permanent houses	

Use the map of Sifa area to answer questions 1 - 7

- River Mara flows from a _____.
A. dam B. lake
C. forest D. farm
- The people of Sifa area are likely to be
A. christians B. muslims
C. hindus D. traditionalists
- The main means of transport in Sifa area is
A. air B. railway
C. water D. road
- Which cash crop is grown in Sifa area?
A. Maize B. Beans
C. Tea D. Coffee
- How many bridges are in Sifa area?
A. Two B. Four
C. Five D. Three
- Sifa area is headed by a

- senator
B. governor
C. county representative
D. member of parliament
- What is the direction of the lake from the forest?
A. North West B. South East
C. South West D. North East
- Which one is **not** an element of weather?
A. Temperature B. Vegetation
C. Wind D. Sunshine
- A compass has how many cardinal points?
A. Eight B. Two
C. Four D. Six
- Who is **not** a member of the nuclear family?
A. Uncle B. Mother
C. Child D. Father
- Pupils go to school mainly to
A. make friends B. play
C. eat D. learn

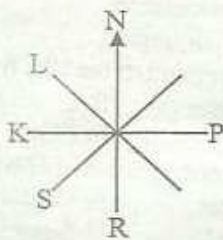
12. The following are moral values except
 A. honesty B. stealing
 C. obedience D. humility
13. Which of the following buildings is **not** found in a school?
 A. Hotel B. Staffroom
 C. Toilet D. Classroom

Use the diagram below to answer questions 14 - 15



14. The instrument above is called
 A. thermometer B. windvane
 C. raingauge D. windsock
15. The instrument above is used to measure
 A. temperature B. wind direction
 C. wind speed D. rainfall
16. The following are basic family need **except**
 A. radio B. food
 C. shelter D. clothing
17. The national flag has how many colours?
 A. Six B. Three
 C. Five D. Four
18. All children have a right to
 A. work B. be beaten
 C. be abused D. education
19. Which one is an item used by pupils in classroom?
 A. Ladder B. Ruler
 C. Wheelbarrow D. Car

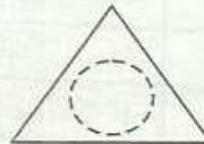
Use the diagram below to answer questions 20 - 21



20. Which part is not a cardinal point of a compass?
 A. N B. K
 C. P D. S
21. The point marked L is
 A. North East B. North West
 C. South West D. South East
22. Many trees growing together form a
 A. river B. forest
 C. hill D. slope

23. Kenya is divided into how many counties
 A. 47 B. 8
 C. 290 D. 60
24. A raise land that is fairly flat on top is known as
 A. valley B. plateau
 C. slope D. river
25. On 12th December we celebrate
 A. Madaraka day B. Mashujaa day
 C. Labour day D. Jamhuri day
26. Which of the following helps in identifying a school?
 A. School uniform B. Toilet
 C. Television D. Field
27. The national anthem has how many stanzas?
 A. Two B. Four
 C. Three D. Five
28. Children should not take gifts from
 A. teachers B. strangers
 C. friends D. parents
29. Which one is the fastest means of transport?
 A. Road B. Water
 C. Railway D. Air
30. What is the **main** work of the watchman at school?
 A. Teaching pupils
 B. Punishing pupils
 C. Guarding school property
 D. Cooking food

31. The road sign below shows



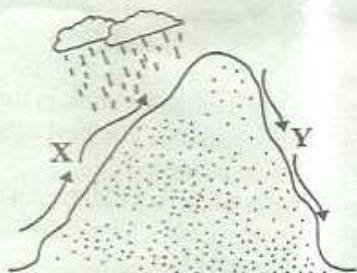
- A. bumps ahead B. roundabout ahead
 C. danger ahead D. no entry
32. What is the **main** work of the police in our county?
 A. Beating up people
 B. Punishing law breakers
 C. Maintaining law and order
 D. Taking people to prison
33. Who is our president?
 A. William Ruto B. Mwai Kibaki
 C. Raila Odinga D. Uhuru Kenyatta
34. Children should not play
 A. using toys
 B. with their friends
 C. at the playground
 D. near open pits

35. The type of house below belongs to the



- A. Agikuyu B. Luo
C. Maasai D. Akamba
36. The colour of the national flag that symbolises peace is
A. white B. red
C. black D. green
37. Who is the head of a school?
A. Class teacher B. Headteacher
C. Senior teacher D. Prefect
38. The following are natural physical features **except**
A. bridge B. hill
C. valley D. mountain
39. While in class pupils should do all the following **except**
A. writing notes
B. making noise
C. listening to the teacher
D. reading books
40. The following are economic activities **except**
A. singing and dancing B. fishing
C. mining D. farming
41. A well behaved child _____ the parents.
A. abuses B. hates
C. respects D. beats
42. Vegetation growing along a river is called
A. riverine B. savannah
C. cactus D. bamboo
43. The room where we sleep is called
A. bathroom B. kitchen
C. bedroom D. sitting room
44. Who among the following are my parents?
A. Sister and brothers
B. Uncle and sister
C. Grandmother and brother
D. Mother and father

Use the diagram below to answer questions 45 - 48



45. The type of rainfall above is called
A. relief B. convectional
C. frontal D. cyclonic
46. The side marked X is called
A. leeward B. rainshadow
C. windward D. dry side
47. The type of rainfall above is received
A. in areas near large water bodies
B. in highland areas
C. in dry areas
D. in hot areas only
48. The side marked Y is called
A. windward B. leeward
C. wet side D. dry side
49. Teachers help pupils to learn how to
A. read and write B. fight with each other
C. eat food D. sleep at home
50. People riding bicycles on the road are called
A. pedestrians B. passengers
C. cyclists D. settlers
51. People living near lakes are most likely to be
A. fishermen B. pastoralists
C. miners D. teachers
52. At school teachers **mostly** sit in the
A. toilet B. kitchen
C. staffroom D. bathroom
53. Which one is **not** child abuse?
A. Beating a child
B. Not taking a sick child to school
C. Forcing a child to go to school
D. Not giving a child food
54. Small rivers that join the main one are called
A. confluence B. dams
C. lakes D. tributaries
55. Areas where very many people are living in are said to be
A. sparsely populated B. densely populated
C. lowly populated D. less populated
56. At school pupils should keep the school compound
A. dirty B. untidy
C. unclean D. tidy
57. Rivers mostly flow from
A. highlands B. plains
C. lakes D. valleys
58. While getting into school pupils should use
A. windows B. the fence
C. the gate D. the roof
59. Who is our deputy president?
A. Uhuru Kenyatta B. William Ruto
C. Kalonzo Musyoka D. Raila Odinga
60. People put on gumboots when it is
A. dusty B. sunny
C. dry D. muddy

SECTION II
CHRISTIAN RELIGIOUS EDUCATION

61. Our first parents were Adam and _____.
A. Eve B. Peninah
C. Sarah D. Salome
62. During the time of Noah God destroyed the earth using
A. fire B. wind
C. floods D. clouds
63. Joseph's brothers sold him **mainly** because of
A. lack of food B. jealousy
C. love D. honesty
64. Who was the first king in Israel?
A. David B. Solomon
C. Samuel D. Saul
65. Naboth refused to give king Ahab
A. his children B. his house
C. his vineyard D. his animals
66. The first book in the bible is
A. Genesis B. Exodus
C. Matthew D. Malachi
67. God gave Moses the ten commandments on mount
A. Nebo B. Camel
C. Sinai D. Ararat
68. The best gift that King Solomon asked from God was
A. wisdom B. wealth
C. wives D. strength
69. The Israelites celebrated their first passover feast in
A. Jerusalem B. Egypt
C. Canaan D. Jericho
70. Which commandment has a promise?
A. Do not kill
B. Do not worship idols
C. Do not steal
D. Honour your father and mother
71. The father of John the baptist was called
A. Elikanah B. Zachariah
C. Jeseo D. Joseph
72. John the baptist baptised people in river
A. Jordan B. Tigris
C. Euphrates D. Tiberias
73. Who gave baby Jesus gifts?
A. Shepherds B. Disciples
C. King Herod D. Wisemen
74. Jesus was a refugee in
A. Nazareth B. Cana
C. Egypt D. Bethlehem
75. Jesus changed water into wine in a
A. burial B. birthday ceremony
C. wedding D. passover feast
76. How many disciples did Jesus choose?
A. Five B. Twelve
C. Eight D. Sixty
77. Jesus told us that we should _____ our enemies.
A. beat B. hate C. kill D. love
78. Who among the following made a wrong choice?
A. Annanias and Saphirra B. Simon Peter
C. Abraham D. Moses
79. Lazarus and his sisters lived in the town of
A. Nain B. Jericho
C. Bethany D. Nazareth
80. Who betrayed Jesus?
A. Simon Peter B. Judas Iscariot
C. Matthew D. Zacheaus
81. The name Emanuel means
A. Saviour B. Laughter
C. God with us D. Messiah
82. Where was Jesus arrested?
A. At the temple
B. At Golgotha
C. At the garden of Gethsemane
D. At Samaria
83. The Maasai call their God
A. Mulungu B. Engoro
C. Enkai D. Were
84. In the past people worshipped God in holy places called
A. mosques B. churches
C. temples D. shrines
85. Who among these people is found in **both** traditional African society and christianity?
A. Priest B. Pastor
C. Witchdoctor D. Bishop
86. In the past children were taught to be
A. rude B. liars
C. obedient D. selfish
87. A good leader is one who is
A. rich B. caring
C. harsh D. fat
88. The bible is _____ book of God.
A. the holy B. the bad
C. the unseen D. the unknown
89. We should be _____ to our friends.
A. helpful B. disobedient
C. rude D. violent
90. John picked an exercise book in the school play ground while playing. The **best** action for him to take as a christian is
A. to give the book to a children's home
B. to leave the book where it was
C. to use the book
D. to give the teacher on duty the book to look for the owner