

PRIMARY END TERM 3 EXAMS 2016

SCIENCE STD 4

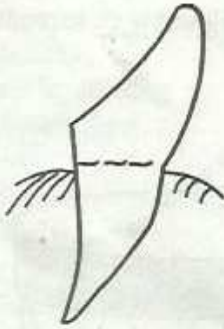
Osiligi House, Opposite KCB, Ground Floor
Off Magadi Road, Ongata Rongai | Tel: 0711 88 22 27
E-mail: infosnkenya@gmail.com | Website: www.schoolsnetkenya.com

SCIENCE

TIME: 1 HRS 40 MIN

1. The following are sources of water **except**
 A. tap B. ocean
 C. river D. lake

2. The type of tooth shown below is known as



- A. molar B. incisor
 C. canine D. premolar

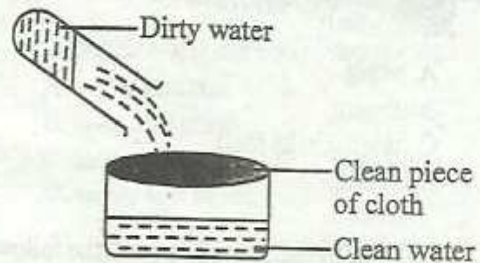
3. Personal items should not be shared because
 A. they are expensive
 B. they can spread diseases
 C. they are very many
 D. they are never washed

4. In the letters AIDS, the letter S stands for Syndrome which means
 A. lack of
 B. get from
 C. body's ability to fight disease causing germs
 D. many signs

5. Which one is **not** a natural source of light?
 A. Moon
 B. Sun
 C. Glow worm
 D. Star

6. The best requirement for good health for a tired person is
 A. medical care
 B. exercise
 C. food
 D. rest

7. The method of making dirty water clean shown below is known as



- A. winnowing
 B. filtering
 C. boiling
 D. cooling

8. To remove food particles that remain in between the tooth, we should use a
 A. handkerchief
 B. toothpaste
 C. dental floss
 D. paper

9. The best shape for a wheel is
 A. square
 B. triangular
 C. circular
 D. rectangular

10. A normal person has how many sense organs?
 A. Six B. Three
 C. Four D. Five

11. Which one is **not** a good behaviour while taking meals?
 A. Chewing food with the mouth wide open
 B. Putting small portions of food in the mouth at a time
 C. Not talking with food in the mouth
 D. Chewing food properly before swallowing

12. Neem plant is **mainly** used to make
 A. furniture B. medicine
 C. drinks D. clothes

13. The following are problems related to teeth **except**
- A. dental cavities
 - B. dental carries
 - C. dentures
 - D. gingivities

14. The animal shown below protects itself by



- A. biting
 - B. stinging
 - C. hiding in its shell
 - D. coiling
15. HIV/AIDS can spread through the following ways **except**
- A. sharing sharp objects
 - B. playing together with an infected person
 - C. having sex with an infected person
 - D. being given blood from an infected person

16. Below is a type of a leaf.



Which of these plants have the same leaf as the one above?


- A. Beans
 - B. Mango
 - C. Sugarcane
 - D. Orange
17. A snake moves by
- A. glidding
 - B. slithering
 - C. flying
 - D. walking
18. At what time of the day is the shadow shortest?
- A. At noon
 - B. In the morning
 - C. In the evening
 - D. In the afternoon
19. The shedding of the teeth begins at the age of
- A. six months
 - B. twelve years
 - C. six years
 - D. two years

20. An optician treats the sense organ for
- A. taste
 - B. hearing
 - C. smell
 - D. sight

21. Which one is an effect of moving air?
- A. Wincwing grains
 - B. Driving windmill
 - C. Felling trees
 - D. Sailing boats and canoes


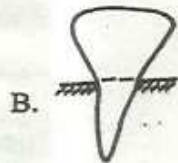
22. What is the taste for honey?
- A. Bitter
 - B. Sweet
 - C. Sour
 - D. Salty

23. The drum below is ____ to produce sound.



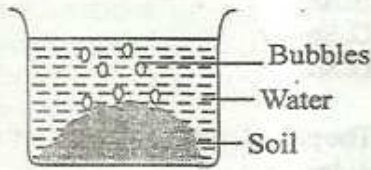
- A. hit
 - B. plucked
 - C. blown
 - D. rang
24. The part of the plant found in the soil is the
- A. flower
 - B. fruit
 - C. leaves
 - D. roots
25. Which of the following small animals is harmful?
- A. Mosquito
 - B. Earthworm
 - C. Millipede
 - D. Butterfly
26. Jane observed the sky at night. Which of the following could she not see?
- A. Moon
 - B. Clouds
 - C. Sun
 - D. Stars

27. The following are special sounds **except**
 A. ambulance siren
 B. ringing of a bell
 C. screaming
 D. shouting
28. An aeroplane when it is high up in the sky, it appears to be small because
 A. it is near us
 B. it is far from us
 C. it has people inside
 D. it is hidden by the clouds
29. Boiling drinking water makes it
 A. have sugary taste
 B. change colour
 C. safe for drinking
 D. blue in colour
30. Which one is **not** part of the leg?
 A. Feet
 B. Knee
 C. Shoulder
 D. Ankle
31. What is the colour of most leaves?
 A. White
 B. Green
 C. Yellow
 D. Black
32. Which one of the following is **not** a way of taking care of animals?
 A. Beating them
 B. Giving them water
 C. Sheltering them
 D. Giving them food
33. Which of the following is **not** part of the first set of teeth?



34. Which small animal lives in a web?
 A. Bee
 B. Ant
 C. Spider
 D. Snail
35. The part of carrot plant that we eat is the
 A. leaves
 B. roots
 C. flowers
 D. seeds
36. When cleaning our body we use clean
 A. water and soil
 B. soap and grass
 C. toothbrush and dust
 D. water and soap
37. Moving air is known as
 A. smoke
 B. dust
 C. water
 D. wind
38. Why should we wash our hands after visiting the toilet?
 A. To start eating
 B. To remove germs
 C. To greet other people
 D. To remove colour
39. A person who lacks the sense of hearing is said to be
 A. deaf
 B. blind
 C. dumb
 D. lame
40. Exercise helps our bodies to be
 A. weak
 B. sick
 C. strong
 D. fat

41. Class three pupils performed the following experiment.



What were they investigating?

- A. Soil in air
 B. Air in soil
 C. Water in air
 D. Soil in water
42. A chameleon protects itself by
 A. running away
 B. stinging
 C. biting
 D. changing colour
43. Milk teeth is also known as
 A. dentures
 B. dental floss
 C. permanent teeth
 D. deciduous teeth
44. Which of these animals has horns?
 A. Pig
 B. Cow
 C. Donkey
 D. Hen

Use the weather chart below to answer questions 45 - 47

Day	Morning	Afternoon
Monday		
Tuesday		
Wednesday		
Thursday		
Friday		

45. Which day was the best for flying a kite?
 A. Thursday
 B. Monday
 C. Tuesday
 D. Friday
46. On which day did people use umbrellas in the afternoon?
 A. Thursday
 B. Monday
 C. Tuesday
 D. Wednesday
47. The weather on Friday morning was
 A. sunny
 B. cloudy
 C. windy
 D. calm
48. Which type of food is good for our teeth?
 A. Cakes
 B. Biscuits
 C. Sweets
 D. Carrots
49. When we keep our feet dirty, we can get
 A. jiggers
 B. lice
 C. mosquitoes
 D. ticks
50. An adult has how many teeth in total?
 A. Twenty eight
 B. Twenty
 C. Thirty two
 D. Thirty