

PRIMARY END TERM 3 EXAMS 2016

MATHEMATICS STD 2

Osiligi House, Opposite KCB, Ground Floor
Off Magadi Road, Ongata Rongai | Tel: 0711 88 22 27
E-mail: infosnkenya@gmail.com | Website: www.schoolsnetkenya.com


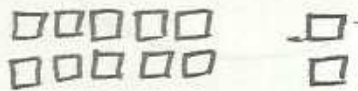
NAME :


SCHOOL :

Write in words or symbols

1. 99 _____
2. 45 _____
3. 54 _____
4. One hundred and one _____
5. Sixty nine _____

Fill in the next number

6. 64, 66, 68, _____
7. 100, 150, 200, _____
8. 90, 95, 100, _____
9. 25, 35, 45, _____
10.  = _____ tens _____ ones
11.  = _____ tens _____ ones

12.  = _____ tens _____ ones

13. 24 = _____ tens _____ ones

14. 68 = _____ tens _____ ones

15. 75 = _____ tens _____ ones

16. Fill in the missing days of the week.
Monday, _____, _____,
_____, _____, Saturday

17. $36 + 40 =$ _____

18. $28 + 20 =$ _____

19. $74 + 26 =$ _____

20. $39 + 30 =$ _____

21. $41 + 10 =$ _____

22. $3 + 3 + 3 =$ _____

23. 60 = _____ tens

24. 40 = _____ tens

25. 20 = _____ tens

