

PRIMARY END TERM 3 EXAMS 2016

MATHEMATICS STD 1

Osiligi House, Opposite KCB, Ground Floor
Off Magadi Road, Ongata Rongai | Tel: 0711 88 22 27
E-mail: infosnkenya@gmail.com | Website: www.schoolsnetkenya.com

STANDARD ONE

MATHEMATICS

NAME :	
SCHOOL :	

Count and write how many



Write in words

4. 7 _____

5. 8 _____

6. 2 _____

3 _____

Add

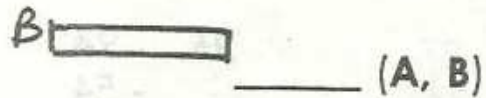
8.
$$\begin{array}{r} \\ + 24 \\ \hline \end{array}$$

9.
$$\begin{array}{r} 44 \\ + 33 \\ \hline \end{array}$$

10.
$$\begin{array}{r} \\ + 10 \\ \hline \end{array}$$

11.
$$\begin{array}{r} 68 \\ + 10 \\ \hline \end{array}$$

12. Which one is longer?

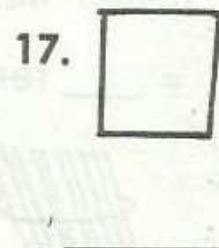
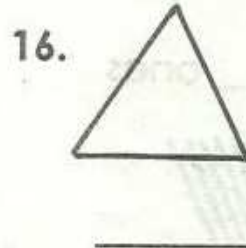


13. $3 + 4 + 1 =$ _____

14. $2 + 3 + 4 =$ _____

15. $4 + 1 + 1 =$ _____

Name the shapes



(circle, square, triangle)

Write in symbols

19. Sixty nine _____

20. Eight five _____

21. Twenty three _____

22. Seventy four _____

Subtract

$$\begin{array}{r} 23. \quad 76 \\ - 24 \\ \hline \end{array}$$

$$\begin{array}{r} 24. \quad 84 \\ - 22 \\ \hline \end{array}$$

$$\begin{array}{r} 25. \quad 87 \\ - 34 \\ \hline \end{array}$$

$$\begin{array}{r} 26. \quad 94 \\ - 54 \\ \hline \end{array}$$

$$\begin{array}{r} 27. \quad 88 \\ - 36 \\ \hline \end{array}$$

$$\begin{array}{r} 28. \quad 68 \\ - 42 \\ \hline \end{array}$$

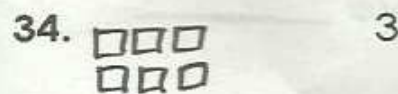
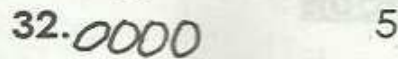


= _____ tens _____ ones



= _____ tens _____ ones

Match the pictures with their numbers




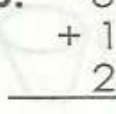
35. One boy has _____ fingers.

36. $24 =$ _____ tens _____ ones

37. $69 =$ _____ tens _____ ones

38. $75 =$ _____ tens _____ ones

39.
$$\begin{array}{r} 2 \\ + 4 \\ \hline 2 \end{array}$$
 

40.
$$\begin{array}{r} 8 \\ + 1 \\ \hline 2 \end{array}$$
 

41. $10 + 20 =$ _____

42. $30 + 40 =$ _____

43. $50 + 30 =$ _____

Fill in the missing numbers

44. 30, _____, 33, _____, 35


45. 10, _____, 30, 40, _____

46. 61, _____, 63, 64, 65, _____

47. Take away 36 from 98
= _____

48. Write seventy four in symbols _____

49. There are _____ days in a week.

50. This is a _____ line 
(zigzag, curved)