

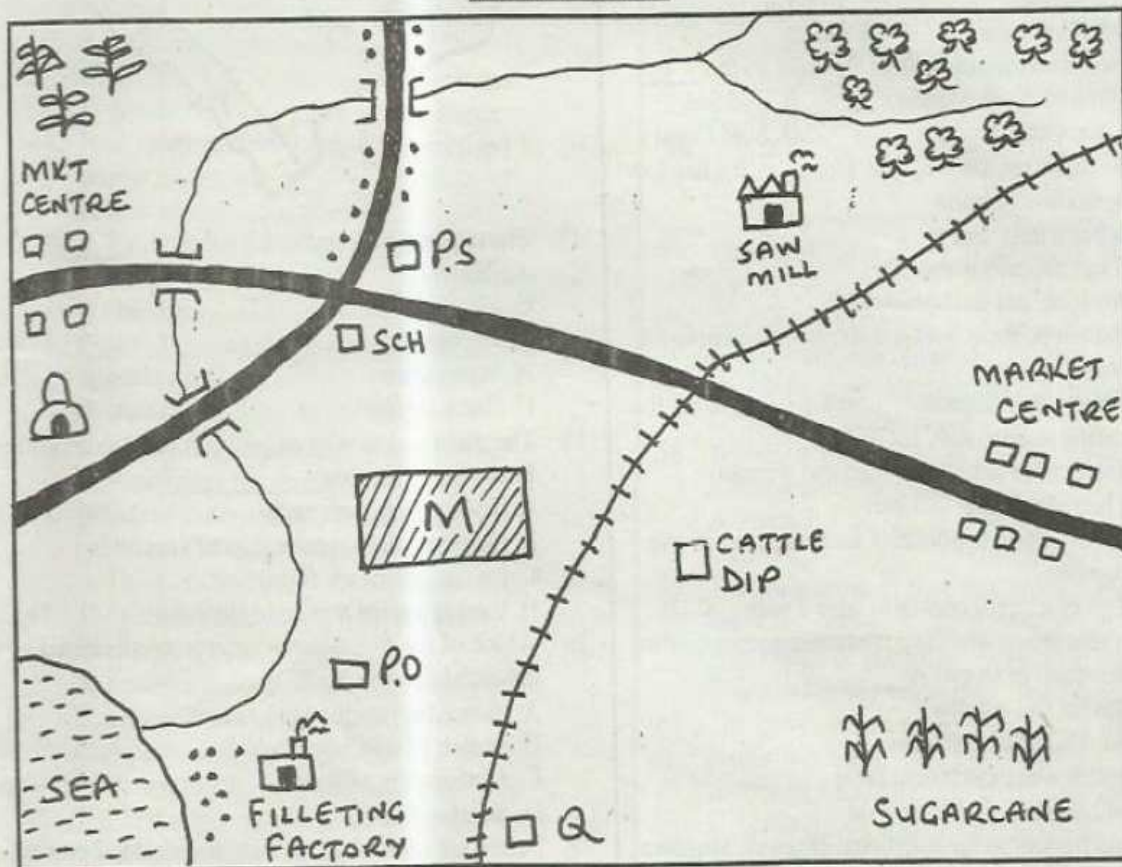
---

# STANDARD SEVEN YEAR 2016

## **END-TERM 2, SOCIAL STUDIES/CRE PAPER 2HR-15MINS**

Coordinated by KENPRO,  
Macjo Arcade, 4th Floor, Suite 15E,  
Off Magadi Road, Ongata Rongai |Tel: +254202319748 |  
E-mail:infosnkenya@gmail.com | Website:[www.schoolsnetkenya.com](http://www.schoolsnetkenya.com)

## MOLU AREA



SCALE



KEY

|  |                |  |                  |     |                |  |          |
|--|----------------|--|------------------|-----|----------------|--|----------|
|  | Bananas        |  | Temple           | P.O | Police office  |  | Saw mill |
|  | Factory        |  | Maize plantation | P.S | Police station |  | Forest   |
|  | River & bridge |  | Tarmac road      |     |                |  |          |

**Study the map of Molu Area to answer questions 1-7**

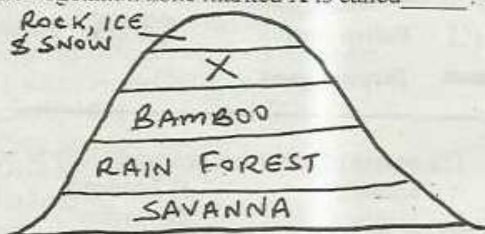
- What is the direction of the saw mill from the maize plantation?  
A. South West      B. North West  
C. North East      D. South East
- Which factory is likely to be at the place marked Q?  
A. saw milling      B. maize milling  
C. sugar processing      D. bee farming
- The climate at the South Eastern part of the area is likely to be \_\_\_\_\_?  
A. cool and wet      B. cool and dry  
C. hot and wet      D. hot and dry
- The people of Molu area are most likely to be \_\_\_\_\_?  
A. Pagans      B. Muslims  
C. Christians      D. Hindus
- Which economic activity below is NOT practised in Molu area?  
A. Trading      B. Mining  
C. Saw milling      D. Cattle ranching
- The land of Molu area slopes from \_\_\_\_\_  
A. North East to South  
B. North to North West  
C. North East to South West  
D. South to North

SOCIAL STUDIES/CRE STD. 7 - 2016

Compiled by Schools Net Kenya

Available online at [www.schoolsnetkenya.com](http://www.schoolsnetkenya.com) | E-mail: [infosnkenya@gmail.com](mailto:infosnkenya@gmail.com) | Mobile: 07 11 88 22 27

7. What is the approximate length of the railway line?  
A. 10km B. 8km C. 13km D. 16km
8. A map is best described as \_\_\_\_\_?  
A. a drawing on the earth's surface on a piece of paper  
B. a representation of the earth or part of it on a flat surface  
C. the earth's surface on a flat land  
D. a piece of paper, chalkboard or wall
9. In which climatic zones would you find hot, dry summers with cool wet winters?  
A. Equatorial B. Tropical  
C. Mediterranean D. Desert
10. Africa is connected to Sinai Peninsula by the \_\_\_\_\_  
A. strait of Babel Mandeb B. Red Sea  
C. Cape Guardui D. Suez Canal
11. The main reason why the Congo basin has low population is because \_\_\_\_\_  
A. it has a thick forest  
B. it has dangerous animals  
C. roads are not well developed  
D. the government does not allow settlement in the area
12. Christian marriage is important because of the following reasons EXCEPT?  
A. it unites the families of man and woman  
B. it helps in raising children  
C. it provides an opportunity for loved ones to live together  
D. it gives a man a chance to have a wife
13. The main reason why the government encourages the conservation of forests is \_\_\_\_\_?  
A. prevent soil erosion  
B. provide herbal medicine  
C. protect water catchment areas  
D. maintain supply of firewood
14. The parliament in the traditional Buganda kingdom was known as \_\_\_\_\_?  
A. Omulamuzi B. Lukiiko  
C. Katikiro D. Omuwanika
15. The vegetation zone marked X is called \_\_\_\_\_?



- A. grasslands B. woodlands,  
C. heath and moorland D. Mediterranean

16. Below are features that favour growth of a certain crop in Africa.  
(i) well distributed rainfall of between 1000mm - 1500mm per year  
(ii) cool temperatures  
(iii) high altitude of over 1800m above the sea level  
(iv) well drained and fertile volcanic soil  
Which crop is this?

- A. Cocoa B. Pyrethrum C. Cloves D. Coffee  
Use the map below to answer questions 17 and 18

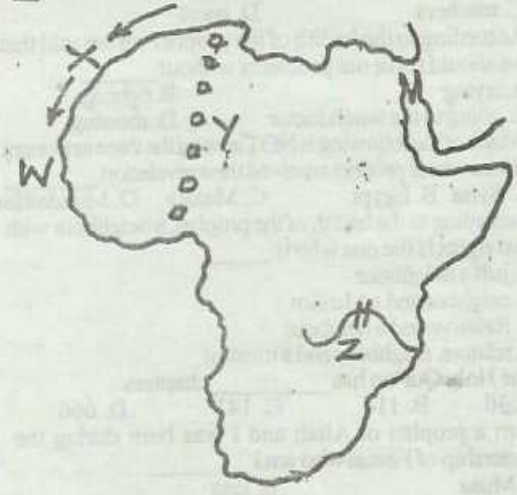


17. The national park marked Z is called \_\_\_\_\_?  
A. Sibiloi B. Marsabit  
C. Mt. Elgon D. Malk Mari
18. The plateau marked X is called \_\_\_\_\_?  
A. Yatta plateau B. Nyika plateau  
C. Fouta Djallon D. Jos plateau
19. The main reason why pastoralism has succeeded in Botswana is because \_\_\_\_\_?  
A. Tswana love their cattle  
B. the pastoralists receive a lot of support  
C. the conditions are favourable  
D. there is a good market in Botswana
20. Which of the following is not a problem caused by industrial development?  
A. reduced agricultural production  
B. erosion of cultural values  
C. development of slums  
D. growth of towns
21. Below are roles of a citizen in the electoral process except?  
A. participating in elections  
B. accepting bribes from interested candidates  
C. promoting free and fair elections  
D. evaluating the performance of elected leaders
22. The main problem experienced by people living in Somalia is lack of peace which had led to \_\_\_\_\_?  
A. many living as refugees in neighbouring countries  
B. lack of protection by the police  
C. the people are not able to carry out their daily activities well  
D. some children are not able to go to school
23. Which one shows a right of people with disabilities?  
A. being given less challenging work  
B. being given equal opportunities to work and earn living  
C. being expected to do everything at the same rate as the others  
D. being left alone to take care of themselves since they are just like others
24. A national philosophy is \_\_\_\_\_

- A. a system of ruling a country
  - B. a way of life of people
  - C. a set of beliefs of the people of a given country
  - D. a method of learning in schools
25. Julius Nyerere and Haile Selassie had the following in common. Which one is it?
- A. each was the first president of their country
  - B. both were founder members of OAU
  - C. both favoured equal distribution of resources
  - D. each was voted for by majority of people to become leader
26. British ruled Tanganyika as Trust territory because?
- A. no other country could be trusted to rule it
  - B. it was near Kenya which was ruled by British
  - C. it was going to rule on behalf of league of nations
  - D. Britain had enough administrators
27. The best way to discourage drug and substance abuse at home is by \_\_\_\_\_
- A. educating people on their dangers
  - B. punishing thoroughly those abusing drugs
  - C. ensuring medicines are not bought without doctor's prescription
  - D. informing chief about those who abuse drugs
28. Below are negative effects of colonial rule in Africa. Which one is not?
- A. natural resources were exploited
  - B. establishment of schools and formal education
  - C. creation of political boundaries
  - D. loss of land to colonialists
29. Which system of administration didn't the Belgians use in Congo?
- A. Assimilation
  - B. Direct rule
  - C. Indirect rule
  - D. Association
30. Which of following was not a result of construction of Aswan High Dam?
- A. increase in cases of malaria
  - B. decline of traditional pottery industry
  - C. reduction of fish food in the river below the dam
  - D. reduction of silt in the lower sections of river Nile
31. Most fish in Kenya is caught in \_\_\_\_\_
- A. Lake Jipe
  - B. Lake Turkana
  - C. Lake Naivasha
  - D. Lake Victoria
32. The statements below describe a certain Mineral found in Kenya.
- (i) obtained by open cast mining
  - (ii) factory has to be located near the mining area because it is heavy
  - (iii) used to make cement
  - (iv) found in many parts of the country
- The mineral described above is \_\_\_\_\_
- A. Flourspar
  - B. Limestone
  - C. Diatomite
  - D. Soda Ash
33. Which of these best describes an age group?
- A. people who are born about the same time
  - B. people who are born about the same month
  - C. people who get initiated on the same day
  - D. people who always work together

34. Which of the following was mainly acquired through apprenticeship in traditional education?
- A. social values
  - B. the history of the community
  - C. iron smelting skills
  - D. skills on how to avoid danger
35. The executive arms of government comprises of the following except?
- A. speaker of national assembly
  - B. cabinet
  - C. president
  - D. civil servants

**Use the map of Africa below to answer questions 36 - 38**



36. The main road marked Y is called \_\_\_\_\_?
- A. Trans Saharan Highway
  - B. Trans African Highway
  - C. Great North road
  - D. Cotonou-Gao-Oudja
37. Name the ocean current marked X on the map.
- A. Canary cold currents
  - B. Dakar cold currents
  - C. Canary warm currents
  - D. Guinea warm currents
38. The river project marked Z is \_\_\_\_\_?
- A. Aswan High dam
  - B. River Volta scheme
  - C. Seven Folks dam
  - D. Kariba Dam
39. Which of these African countries is correctly matched with its capital city?
- A. Angola - Yaunde
  - B. Morocco - Malabo
  - C. Senegal - Monrovia
  - D. Gabon - Libreville
40. Which of the following is not a challenge facing tourism in Africa?
- A. stiff competition from European and Asian tourist destination
  - B. political instability discouraging tourists
  - C. insecurity caused by terrorists and pirates
  - D. modern hotels which provide adequate services
41. What is the time at Banjul 15°W if it is midnight at Lokidar at 45°E.

## STANDARD 7 - I.R.E.

1. The Surah which is known to be Muwadhatein is \_\_\_\_\_  
A. Iklas B. Nas C. Fatiha D. Asr
2. In Surah Al-Qadar we are told that Lailatul-Qadir is better \_\_\_\_\_ years.  
A. 100 B. 1000 C. 83 D. 72
3. The first Surah to be sent to the prophet (p.b.u.h) was \_\_\_\_\_?  
A. Al-Qadar B. Tiyy C. Alaq D. Fatiha
4. The prophet (p.b.u.h) said that, whoever believes in Allah and the last day should not annoy his \_\_\_\_\_  
A. parents B. neighbour C. teachers D. guest
5. According to the hadith of the prophet we are told that we should solve our problems without \_\_\_\_\_  
A. crying B. fighting C. going to the witchdoctor D. shouting
6. Which of the following is NOT among the three important places where prophet received their revelation \_\_\_\_\_  
A. Syria B. Egypt C. Makka D. Muzdalifa
7. According to the hadith of the prophet, a neighbour with two rights is the one who is \_\_\_\_\_  
A. just a neighbour B. neighbor and a Muslim C. Relative and a neighbour D. relative, neighbour and a muslim
8. The Holy Qur'an has \_\_\_\_\_ chapters.  
A. 30 B. 114 C. 141 D. 666
9. I am a prophet of Allah and I was born during the leadership of Firaun who am I \_\_\_\_\_  
A. Musa B. Issa C. Ibrahim D. Mohammad
10. Which of the following is NOT among the importance of Suratul Alaq \_\_\_\_\_  
A. importance of knowledge B. importance of lailatul Qadir C. arrogance of man D. favours to us
11. The treaty of Hudaibiya was to last for \_\_\_\_\_ years.  
A. 3 B. 10 C. 8 D. 2
12. Which is NOT among the similarities between Juma and Idd prayers?  
A. They have both two rakaat B. They are said in the afternoon C. They have two khutbas D. Friday is Wajib while Idd is Sunnah
13. Mughira is a businessman and he has a habit of mixing good and bad quality of good. He is practising \_\_\_\_\_  
A. hoarding B. ghush C. smuggling D. cheating
14. Which of the following habits Allah forbids and hates \_\_\_\_\_?  
A. farming B. Israaf C. fasting D. reciting the Qur'an
15. When prophet Musa accompanied prophet Al-Khidhir they went to some extend of repairing a wall because it was about to collapse. They did this because the there was \_\_\_\_\_  
A. treasure B. water C. the wall was falling D. wine
16. Firaun had \_\_\_\_\_ children.  
A. one B. none C. three D. four
17. In the Holy Qur'an Jibril is referred as \_\_\_\_\_  
A. Ruh B. Angels C. Izrael D. Salaam
18. The people of prophet Lut were punished because they?  
A. buried their daughters alive B. they were doing sodom C. worshipped idols D. cheated in measurement
19. The Swahaba whose name when mentioned we say QARAMALLAH WAJ-HAHU is \_\_\_\_\_  
A. Abubakar B. Omar C. Ali D. Athuman
20. Which of the following Sunnah fasts when you fast it is as if you have fasted the whole year \_\_\_\_\_  
A. sitatul-shawwal B. fasting in sacred months C. fasting on Monday and Thursday D. fasting in 27th Rajab
21. Which of the following the BEST Islamic way of avoiding getting infected with HIV/AIDS \_\_\_\_\_  
A. use of condoms B. Absistence C. marrying more than one wife D. marrying young girls
22. When the prophet (p.b.u.h) conquered Makka he declared that four places shall be safe and whoever will be at the right place will be protected. Which is NOT among them?  
A. Those who surrender their arms B. Those who enter the Holy Kaaba C. Those who enter Ikrimas house D. Those who close their doors and remain indoors
23. Going around the Holy Kaaba seven times is called \_\_\_\_\_?  
A. say B. Tawaf C. Ihram D. Pebbles
24. Identify Mugalladha Najis among the following \_\_\_\_\_  
A. stool B. blood C. urine D. pork
25. When going for Hijja you reach a specific place so that you can change your civilian clothes to Ihram. That place is called \_\_\_\_\_  
A. Muzdalifa B. Miliqat C. Mina D. Arafah
26. The prophet who is known to be Swahibul Hut is \_\_\_\_\_  
A. Yusuf B. Yunus C. Swaleh D. Zakaria
27. Who among the following is NOT cursed about alcohol \_\_\_\_\_  
A. one who drinks it B. who serves it C. who sells it D. one who hides it
28. I am an animal, i can stay for ten days without food or water, can travel 40 kilometres a day comfortably who am I \_\_\_\_\_  
A. donkey B. horse C. camel D. elephant
29. Among the following which is NOT one of the creation of Allah \_\_\_\_\_  
A. sky B. sun and moon C. day and night D. table and desk
30. Which of the following does not spoil fasting?  
A. putting perfumes B. eating C. vomiting intentionally D. drinking

- A. 8.00 a.m.                      B. 8.00 p.m.  
C. 4.00 a.m.                        D. 4.00 p.m.
42. Which of these groups is made up of Western Bantus in Kenya?  
A. Abaluyia, Abakuria, Akamba  
B. Aembu, Abakuria, Pokomo  
C. Abagusii, Abaluyia, Abakuria  
D. Wadawida, Ameru, Abaluyia
43. Which of the following factors are mainly responsible for high population density in Kisii?  
A. high rainfall and mining of soap stone  
B. high rainfall and fertile soils  
C. growth of towns and cool temperatures  
D. fertile soils and mining of soap stones
44. Free range poultry farming is practised by many people because \_\_\_\_\_?  
A. it is cheap to keep the birds  
B. the chicken have better meat  
C. the chicken are not easily affected by diseases  
D. it is recommended by veterinary doctors
45. Lake Nakuru national park is famous because \_\_\_\_\_?  
A. it is a salty lake  
B. it is an important site for birds  
C. it has beautiful scenes  
D. it has many hot springs
46. Which of the towns below started as a market and a collection centre for agricultural produce?  
A. Thika   B. Eldoret   C. Kisumu   D. Nakuru
47. The main problem facing rapid population growth in rural areas in Kenya is \_\_\_\_\_  
A. inadequate water for domestic use  
B. increased soil erosion  
C. reduction of areas under forest  
D. shortage of land for agriculture
48. The first action to take place when you find a child who has been raped is to \_\_\_\_\_?  
A. inform the headteacher  
B. inform the chief  
C. tell the child not to tell anybody  
D. take the child to the hospital
49. Which of the factors below does not influence climate?  
A. Latitude                      B. Altitude  
C. Longitude                    D. Distance from water bodies
50. Which of these best describes the monsoon winds?  
A. they blow from the North to the East  
B. they blow from South to East  
C. they cause short rains  
D. they are seasonal
51. Which of these vegetation is found only in coastal areas?  
A. Papyrus vegetation            B. Mangrove vegetation  
C. Tropical vegetation           D. Savannah vegetation
52. Programme of activities that have been planned is the \_\_\_\_\_?  
A. School motto                      B. School routine  
C. School time table                D. Programmed line up
53. Large farms where beef cattle are kept are called \_\_\_\_?  
A. Units                                      B. Paddocks  
C. Ranches                                  D. Farms
54. Which of the following statements is not true?  
A. a good transport network is necessary for trade to grow.  
B. high taxes make imports more expensive  
C. domestic trade is also called international trade  
D. most countries in Eastern Africa produce almost similar goods
55. The most effective way of communicating information to the majority of Kenyans today is by?  
A. Mobile phones                      B. Television  
C. News papers                         D. Radio
56. Which of these is not a service industry?  
A. Tourism                                B. Banking  
C. Pottery                                 D. Insurance
57. The following are uses of diatomite. Which one is not?  
A. making paints  
B. making sound insulators  
C. making filters for beer and soft drinks  
D. manufacture of cement
58. Which of the following language group came to Kenya mainly for trade?  
A. Nilotes                                      B. Bantus  
C. Semites                                    D. Cushites
59. The main cause of road accidents on Kenyan roads today is \_\_\_\_\_?  
A. presence of pot holes            B. careless road users  
C. unroadworthy vehicles           D. over speeding
60. The great woman prophetess among the Agiriama people was called \_\_\_\_\_?  
A. Wangu wa Makeri                B. Ngonyo wa Mwano  
C. Mekatilili wa Menza              D. Sakawa
- C.R.E.**
61. The main reason why God created man and woman was that they could \_\_\_\_\_  
A. rule over other animals  
B. start a new family  
C. fill the earth  
D. worship him on the sabbath
62. Moses led the children of Israel out of the land of Egypt. This journey was known as \_\_\_\_\_  
A. Voyage                                      B. Exodus  
C. Expedition                                D. Tour
63. The main lesson that Christians can learn from the story of the floods is that \_\_\_\_\_  
A. they should speak against evils in the society  
B. they should make sacrifices to God  
C. God loves His people  
D. God saves His people
64. God filled Bezalel with the ability of working in the following except?  
A. Gold   B. Bronze                      C. Silver                      D. Glass
65. The new covenant that Jeremiah foretold was to be?  
A. between God and the Israelites  
B. between God and the Cananites

- C. between God and individuals  
D. Fulfilled during the second coming of Christ
66. Which among the following was a talented musician and could play harp very well?  
A. David B. Adam  
C. Abraham D. Joseph
67. God asked the leaders of Israel to mark the Passover by doing the following except?  
A. to smear their door posts with blood  
B. to sacrifice lambs  
C. to stay indoors  
D. to kill their first borns
68. The first king of Israel was \_\_\_\_\_  
A. Samuel B. Isaiah  
C. Saul D. Nathan
69. Which of the following commandments did Cain break?  
A. fifth B. second C. sixth D. fourth
70. The Christian's ability to always tell the truth is referred to as \_\_\_\_\_?  
A. respect B. honesty  
C. obedience D. self discipline
71. Which one of the following is not an activity of the church in Kenya?  
A. teaching about Christ  
B. healing the sick  
C. building schools  
D. judging criminals
72. What is contentment?  
A. being rich  
B. being happy and satisfied with what we have  
C. state of calm with not worries  
D. treatment of people that is fair and right
73. Who among the following is not part of the clergy?  
A. Bishops B. Priests  
C. Pastors D. Catechists
74. We can be infected with HIV/AIDs through the following ways except?  
A. abstaining from sex  
B. sharing cutting objects  
C. infected blood transfusion  
D. infected mother to child during birth
75. By sending Jesus Christ God wanted us to \_\_\_\_\_  
A. crucify Him  
B. share new life with Him  
C. Love our friends only  
D. be baptized by Him
76. Which of the following is not a value to get eternal life?  
A. hope B. justice C. holiness D. hatred
77. Which of the following types of education is involved in reading and writing?  
A. non formal B. formal  
C. informal D. apprenticeship
78. Which of the following is the best way of helping refugees?  
A. giving them identity cards  
B. employing them as house helps  
C. making their living better  
D. building them permanent homes
79. Which of the following is not a cause of child labour?  
A. poor families B. marital problems  
C. death of parents D. lack of schools
80. The following are organisations that offer Flying doctor services in Kenya. Which one is not?  
A. AAR B. AMREF  
C. Rescue 911 D. KNH
81. How did John the Baptist die?  
A. he was beheaded B. he was stoned  
C. he was crucified D. he was aged
82. Which of the following actions of Jesus shows service?  
A. washing disciples feet  
B. walking on water  
C. changing water into wine  
D. raising Lazarus from dead
83. Which of the following happened on the day of Pentecost?  
A. Jesus resurrected  
B. disciples were filled with the holy spirit  
C. Zaccheaus climbed a sycamore tree  
D. disciples shared meals
84. A Christian should obey his parents because \_\_\_\_\_?  
A. they are old  
B. they are always right  
C. God's commandment says so  
D. of the fear of their curse
85. Which of the following activities is not practised in the Harambee youth week?  
A. visiting the sick  
B. engaging in sporting activities  
C. clearing of forests and getting rid of wild animals  
D. cleaning our environment
86. Which one of the following activities can lead to immorality between boys and girls?  
A. singing and dancing together  
B. drinking alcohol  
C. visiting the sick  
D. watching television
87. The bad behaviour we do not admire in a friend is known as \_\_\_\_\_?  
A. vice B. jealousy  
C. value D. gossip
88. Which of the following New Testament books is not a Gospel?  
A. Matthew B. Mark  
C. Luke D. Acts of Apostles
89. Christians become witness to Christ mainly through?  
A. singing hymns B. helping the needy  
C. reading the Bible D. confessing their sins
90. Jesus was baptized in river Jordan because he wanted to \_\_\_\_\_?  
A. join others in repenting their sins  
B. show that John was a powerful man  
C. encourage others to be baptized  
D. fulfil the will of God