
STANDARD SIX YEAR 2016

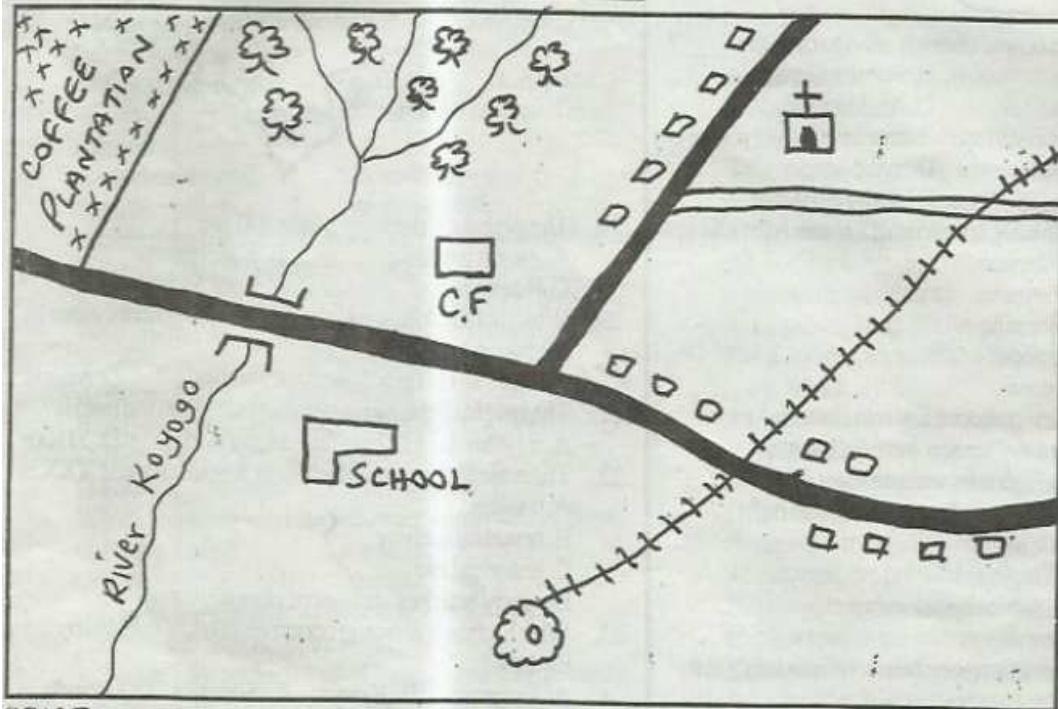
END-TERM 2, **SOCIAL STUDIES/CREPAPER** **TIME: 2HRS-15MINS**

Coordinated by KENPRO,
Macjo Arcade, 4th Floor, Suite 15E,
Off Magadi Road, Ongata Rongai | Tel: +254202319748 |
E-mail: infosnkenya@gmail.com | Website: www.schoolsnetkenya.com

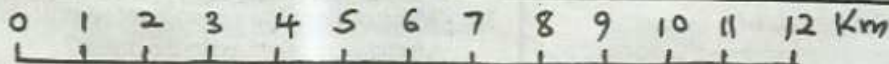
SOCIAL STUDIES / C.R.E.

TIME: 2HRS. 15MINS

PODI AREA



SCALE
KEY

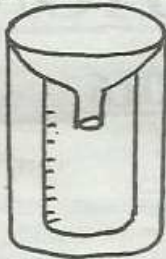


- Tarmac road
 C.F Coffee factory
 Church
 Forest
 Settlement
 Quarry
 Bridge
 Murram Road
 Railway

Study the map of Podi Area to answer questions 1-7

1. What is the direction of the quarry from the church?
 A. South B. North
 C. North East D. South West
2. What is the flow of River Koyoyo?
 A. East to West B. West to East
 C. North to South D. South to North
3. The type of settlement found in Podi Area is _____.
 A. linear B. sparse
 C. clustered D. nucleated
4. The religion of people in the area is _____?
 A. Islam B. Pagans
 C. Hinduism D. Christianity
5. The railway line on the map is likely to transport?
 A. people B. minerals
 C. cattle D. coffee
5. Which of the following major social facility is missing in area?
 A. education B. health
 C. religion D. farming
7. The main cash crop grown in Podi area the is _____.
 A. tea B. coffee
 C. maize D. rice
8. The following are countries of Eastern Africa which one is not?
 A. Kenya B. Eritrea
 C. Malawi D. Uganda
9. Which of the following physical feature was formed as result of down warping?
 A. Rift Valley B. Lorian swamp
 C. Lake Edward D. Lake Victoria
10. Which of the following is correctly matched with its capital city?
 A. Sudan - Juba
 B. Uganda - Addis Ababa
 C. Ethiopia - Khartoum
 D. Eritrea - Asmara

Use the diagram below to answer questions 11-12



11. The weather instrument above is used to measure _____?
A. Temperature B. amount of rainfall
C. Speed of wind D. Atmosphere
12. The best place to install the weather instrument above is
A. in the open field B. in the house
C. under the ground D. under a big tree
13. Which of the following countries of Eastern Africa lie in the Northern hemisphere?
A. Uganda and Tanzania
B. Djibouti and Somalia
C. Kenya and Ethiopia
D. Sudan and Eritrea
14. Below is information about a town in Eastern Africa
(i) It experiences a dry season over six months
(ii) It experiences high temperature most of the year
In which climate region is the town likely to be?
A. Coastal climatic region
B. Desert climatic region
C. Semi-desert climatic region
D. Tropical climatic region
15. Which of the vegetation types below is found only in the Coastal areas?
A. Mangrove vegetation
B. Papyrus vegetation
C. Tropical rain forest
D. Savannah vegetation
16. Which of the following types of vegetation is mostly influenced by drainage?
A. Swamp vegetation
B. Tropical rain forest
C. Mountain vegetation
D. Savannah grasslands
17. Below is a list of family members which of the following combination consists members of the extended family?
(i) Aunt (ii) Mother (iii) Children
(iv) Grand parents (v) Uncle
A. i, ii, iii B. i, iv, v
C. ii, iii, iv D. iii, iv, v
18. The school motto is important because it
A. is written on the school badge
B. is produced by school
C. reminds pupils to work hard at school and set good examples
D. is a document that is used to teach pupils good behaviour

Use the map of Kenya to answer questions 19-22



19. The plains on the map marked U are _____?
A. Awara plains B. Kano plains
C. Bileshi plains D. Lotikipi plains
20. Which of the following rivers does not drain its water in the lake marked V?
A. Yala B. Tana C. Nzoia D. Migori
21. The height of the mountain marked W on the map is?
A. 5199m B. 4321m C. 5895m D. 5110m
22. The main tourist attraction along the part marked XXX is
A. wildlife
B. beautiful scenery
C. historical site
D. sandy beaches and warm climate
23. Which of the following countries is NOT crossed by the Equator?
A. Tanzania B. Kenya C. Somalia D. Uganda
24. Which of the following groups of countries of Eastern African were colonized by the British?
A. Kenya, Tanzania B. Uganda, Somalia
C. Ethiopia, Somali D. Djibouti, Eritrea
25. The best way to transport flowers from the farms to the airports for export to Europe is by
A. water B. road C. air D. railway

Use the diagram below to answer questions 26-27



26. The diagram above represents _____?
A. land breeze B. relief rainfall
C. sea breeze D. convectional rainfall
27. Which of the following counties in Kenya experiences the effects represented in the above diagram?
A. Kwale county B. Nakuru county
C. Kajiado county D. Taita-Taveta County
28. Which of the following holiday is celebrated on 20th October of every year?
A. Jamhuri day B. Madaraka day
C. Labour day D. Mashujaa day

29. The first president of Tanzania was _____
 A. Jakaya Kikwete B. Julius Nyerere
 C. Pombe Magufuli D. Ali Hassan Mwinyi
30. Who of the following led the Nandi during the British colonial rule in Kenya?
 A. Kimnyole B. Lenana C. Koitalel D. Mekatili
31. All these factors influence the climate of Kenya EXCEPT ONE. Which one is it?
 A. Winds B. Distance from large water body
 C. Altitude D. Longitude
32. Who among these people did not come from the Congo forest?
 A. Abagusii B. Luo C. Abasuba D. Abakuria
33. Which of the following is not one of the causes of road accidents?
 A. careless driving B. overloading
 C. traffic policemen D. poor roads
34. Which of the following forms of communication can reach very many people within a short time?
 A. Radio B. Television C. Letters D. Newspaper
35. Who among these people belong to the same language groups?
 A. Boran, Orma, Rendile, Maasai
 B. Kipsigis, Pokot, Keiyo, Marakwet
 C. Iteso, Turkana, Maasai, Somalia
 D. Kamba, Abaluhya, Kikuyu, Kipsigis
36. Which crops required the following conditions to grow
 (i) Heavy rainfall
 (ii) Deep fertile and well-drained soils
 (iii) High temperature of between 21°C to 26°C
 (iv) Props to support plants with fruits
 A. maize B. coffee C. sugarcane D. bananas
37. The following is information about a certain crop.
 (i) It is grown as a staple food for people in Kenya and Tanzania
 (ii) It is grown on a small scale and on a large scale
 (iii) It is a raw material for corn oil
 The crop described above is
 A. wheat B. sorghum C. maize D. rice
38. Which of the following is an example of domestic trade?
 A. Trade between Siaya County and Nairobi County
 B. Trade between Kenya and Tanzania
 C. Trade between Kenya and Southern Sudan
 D. Trade between Kisumu county in Kenya and Uganda

Use the map below to answer questions 39 - 42



39. The capital city of the country marked P is _____?
 A. Khartoum B. Juba
 C. Addis Ababa D. Kampala
40. Name the physical feature marked Q?
 A. River Ormo B. Rift Valley
 C. Lake Tana D. Plateau
41. The following communities migrated into Kenya through the routes marked R EXCEPT ONE. Which one?
 A. Boran B. Somali C. Pokomo D. Rendile
42. Name the European country that colonized the country marked S.
 A. Germany B. British C. France D. Italy
43. Which of the following institutions makes laws in Kenya?
 A. Supreme court B. The high court
 C. The judiciary D. The national assembly
44. Which of the following towns does not experience the problem of water shortage?
 A. Nairobi B. Mombasa C. Dodoma D. Jinja
45. Who of the following head the village in Buganda traditional government?
 A. Gombolola B. Batongole C. Miruko D. Ssazas
46. The following are benefits of trade in Eastern Africa except one? Which is it?
 A. Improvement of democracy
 B. Creation of employment
 C. Improvement of transport
 D. Increase in government revenue
47. What is the main advantage of newspaper over radios
 A. Newspapers provide more information
 B. Newspaper are easier to carry around
 C. Newspaper are cheaper to buy than radios
 D. Its possible to refer back to information in future
48. Which of the following is not a service industry?
 A. Tourism B. Pottery C. Banking D. Insurance
49. Which of the following is a wildlife conservation measure?
 A. Encouraging people to sell some products
 B. Educating people on the importance of wildlife
 C. Allowing people to kill animals for meat
 D. Setting people in game parks
50. Lake Nakuru national park is famous for its?
 A. crocodile B. wildlife
 C. flamingoes D. water
51. The following are description of a town in Eastern Africa?
 (i) its a railway junction (ii) Its transport centre
 (iii) It has an electric power station
 (iv) It has copper smelting industry
 A. Jinja B. Kampala C. Dodoma D. Thika
52. The parliament in the Buganda kingdom was known as
 A. Lukiko B. Gambolola
 C. Katikiro D. Omulamuzi
53. Three of the following people were early visitors to Eastern Africa. Who was not?
 A. John Speke B. William Macknon
 C. Charles Elliot D. Dr. David Livingstone
54. The first Christian mission station was built by Krapf at?
 A. Kabaa B. Rabai C. Kikuyu D. Kibwezi
55. The countries listed below are members of IGAD except?
 A. Tanzania B. Uganda C. Kenya D. Sudan
56. Three of the following are ways of demonstrating patriotism except?

- A. Participating in corrupt deals to become rich quickly
 B. Paying taxes
 C. Respecting other people's property
 D. Obeying the laws of the country
57. Children have right to education. This means that
 A. they should choose the teacher to teach them
 B. they should attend school
 C. they should read only when they want
 D. they should work for their teachers
58. In Kenya civic elections are done through _____
 A. queuing method
 B. nomination of candidates
 C. secret ballot
 D. appointment of candidates
59. A national philosophy is _____?
 A. a way of ruling a country
 B. a way of life of people
 C. a set of beliefs of the people
 D. a method of teaching in school
60. The crop used in the manufacture of insecticide is known as _____
 A. cotton B. cypress C. sunflower D. pyrethrum
- C.R.E**
61. Which one of the following duties was given to the Adam and Eve when God created them?
 A. To eat the fruit of wisdom
 B. To obey the ten commandments
 C. To take care of all living things
 D. To obey the snake
62. How did Abraham show his obedience to God
 A. sacrificing his son Isaac
 B. marrying Sarah
 C. building an altar to worship him
 D. accepting to move to a foreign land
63. How many soldiers did Gideon use to defeat Midianites?
 A. 3000 B. 300 C. 10000 D. 1000
64. Among the servants of God who requested for wisdom in order to serve God?
 A. David B. Saul C. Samson D. Solomon
65. The feast that the Israelites celebrated before they left Egypt was called _____
 A. Pentecost B. Last supper
 C. Passover D. Christmas
66. Who among the following lived with Samuel when he was young?
 A. Hannah B. Eliekanah C. Eli D. David
67. The only commandment with a promise is _____
 A. third B. fourth C. fifth D. sixth
68. Who was the first king of Israel?
 A. Solomon B. Saul C. Ahab D. David
69. King Saul was _____ of David.
 A. jealous B. envious C. happy D. joyful
70. The following are roles of the church except?
 A. uniting people B. guiding people
 C. helping the needy D. persecuting believers
71. Expressing one's opinion or desire strongly and with confidence is referred to as
 A. honesty B. creative thinking
 C. hope D. assertiveness
72. Jesus performed his first miracle at _____
 A. Cana B. Bethany C. Nazareth D. Canaan
73. Who baptized the Ethiopian Eunuch?
 A. Philip B. Paul C. Peter D. Thomas
74. Which of the following is not a reason why Christians should work?
 A. Work is God's command
 B. To care for God's creation
 C. Not to become sick
 D. To earn a living
75. Jesus sent the blind man to wash his face in a pool called
 A. Galilee B. Judea C. Siloam D. Jordan
76. Jesus showed _____ when he washed disciples feet.
 A. humility B. cleanliness
 C. untidiness D. leadership
77. During the last supper Jesus said _____
 A. Do this in memory of me B. Do this for my sake
 C. Love your friends D. Love your enemies
78. Who are the ancestors
 A. old people
 B. those who practice witchcraft
 C. people who lived long time before our time
 D. community leaders
79. The following are fruits of the Holy Spirit except?
 A. joy B. faith C. love D. faithfulness
80. Education in the traditional communities was aimed at
 A. character moulding B. acquiring a degree
 C. preparation for marriage D. instilling respect
81. Who is your neighbour?
 A. Person living next door B. friend
 C. person in need D. your deskmate
82. The Apostles Creed says that Jesus _____
 A. was conceived by the power of Joseph
 B. was crucified under Pontius Pilate
 C. descended in heaven
 D. will come to judge the living and the dead
83. The following are negative effects of irresponsible behaviour except?
 A. unwanted pregnancy
 B. school dropout
 C. good education
 D. sexually transmitted infections
84. Eternal life begin when we _____
 A. die B. go to church
 C. belief in Christ D. finish school
85. The following are people with special needs except
 A. refugees B. widows C. orphans D. children
86. The parable of the three servants teaches us about good use of our _____
 A. wealth B. knowledge C. talents D. strength
87. Another name for covenant is _____
 A. Agreement B. Duty C. Sacrifice D. Law
88. Which one of the following occasions does NOT mark a new life in traditional African Societies?
 A. Baptism B. Birth of a child
 C. Marriage D. Initiation
89. _____ climbed a tree in order to see Jesus.
 A. Philip B. Judas C. Zacchaeus D. Thomas
90. When do we celebrate the resurrection of Jesus?
 A. Easter Sunday B. Good Friday
 C. Christmas D. Pentecost