
STANDARD FOUR YEAR 2016

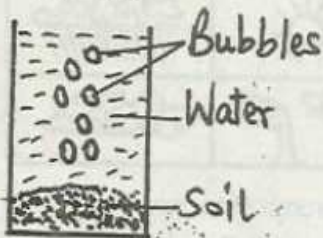
END-TERM 2, **SCIENCE PAPER** **TIME: 1HR-40MINS**

Coordinated by KENPRO,
Macjo Arcade, 4th Floor, Suite 15E,
Off Magadi Road, Ongata Rongai |Tel: +254202319748 |
E-mail:infosnkenya@gmail.com | Website:www.schoolsnetkenya.com

SCIENCE

TIME: 1HR.40MINS


- The chisel like tooth is called ____
A. molars B. premolar
C. incisors D. canine
- The following are uses of water in the house except
A. drinking B. recreation
C. washing D. bathing
- Which of the following sensory organ senses smell?
A. Tongue B. Eyes C. Nose D. Ear
- Which of the following may not be seen in the sky?
A. Sun B. Clouds C. Stars D. Wind
- How do millipede behave when they are touched?
A. fly away B. run away
C. coil D. hide in shells
- A personal item that can spread diseases if shared is a ____
A. trouser B. tooth brush C. pen D. cup
- Which one of the following is not a source of water?
A. Rain B. Well C. Tap D. River
- Meat from a sheep is called
A. mutton B. beef C. bacon D. pork
- The experiment below shows that there is ____ in the soil.



- bubbles
- animals
- humus
- air

- The ability of the body to defend itself against diseases is called ____
A. acquired B. immunity
C. syndrome D. health
- The following are problems of teeth, which one is not?
A. Bleeding gums B. Cavities
C. Shedding teeth D. Gingivitis

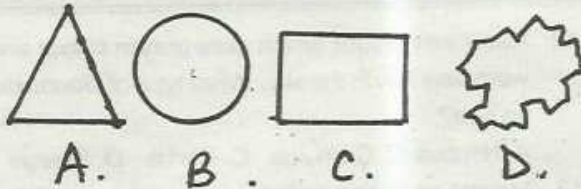
- Kevin saw clouds which were grey in colour and were very low in the sky. What type of clouds did he see?
A. Nimbus B. Cumulus C. Cirrus D. Stratus
- Moving air is also called ____
A. rain B. wind C. current D. water
- Moon ____ light from the sun..
A. Produces B. reflects
C. makes D. gives
- How many milk teeth are in the child?
A. 10 B. 12 C. 20 D. 32
- We eat ____ of cabbages.
A. stem B. roots C. leaves D. fruits
- Tuber crops includes the following except
A. kales B. yams C. cassava D. carrots
- We should brush our teeth ____
A. before meals B. during meals
C. when sleeping D. after meals
- Which of the following causes AIDs?
A. HIV B. HVI C. VCT D. Bacteria
- Which type of soil can be used in making ribbons?
A. Clay B. Loam C. Sand D. Humus
- Name the type of weed shown below ____



- wandering Jew
- Sodom apple
- oxalis
- pigweed

- Cactus grow in ____ areas.
A. dry B. wet C. cold D. swampy
- A true insect has ____ legs.
A. 6 B. 8 C. 3 D. 4
- The main natural source of light is ____
A. moon B. sun C. electricity D. lamps
- The colour of a clear sky is ____?
A. dark grey B. white
C. blue D. grey

26. The following are organisms found in soil except
 A. earthworms B. butterflies
 C. centipedes D. ants
27. Which of the following is not a special sound?
 A. Singing B. Screaming
 C. Ringing bell D. Hooting car
28. Which one of the following wheels will move easily?



29. What moves clouds across the sky?
 A. rainfall B. wind C. sun D. moon
30. Which of the following animals moves by hopping?
 A. Millipede B. Snails
 C. Tortoise D. Grasshoppers
31. Which of the containers cannot store water?
 A. Tanks B. Drums
 C. Buckets D. Pipes
32. Crops grown for selling are called
 A. cash crops B. food crops
 C. edible crops D. weeds
33. Cattle kept mainly for milk are called _____
 A. beef B. daily C. milky D. dairy
34. Name the type of teeth shown below _____



- A. canine
 B. incisor
 C. premolar
 D. molar
35. A doctor who checks and treats teeth is called _____?
 A. dental B. astronomer
 C. dentist D. teacher
36. Which one can transport people over water?
 A. Bus B. Train C. Canoes D. Lorry
37. Cotton is an example of _____
 A. beverage B. food C. fibre D. oil
38. The body of birds are covered with _____
 A. feathers B. wool C. hair D. fur
39. Which one is a use of water in the industry?
 A. Keeping fish B. Cooling machines
 C. Swimming D. Irrigation

40. In poultry layers are kept for _____
 A. meat B. feathers
 C. eggs D. beaks
41. Kales belong to a group of crops called _____
 A. vegetables B. fibre
 C. oil D. cabbages
42. The best way of removing weeds is by
 A. digging them out B. slashing
 C. using chemicals D. mulching
43. An adult has _____ wisdom teeth.
 A. 32 B. 20 C. 12 D. 4
44. Meat of a pig is called _____
 A. pork B. beef C. mutton D. sty
45. Which one of the following types of food is body building food?
 A. Maize B. Potatoes
 C. Cabbages D. Groundnuts
46. Deciduous teeth are also referred to as the following except _____ teeth.
 A. milk B. temporary
 C. primary D. wisdom
47. Fish breath through _____
 A. nose B. scales C. fins D. gills

Study the weather chart to answer questions

48 - 50

DAY	MORNING	AFTERNOON
MONDAY		
TUESDAY		
WEDNESDAY		
THURSDAY		

48. Which day were the umbrellas used _____?
 A. Monday B. Tuesday
 C. Wednesday D. Thursday
49. Which was the best day to wash clothes?
 A. Monday B. Tuesday
 C. Wednesday D. Thursday
50. How was the weather like on Tuesday morning?
 A. Windy B. Forestry
 C. Calm D. Cloudy