

---


# STANDARD ONE YEAR 2016

## **END-TERM 2, MATHEMATICS PAPER**


Coordinated by KENPRO,  
Macjo Arcade, 4th Floor, Suite 15E,  
Off Magadi Road, Ongata Rongai | Tel: +254202319748 |  
E-mail: [infosnkenya@gmail.com](mailto:infosnkenya@gmail.com) | Website: [www.schoolsnetkenya.com](http://www.schoolsnetkenya.com)

### Count and write

1.  = \_\_\_\_\_

2.  = \_\_\_\_\_

3.  = \_\_\_\_\_

4.  = \_\_\_\_\_

5.  = \_\_\_\_\_

6.  $5 + 0 =$

7.  $9 + 5 + 5 =$


8.  $0 + 9 + 1 =$

9.  $13 + 0 =$

10.  $0 + 0 + 7 =$

### Take away

11.  = \_\_\_\_\_

12.  = \_\_\_\_\_

13.  = \_\_\_\_\_

14.  = \_\_\_\_\_

15.  $8 - 2 =$

16.  $15 - 7 =$

17.  $5 - 4 =$

18.  $6 - 6 =$

19.  $11 - 5 =$

20.  $13 - 7 - 5 =$

### Write in words

21.  $8 =$  \_\_\_\_\_

22.  $4 =$  \_\_\_\_\_

23.  $10 =$  \_\_\_\_\_

Write in symbols

24. Thirty two = \_\_\_\_\_

25. Eleven = \_\_\_\_\_

26. Sixty six = \_\_\_\_\_

$$\begin{array}{r} 16 \\ -9 \\ \hline \\ \hline \end{array}$$

$$\begin{array}{r} 14 \\ +2 \\ \hline \\ \hline \end{array}$$

Fill in

29.  $82 = \underline{\quad} + \underline{\quad}$

30.  $15 = \underline{\quad} + \underline{\quad}$

31.  $8 = \underline{\quad}$  tens +  
 $\underline{\quad}$  ones.

32.  $\underline{\quad} = 5$  tens and 6  
ones.

33.  $80 = \underline{\quad}$  tens +  
 $\underline{\quad}$  ones.

34. 2 tens + 3 tens  
= \_\_\_\_\_ tens.

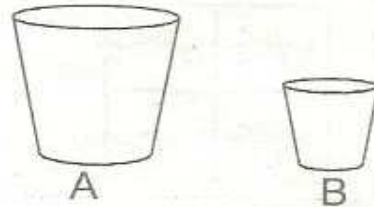
$$\begin{array}{r} 92 \\ -40 \\ \hline \\ \hline \end{array}$$


$$\begin{array}{r} 32 \\ +14 \\ \hline \\ \hline \end{array}$$

37.  $33 + 22 = \underline{\quad}$

38.  $45 - 23 = \underline{\quad}$

39. Which hold less?



40.   
This is a \_\_\_\_\_ line.

41. Draw a rectangle

Complete


42. 73, \_\_\_\_\_, \_\_\_\_\_ 76, 77

43. 5, \_\_\_\_\_, 3, 2 \_\_\_\_\_, \_\_\_\_\_

44. 2, 4, \_\_\_\_\_, \_\_\_\_\_

45. 9 

tens	ones

46.   
\_\_\_\_\_ tens and \_\_\_\_\_ ones.

47.  $20 + \square = 30$

48.  $9 + \square = 15$

49.  $\square - 3 = 5$

50. \_\_\_\_\_ is the third day of the week.