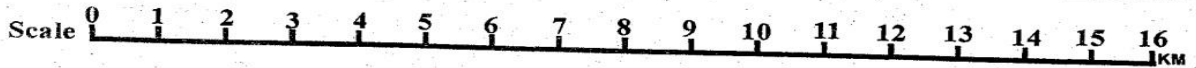
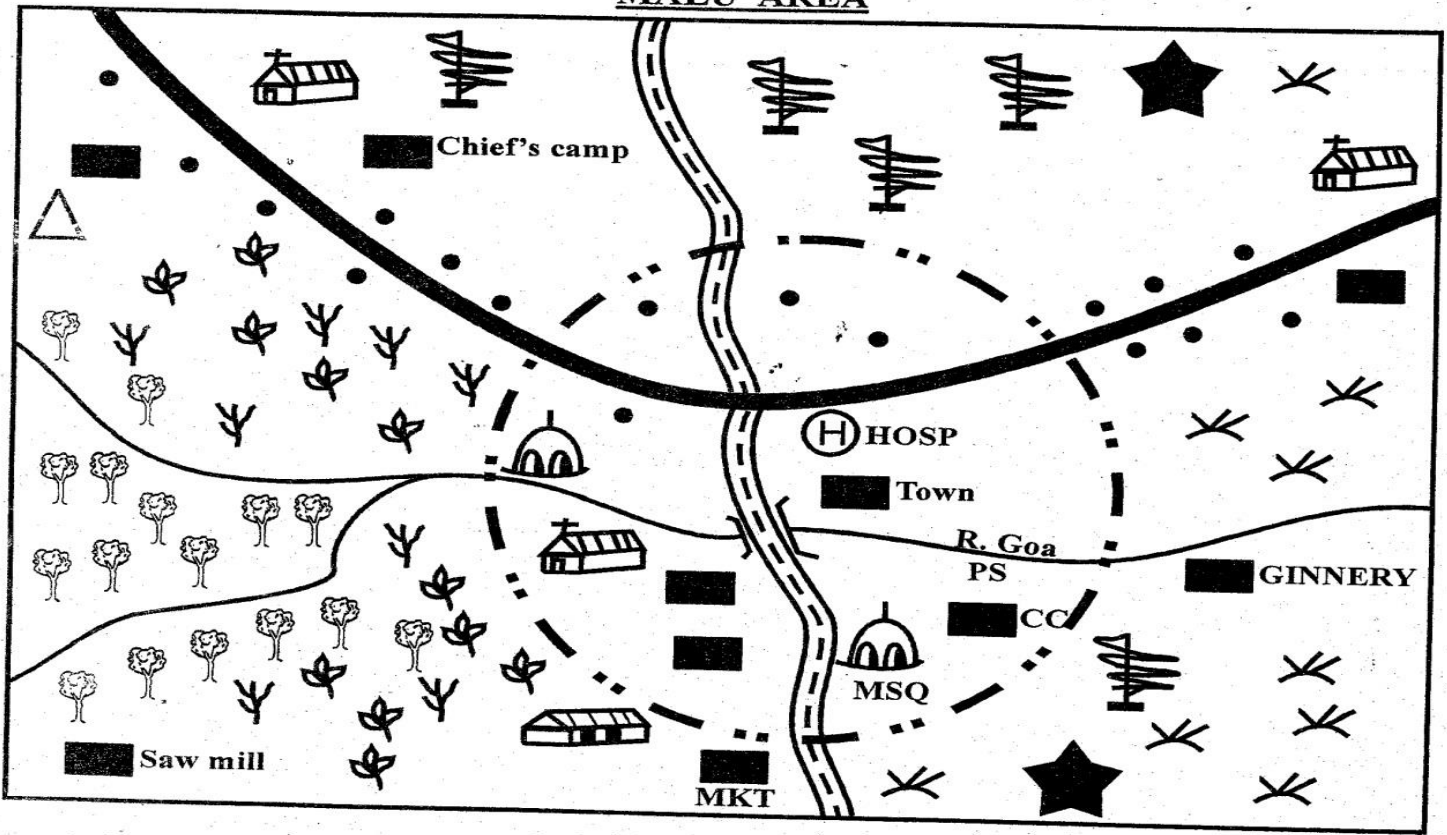


Study the map of Malu area below and use it to answer questions 1 - 7.

MALU AREA



KEY

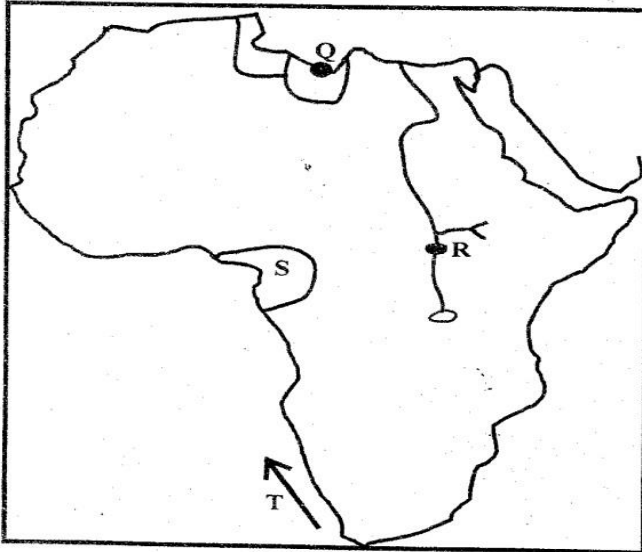
	Permanent buildings		CC - County Commissioner
	Tarmac road		Hill
	Church		Town boundary
	Other houses		PS - Police Station
	Scrub		Forest
	MSQ Mosque		School
	Hosp - Hospital		Tea
	Quarry		Coffee
	Murrum road		Cotton
	MKT - Market		

BUNGOMA COUNTY

STD. 8 SOCIAL STUDIES

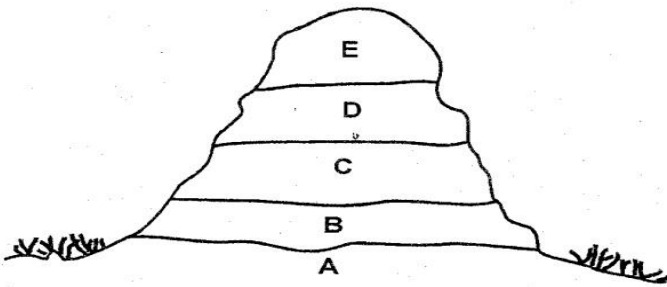
1. The general flow of river Goa is from:-
A. East to West
B. West to East
C. South West to East
D. North East to South West
2. The climate of the area East of the town can be described as:-
A. Cool and wet B. Hot and dry
C. Hot and wet D. Cool and dry
3. Many people in Malu area are **likely** to be:-
A. Patoralists B. Traders
C. Miners D. Farmers
4. The approximate length of the tarmac road is:-
A. 25km B. 14km
C. 17.5km D. 12km
5. Which of the following religion is **mostly** practiced by people in the town?
A. Islam
B. Christianity
C. Paganism
D. Hinduism
6. Who is the civic administrator of Malu area?
A. Chief
B. County Commissioner
C. Police
D. Governor
7. What is the direction of the saw mill from the ginnery?
A. SW B. NW
C. NE D. SE
8. In Kenya, basic unit in the society is:-
A. Marriage B. Age set
C. Family D. Clan
9. In which of the following stages of human evolution was fire invented?
A. Homo Sapien B. Homo Erectus
C. Homo Sapiens D. Homo Habilis
10. Three of the following cushites speakers are **not** found in both Kenya and Ethiopia **except**:-
A. Borana B. Orma
C. Rendile D. Somali
11. The time in Accra 0° is 11.15a.m. What then is the time in Dakar, 30° W?
A. 9.15am B. 1.15p.m
C. 9.15pm D. 1.15am
12. Religious marriage is similar to civil marriage in that they both are:-
A. Polygamous
B. Officiated by elders of a community
C. Not able to issue a marriage certificate
D. Monogamous
13. The construction of industries in developed countries can influence the climate change by the following **except**:-
A. Release of gas called methane
B. Warm the earth
C. Raise the temperature
D. Release carbon dioxide
14. Which of the following countries is **correctly** matched with the system of administration it used to colonize Africans?
A. Britain in Northern Nigeria - Indirect rule
B. France in Senegal - Direct rule
C. Portuguese in Mozambique - Direct rule
D. Belgium in Congo - Assimilation
15. Which of the following **correctly** describes the position of Kenya in relation to her neighbours?
A. Ethiopia lies to the South of Kenya
B. Kenya lies to the North of Tanzania
C. Kenya lies to the East of Somalia
D. Uganda is found to the East of Kenya
16. Below are uses of a mineral
(i) Making coins
(ii) Making ornaments and utensils
(iii) Making water pipes
(iv) It is mixed with tin to get bronze
The mineral with the above uses is:-
A. Fluorspar
B. Diatomite
C. Copper
D. Gold
17. The following are ways of citizens showing patriotism to their country. Which one is enforced by the judiciary?
A. Offering services to the government
B. Observing the laws of country
C. Participating in elections
D. Keeping secrets of the country
18. The **main** reason for the establishment of multi- purpose river projects in Africa was to:-
A. Control floods
B. Attracts tourists
C. Provide water for irrigation
D. Provide hydroelectric power

Use the map of Africa below to answer questions 19 - 22.



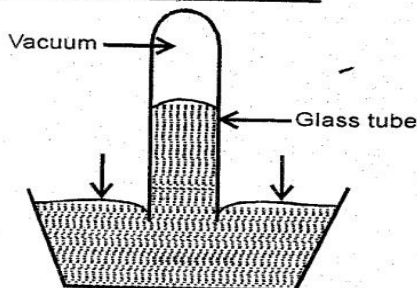
19. The town marked Q is:-
 A. Tunis B. Cairo
 C. Tripoli D. Algiers
20. The crop grown in the area marked R is:-
 A. Sugarcane B. Coffee
 C. Sisal D. Wheat
21. The language group that originated from the shaded region marked S is:-
 A. Cushites B. Bantus
 C. Nilotes D. Semites
22. Which of the following is an influence of ocean current marked T on the nearby coastal area?
 A. It attracts rain in the area
 B. It raises the humidity in the area
 C. It increases the temperature in the nearby land
 D. It lowers the temperature in the area
23. Which one of the following activities will lead to lawlessness in the society?
 A. Fair treatment of all citizens
 B. Equal treatment before the law
 C. Unemployment among the youth
 D. Allowing people to participate in decision making
24. In the pre - colonial period the Khoikhoi were ruled by:-
 A. Hereditary chiefs
 B. Council of elders
 C. Counsels
 D. Kings
25. A thief has been caught stealing from the shop by the young men. The **best** action for the men to take is to:-
 A. Call other people to beat up the thief
 B. Take the thief to the police station
 C. Shout for help
 D. Join the thief and share what he has stolen
26. African countries have few tarmacked roads **mainly** because;-
 A. Presence of forests which hinder road construction
 B. Few mineral resources
 C. Lack of skilled labour
 D. Inadequate capital
27. Which one of the following reasons **best** explains why Samouri Toure fought with the French? He wanted to:-
 A. Control all the trade routes
 B. Protect Islam
 C. Safe guard independence
 D. Get support from most Africans
28. Cultural artefacts are kept in the museum **mainly** because they:-
 A. Preserve our heritage
 B. Are rare to find
 C. Earn a country foreign exchange
 D. Show our origin
29. Which theory tries to explain how human beings have developed through different stages?
 A. Creation story
 B. Parables
 C. Myths
 D. Evolution theory
30. The following are members of the county Assembly **except**:-
 A. Members of the county assembly
 B. Youth representatives
 C. County speaker
 D. Deputy governor
31. In traditional African society, movement of large swarm of locusts and butterflies indicated.
 A. Approach of rain
 B. Cloud cover
 C. Approach of dry spell
 D. That it would be windy

Use the diagram below to answer question 32.



32. Which is the **main** economic activity carried out at the region marked **B**?
- A. Beef farming B. Crop farming
C. Pastoralism D. Lumbering
33. The following are chapters in the constitution of Kenya. Which one is in chapter three?
- A. Citizenship
B. The public
C. The bill of rights
D. Sovereignty of the people and supremacy of the constitution
34. The **main** source of revenue for the national government is:-
- A. Court fines and charges
B. Taxation
C. Grants and loans
D. Foreign exchange from tourism

Use the diagram below to answer questions 35 and 36.

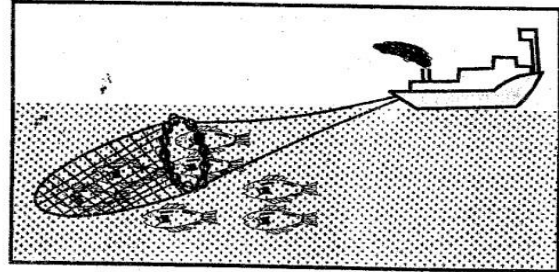


35. The diagram drawn above shows an instrument that is used to measure
- A. Temperature B. Rainfall
C. Humidity D. Air pressure
36. The weather instrument drawn above is known as:-
- A. Thermometer
B. Aneroid thermometer
C. Mercury barometer
D. Rain gauge

37. The following are tourist destinations. Which one is **correctly** matched with the country in which it located?

- A. South Africa - Ancient town of Maraketch
B. Egypt - Table Mountains
C. Kenya - Kruger National Park
D. Zimbabwe - Victoria Falls

Use the diagram below to answer question 38.



38. The fishing method drawn above is known as:-
- A. Net drifting B. Trawling
C. Purse seining D. Long lining
39. Which of the following groups of pre - historic sites are found in Kenya?
- A. Omo valley , Hargesia, Harder
B. Ismilia , Ngoloba, Olduvai Gorge
C. Koobi Fora, Gamble Caves, Kariandusi
D. Sango, Magesi, Nzongezi
40. Anita bought an exercise book and later found out that two books had been packed. She returned the extra book to the shopkeeper. Anita showed.
- A. Honesty B. Respect
C. Obedience D. Justice
41. Which one of the following is the **most** effective way of conserving forests in Kenya?
- A. Employing more forest guards
B. Control cutting of trees
C. Recycling of paper
D. Using alternative sources of energy
42. The **main** reason why North - Eastern is sparsely populated is due to:-
- A. Unreliable rainfall
B. Bad roads
C. Availability of game parks
D. Too many wild animals
43. Mada has poor eyesight. He is not allowed to play with his age mates by his parents. Which one of the following freedom is Mada denied?
- A. Expression B. Association
C. Worship D. Movement

44. The **main** problem facing Perkerra irrigation scheme is:-
 A. Siltation of canals B. Water shortage
 C. Mismanagement D. Lack of market
45. **i) Was established in 1945**
ii) Promote peace in the world
iii) Work through various agencies
 The international organization explained above is?
 A. African union
 B. Common wealth
 C. East Africa community
 D. United Nation
46. Which one of the following statements describes negotiation as a way of resolving conflicts in a society?
 A. Asking for forgiveness
 B. Involving a third party
 C. Discussing the matter with one another
 D. Taking the matter to court
47. One of the roles of opposition parties in democracy is to:-
 A. Conduct elections
 B. Offer parallel government
 C. Critique the government
 D. Create voters register
48. A person becomes a citizen of Kenya by registering if:-
 A. One of the parents is a citizen of Kenya
 B. He or she is eight years or below
 C. He or she is responsible in character
 D. One of the parents is not known
49. In traditional African society, one of the functions of the clan elders was to:-
 A. Settle disputes
 B. Predict the future
 C. Defend the community
 D. Train warriors
50. Which of the following is a responsibility of children in a family?
 A. Build shelter
 B. Respecting adults
 C. Sharing the family resources
 D. Ensuring the family protection
51. According to the constitution of Kenya, the following are identified as national holidays. Which one is **not**?
 A. Madaraka Day B. Mashujaa Day
 C. Jamhuri Day D. Labour Day
52. Three of the following are Cushitic speaking groups. Which one is **not**?
 A. Galla B. Burji
 C. Samburu D. Oromo
53. The **main** factor influencing population distribution in Africa is:-
 A. Drainage B. Relief
 C. Soil D. Climate
54. The head of the judiciary in Kenya is the:-
 A. Attorney General
 B. Chief justice
 C. Chief magistrate
 D. High Court Judge
55. Which of the following is **not true** about the rotation of the earth?
 A. Moves on its own axis
 B. Affects time
 C. Revolves along a regular path
 D. Moves in anticipation
56. William Mackinnon, one of the early visitors to Eastern Africa came as:-
 A. an explorer B. an missionary
 C. an trade D. an colonizer
57. Flowers are transported to the foreign markets by air because air transport is:-
 A. Light B. Cheap
 C. Flexible D. Fast
58. It is important to work together in a community in order to:-
 A. Share resources equally
 B. Improve welfare of one another
 C. Identify lazy people
 D. Preserve the culture of the people
59. The **main** factor that contributed to the rise of Old Ghana Kingdom is:-
 A. Trans - Saharan trade
 B. Good climate
 C. Weak neighbours
 D. Strategic location
60. The following are the early visitors who came to Eastern Africa for different reasons. Who is **correctly** matched with his reason of coming?
 A. Vasco da Gama - to stop slave trade
 B. Stanley Morton - establish sea route to India
 C. David Livingstone - to sign trade treaties with African leaders strategies
 D. Dr. Ludwig Krapf - to spread Christianity

SECTION II

CHRISTIAN RELIGIOUS EDUCATION

61. Adam and Eve were chased out of the Garden of Eden according to the story of the fall of human beings in **Genesis 3:1 - 24** because they had:-
A. destroyed God's creation
B. spoken to the snake
C. disobeyed God's instructions
D. hidden themselves from God
62. Which of the following accusations demonstrated Abraham's faith in God? When he:-
A. Asked Lot to accompany him to Canaan
B. Accepted Sarah's suggestion to have a child through Hagar
C. Went to Egypt because of famine
D. Left Haran to Canaan during his call
63. What lesson do Christians learn from Joseph in the house of Potiphar? The importance of having:-
A. Trust and peace
B. Kindness and forgiveness
C. Self control
D. Tolerance and patience
64. Moses was not willing to go to Egypt to deliver Israelites from slavery **mainly** because he was:-
A. Too young
B. Not a good speaker
C. Afraid of Pharaoh
D. Having a young family
65. The **main** reason why Israelites celebrated Passover was to:-
A. Remember how God saved them
B. Remember how God killed the Egyptian's first born children
C. Remember how Pharaoh's chariot was drowned in the Red sea.
D. Remember rights they took during feast of Passover
66. When Deborah was a judge in Israel she:-
A. Built the temple
B. Decided cases among the people
C. Choose the first king of Israel
D. Defeated the Medianites
67. King David broke the commandment of God when he killed and married Uriah's wife. Which commandment did he break?
A. 4th and 7th
B. 6th and 8th
C. 6th and 7th
D. 9th and 10th
68. Who among the following prophets prophesied that the Messiah would be born in Bethlehem?
A. Micah
B. Amos
C. Isaiah
D. Hosea
69. Prophet Jeremiah foretold the laws in the new covenant would be:-
A. Read to the people by the Jews
B. Observed communally
C. Written on a stone
D. Written in people's hearts
70. Both Jesus and Elijah performed one of the following miracles. Which one is the **main** one?
A. Fed the multitude on food
B. Multiplied wine
C. Killed the false prophets
D. Raised the dead to life
71. Who among the following people were in the temple when Jesus was being dedicated?
A. Zachariah and Elizabeth
B. Simeon and Zachariah
C. Anna and Simeon
D. Joseph and Zechariah
72. "Man **cannot** live on bread alone" (**Luke 4:4**) A lesson Christians learn from this response given by Jesus during temptations is that they should:-
A. Use the word of God in their daily lives
B. Not put God to test
C. Not desire earthly riches
D. Work for their needs
73. Which of the following miracles of Jesus teaches Christians to care for the environment? The miracle of:-
A. Raising Lazarus
B. Miraculous catch of fish
C. Healing of the ten lepers
D. Feeding of the five thousand people
74. (**Mat 5:8**) "Blessed are the pure in heart for they _____"
A. Shall receive mercy
B. Shall see God
C. Inherit the kingdom of God
D. Shall be called the sons of God

75. The **main** lesson Christians learn from the incident when Jesus healed the Centurion's servant is that they should:-
 A. Give instructions to their servants politely
 B. Care for the needs of others
 C. Speak on behalf of their servants
 D. Welcome people into their homes
76. The **main** reason why Pharisees opposed Jesus was he:-
 A. Claimed to be the Messiah
 B. Healed on the Sabbath day
 C. Mixed with sinners
 D. Ate with unclean hands
77. Which one of the following miracles of Jesus teaches Christians that Jesus had power over nature?
 A. Feeding of 5000 people
 B. New wine at Cana
 C. Calming of the storm
 D. Healing of the 10 lepers
78. Who among the following disciples of Jesus were fishermen?
 A. Peter and Levi
 B. Andrew and James
 C. Judas and James
 D. Andrew and Thomas
79. From which book was the Ethiopian Eunuch reading when he met Philip?
 A. Acts
 B. Ezekiel
 C. Isaiah
 D. Jeremiah
80. The Holy Eucharist celebrated by Christians can be compared to one of the following in the traditional African religion. Which one is it?
 A. Initiation
 B. Marriage
 C. Sacrificial meals
 D. Witchcraft
81. Which of the following is a gift of the Holy Spirit?
 A. Faithfulness
 B. Humility
 C. Faith
 D. Patience
82. Who among the following deacons was a Gentile?
 A. Prochorus
 B. Stephen
 C. Timon
 D. Nicholas
83. People in traditional African communities pray to God while facing the mountains because they are:-
 A. Closer to God
 B. Beautiful
 C. Believed to be clean
 D. Believed to be God's dwelling place
84. Which of the following is a belief for both African traditional religion and Christianity?
 A. Making sacrifices
 B. Pouring of libation
 C. Life after death
 D. God is Omnipresent
85. Fatuma was travelling from Mombasa to Kisumu. On her way she was given a banana by a person sitting next to her. Soon she fell asleep and the person stole from her and alighted from the bus. Which of the following drugs was **likely** to be in the banana?
 A. Cocaine
 B. Mandrax
 C. Heroine
 D. Bhang
86. In traditional African communities children are told stories **mainly** to:-
 A. Entertain them
 B. Pass on community beliefs
 C. As rite of passage
 D. Teach them moral values
87. Christians preach against sexual misuse because:-
 A. It is misuse of leisure time
 B. It is a misuse of money
 C. It defines the body
 D. Teach them moral values
88. Your desk mate Joan has been given two thousands shillings by her aunt. The **best** way to spend the money is to:-
 A. Give you the money
 B. Buy herself a pair of shoes
 C. Return it to the aunt
 D. Donate some to the needy
89. Which one of the following activities by Christians **best** shows how they can use their day of rest?
 A. Helping the needy
 B. Visiting friends
 C. Reading story books
 D. Watching videos
90. The **main** reason why early missionaries visited East Africa was to do one of the following. Which one is it?
 A. Spread the gospel
 B. Explore
 C. Build churches, schools and convert Africans
 D. Trade with Africa