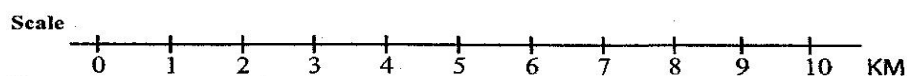
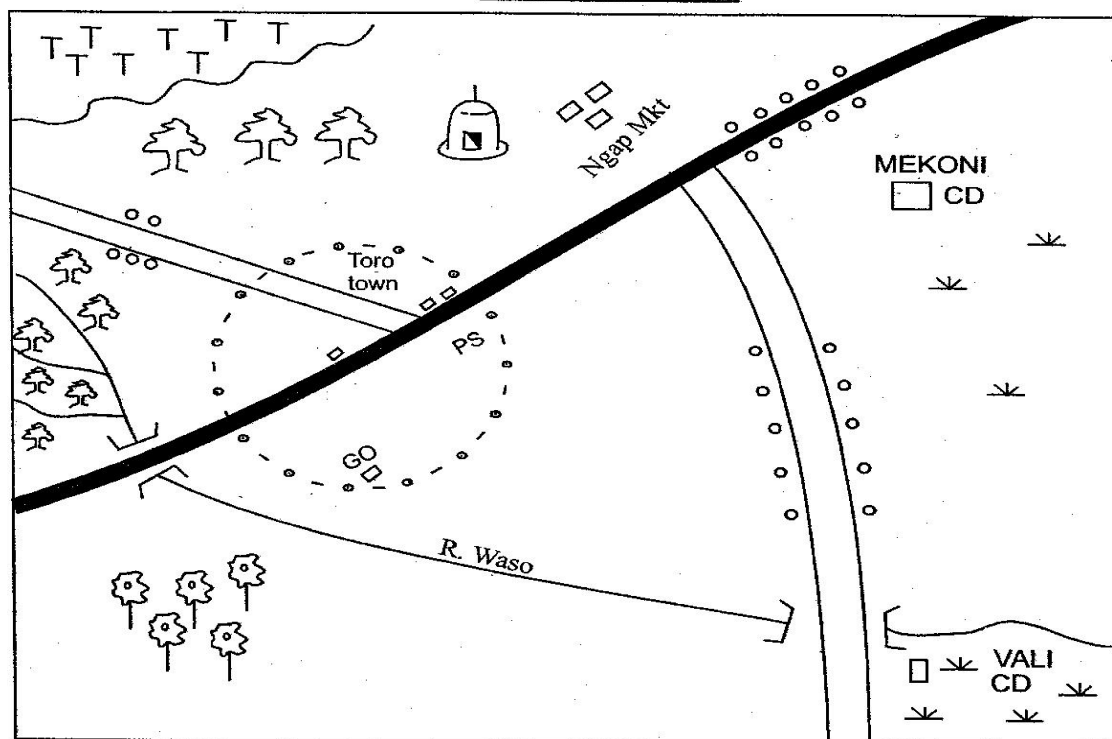


NYANDARUA COUNTY

- ▶ **MATHEMATICS**
- ▶ **ENGLISH LANGUAGE**
- ▶ **ENGLISH COMPOSITION**
- ▶ **KISWAHILI LUGHA**
- ▶ **KISWAHILI INSHA**
- ▶ **SCIENCE**
- ▶ **SOCIAL STUDIES/C. R. E.**

SOCIAL STUDIES

JORO AREA



Key

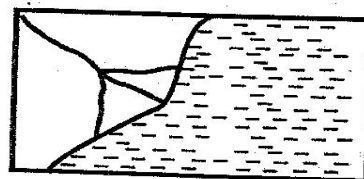
Tarmac road	Mosque	G.O - Governor's Office
Murram road	P.S - Police Station	Settlement
Pyrethrum	Forest	Tea Estate
Shrubs	C.D - Cattle Dip	Town Boundary

Study the map of Joro area and answer questions 1 - 7.

- The distance of the murram road from the junction to the South is approximately
A. 10km B. 9.5km C. 6km D. 13km
- The area covered by the map is likely to be ____
A. A ward B. District C. Location D. County.
- The type of settlement shown in the area is ____
A. scattered B. nucleated C. linear D. clustered.
- The climate of western side of Joro area is likely to be
A. hot and dry B. cool and wet C. hot and wet D. cool and dry

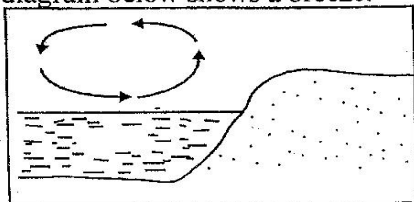
5. The direction of the Mekoni cattle dip from the pyrethrum farm is _____
A. NE B. SW
C. SE D. NW.
6. The governor of Joro area would like to develop a social facility for his people in Joro area. The most likely social facility he would develop is
A. market B. church
C. dispensary D. social hall.
7. The highest part of the map could be said to be:
A. At the pyrethrum farm
B. At the tea forest
C. Joro town
D. Ngop market.
8. The main reason for setting up the East African Community was to _____
A. promote democracy in the region
B. advocate for human rights
C. promote swahili language
D. promote trade in the area.
9. Which one of the following countries has a large part of its population as Cushites?
A. Sudan
B. Somalia.
C. Kenya
D. Ethiopia.
10. What was the responsibility of Omulamuzi in the Buganda traditional government?
A. Prime minister.
B. Chief Justice.
C. Commander in chief.
D. Finance minister.
11. Which one of the following countries grows bananas as the main subsistence crop?
A. Kenya B. Ethiopia
C. Uganda D. Sudan
12. Which one of the following is a negative effect of growth of industries?
A. Growth and expansion of towns.
B. Good social facilities.
C. Creation of jobs.
D. Pollution of the environment.
13. Peace in a society could be disturbed by _____
A. promoting unity
B. promoting development
C. nepotism
D. working hard.

14. The diagram below shows the formation of a _____ at a certain stage of a river.



- A. Estuary B. Ox-bow lake
C. Meander D. Delta.
15. The feature above was formed as a result of
A. erosion B. deposition
C. upwarping D. downwarping.
16. Horticulture from Kenya is exported to Europe by
A. air B. water
C. railway D. road.
17. Which one of the following leads to negative population growth?
A. Medical care. B. Civil wars.
C. Better hygiene. D. Education.
18. Which one of the following activities accounts for origin of Magadi town?
A. Tourism. B. Pastoralism.
C. Mining. D. Transportation.
19. Magistrates in Kenya are appointed by _____
A. Chief Justice
B. Attorney general
C. Public Service Commission
D. Judicial Service Commission.
20. Which one of the following is not a problem facing irrigation schemes in Kenya?
A. Increased market.
B. Silting of canals.
C. Pests and diseases.
D. Mismanagement of the schemes.
21. Three of the following were negative effects of colonial rule except
A. loss of land
B. decline of African culture
C. abolition of slave trade
D. racial discrimination.
22. The most common form of citizenship in Kenya is by:-
A. naturalisation B. registration
C. birth D. dual citizenship.
23. The time in Darkar 10°W is 6.00am. What will be the time in Nairobi 15°E?
A. 7.40pm. B. 4.20am.
C. 7.40am. D. 4.20pm.

24. The diagram below shows a breeze.



- A. Land
C. water
B. air
D. sea.

25. The following are ways through which Africans interacted in the past. Which one was not?

- A. Education.
C. Ceremonies.
B. Trade.
D. Intermarriages.

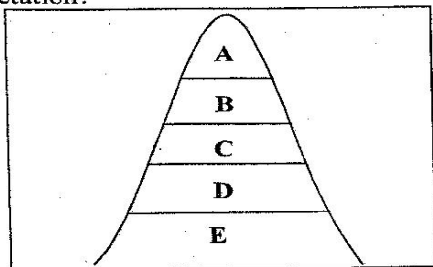
26. The following are pastoral communities in Africa. Which one is not?

- A. Maasai.
C. Tswana.
B. Sotho.
D. Fulani.

27. Which of the following countries in Africa is the most developed?

- A. Nigeria.
C. South Africa.
B. Egypt.
D. Angola.

28. The diagram below shows which type of vegetation?



- A. Tropical.
C. Mangrove.
B. Coastal.
D. Mountain.

29. Which economic activity is likely to take place at D in the above diagram?

- A. Lumbering.
C. Bee keeping.
B. Mining.
D. Pastoralism.

30. A civil marriage can be conducted by three of the following people except _____

- A. District Commissioner
B. Pastor
C. Magistrate
D. Attorney general

31. Which of the following statements is true about assimilated citizens in Senegal. They _____

- A. practised African traditional religion
B. were polygamous
C. were forced to work in the farms
D. would vote and be voted for.

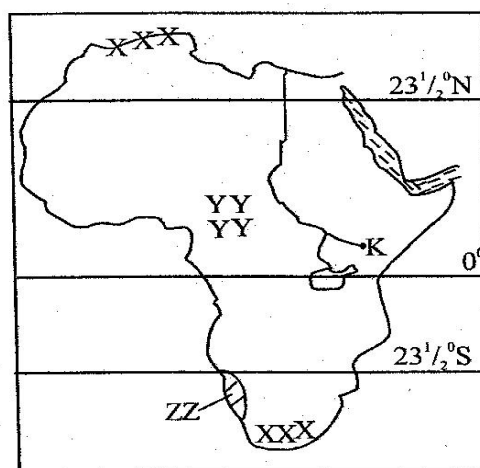
32. Who among the following is a member of the cabinet?

- A. Speaker.
B. Attorney general.
C. Senator.
D. Women representative.

33. Three of the following major towns in Africa have a sea port. Which one did not develop as a result of the port?

- A. Addis Ababa.
C. Maputo.
B. Lagos.
D. Mombasa.

Use the map of Africa below to answer questions 34-38



34. Which of the countries below is not crossed by the latitude 23 1/2°N?

- A. Libya.
C. D.R.C.
B. Egypt.
D. Liberia.

35. The climatic regions xxx receives rain in _____

- A. Summer
C. Spring
B. Winter
D. Mediterranean.

36. The highlands at the region marked yy are called _____

- A. Tibesti
C. Ethiopia.
B. Adamawa.
D. Jos.

37. The lake marked K is called lake _____

- A. Tana
C. Eyasi
B. Victoria
D. Kanyaboli.


38. The climatic region marked zzz is influenced by _____

- A. latitude
C. ocean current
B. longitude
D. relief.

39. Which of the following statements explains why most lakes in the rift valley are salty? The lakes _____

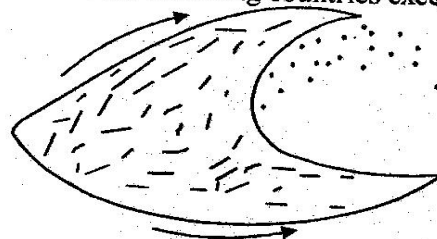
- A. are deep
C. are shallow
B. have no outlets
D. receive little rainfall

40. Which one of the following holidays is celebrated internationally?
 A. Labour day. B. Jamhuri day.
 C. Madaraka day. D. Mashujaa day.
41. Which one of the following statements is true about the fishing method drawn below?



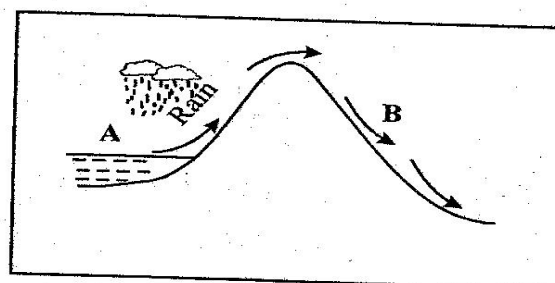
- A. It is called net drifting
 B. It uses the purse seine net
 C. It is used in small scale fishing
 D. Used to catch fish that live near the sea bed.
42. The method by which conflicts are solved through the court of law is called
 A. arbitration B. mediation
 C. negotiation D. litigation.
43. The migration of people out of a country is called
 A. emigration
 B. rural urban migration
 C. immigration
 D. settlement.
44. Who was the first African president to retire voluntarily?
 A. Senghor. B. Nyerere.
 C. Mandela. D. Moi.
45. In Kenya people exercise their democratic rights by:-
 A. walking freely
 B. getting free education
 C. attending community barazas
 D. voting during general elections
46. In which one of the following months is the sun overhead the tropic of cancer?
 A. December. B. June.
 C. March. D. September.
47. Who among the following was the third vice president in Kenya?
 A. Joseph Murumbi B. Mwai Kibaki
 C. Arap Moi D. Josphat Karanja
48. The following were methods of farming used by white settlers except
 A. plantation farming B. bush fallowing
 C. livestock farming D. mixed farming.

49. The feature drawn below is likely to be found in three of the following countries except



- A. Egypt B. Congo
 C. Libya D. Namibia.
50. Which of the following best describes the moonsoon winds?
 A. They blow from North East
 B. They blow from South East
 C. They cause short rains
 D. They are seasonal.
51. In which of the following places in Kenya is the geothermal power station found?
 A. Kipevu B. Olkaria
 C. Sondu Miriu D. Mzima springs

Use the diagram below to answer questions 52 to 54



52. The type of rainfall drawn above is
 A. mountain B. cyclonic
 C. frontal D. relief.
53. Which economic activity is not likely to take place at B?
 A. Mining B. Tourism
 C. Tea farming D. Pastoralism.
54. Which of the following towns is likely to receive the above rainfall?
 A. Lagos B. Mombasa
 C. Addis Ababa D. Mogadishu.
55. A political party policies are usually contained in a party's
 A. constitution B. manifesto
 C. rule book D. hansard.

56. Which of the following media of communication is commonly used in rural areas?
 A. Newspapers. B. Television.
 C. Radio. D. Email.
57. The forests of Swaziland are mainly made of
 A. tropical rainforests B. mangrove trees
 C. deciduous forests D. planted forests.
58. Which one of the following communities is found in West Africa?
 A. Wolof B. Berbers.
 C. Dinka. D. Luba.
59. Which is the main method used by miners to obtain gold from beneath the earth in South Africa? _____ method
 A. Panning B. Smelting
 C. Open cast D. Shaft.
60. Kenya is divided into how many constituencies?
 A. Three hundred and fifty.
 B. Two hundred and ten.
 C. Two hundred and seventy.
 D. Two hundred and ninety.

SECTION II

CHRISTIAN RELIGIOUS EDUCATION

61. Which one of the following statements below is true about the Biblical story of creation?
 A. God created day and night on the sixth day.
 B. God created man on the first day.
 C. God completed the creation on the sixth day.
 D. God took seven days to complete the creation work.
62. Which parable that Jesus taught showed the growth of the kingdom of God? The parable of the _____
 A. Unforgiving servant.
 B. Tax collector.
 C. Widow and the judge.
 D. Mustard seed.
63. Which of these activities by a christian shows a fruit of the Holy spirit?
 A. Healing the sick.
 B. Singing in the church.
 C. Preaching the Good news.
 D. Giving food to the hungry.
64. In which of these occasions did Jesus weep?
 A. When he visited Jerusalem city.
 B. When he was rejected at Nazareth.
 C. When he went to resurrect Lazarus.
 D. When he healed the blindman.
65. Folk stories were told to children in traditional African societies mainly to _____
 A. teach them good behaviour
 B. keep them busy
 C. bring them together
 D. give them the history of the community.
66. Which of the following is expressed in the Apostles creed?
 A. Jesus suffered under Pontious Pilate.
 B. Jesus was betrayed by Judas.
 C. Jesus was denied by Peter.
 D. Jesus forgave the repentant thief.
67. God said to Moses "I am who I am". These words were spoken to Moses when Moses was living at
 A. Canaan B. Midian
 C. Egypt D. Goshen.
68. Which was the main virtue taught to children in Tradition African Communities?
 A. Courage. B. Tolerance.
 C. Patience. D. Obedience.
69. The Sinai covenant was mainly between _____
 A. God and Moses
 B. Moses and Israelites
 C. God and Israelites
 D. Egyptians and Israelites.
70. The reference that John the Baptist used on Jesus was
 A. The messenger of God
 B. The lamb of God
 C. The son of God
 D. The dove of God.
71. During the pentecost day people heard the disciples speaking in different languages because they
 A. were filled with the holy spirit
 B. were drunk from alcohol
 C. had been baptised in the name of Jesus
 D. had come from different parts of the world.
72. In African Tradition religion, names given to God describes his
 A. origin and destination
 B. shape and size
 C. nature, work and power
 D. anger and punishment.
73. The first mission school in Kenya was started at Rabai by?
 A. Ludwig Krapf. B. Johan Rebman.
 C. Bishop Steve. D. Thomas Wakefield.
74. Depression is best defined as a feeling of _____
 A. sadness B. blessings
 C. laziness D. hopelessness.

75. Which is the best reason for a christian to avoid all forms of drug taking?
- Drug taking interferes with our health
 - Drug taking destroys the body which is the temple of the Holyspirit
 - Drug taking destroys our good relations with others
 - Drug taking makes us commit a series of crimes.
76. Which beatitudes suggests that christians will see God?
- If they are merciful.
 - If they work for peace.
 - If they are pure in heart.
 - If they are humble.
77. What is the correct order of the Gospel books?
- Luke, Mathew, John, Mark.
 - Mathew, Mark, Luke, John.
 - Mark, Mathew, Luke, John.
 - Mark, Luke, Mathew, John.
78. Who among the following was not among the seven deacons?
- John.
 - Parmentas.
 - Stephen.
 - Nicolaus.
79. The best way to help us improve on our abilities is by _____
- speaking in praise of our abilities
 - working harder with our abilities
 - listening to friends who do not know their abilities
 - sympathising with friends who would like to have ability.
80. After ascension Jesus stayed on earth for
- 3years
 - 40 days
 - 3 days
 - 12 years.
81. "We will make three tents one for you one for Moses and one for Elijah" These words were spoken during _____ of Jesus.
- Crucifixion
 - Baptism
 - Transfiguration
 - Purification.
82. Three of the following are effects of sex before marriage except
- becoming a hero
 - unwanted pregnancies
 - school drop outs
 - guilt and stress.
83. What is the best help that can be given to the beggars?
- Give them employment
 - Give them a coin whenever you see them
 - Perform a harambee for them
 - Tell people not to abuse them.
84. What was the main work of the Old Testament Prophets?
- Foretelling the future.
 - Performing miracles.
 - Delivering God's message.
 - Rehabilitate them.
85. Which is the best way christians can express their faith in daily action?
- Attending christian fellowship.
 - Sharing with others.
 - Sympathising with the needy.
 - Reading the bible everyday.
86. Gehazi showed lack of honesty to Elisha when he _____
- ran after Naaman for money and clothing
 - healed Naaman's leprosy
 - lied to Elisha and Naaman
 - cheated the prophets who visited Elisha.
87. The boy raised to life by prophet Elisha was the son of the
- Widow of Zarephath
 - Canaanite woman
 - Shunamite woman
 - Widow of Nain.
88. Which of the following beliefs is common to both traditional Africans and Christianity?
- Belief in resurrection
 - Belief in witchcraft
 - Belief in angels
 - Belief in life after death
89. What is the main teaching of the first book of the Bible?
- God's call to Moses.
 - The beginning of life.
 - The beginning of Israelites monarchy.
 - Departure of Israelites from Egypt.
90. Which one of the following was the main teaching of Jesus on the sermon on the mount?
- How to become rich.
 - How to remain poor.
 - How to die old.
 - Values of christian living.