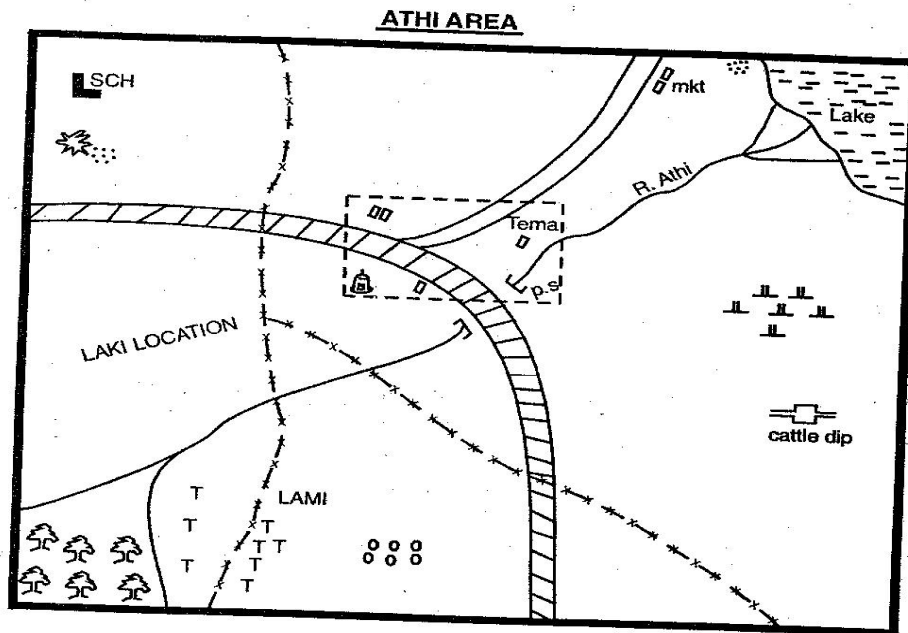


MAKUENI COUNTY

- ▶ **MATHEMATICS**
- ▶ **ENGLISH LANGUAGE**
- ▶ **ENGLISH COMPOSITION**
- ▶ **KISWAHILI LUGHA**
- ▶ **KISWAHILI INSHA**
- ▶ **SCIENCE**
- ▶ **SOCIAL STUDIES/C.R.E**

SOCIAL STUDIES



Scale

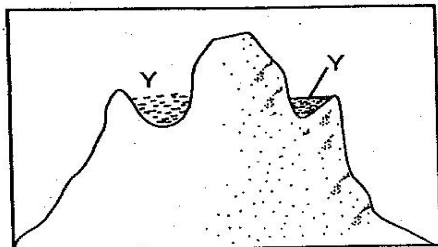
Key

Tarmac road	Quarry	School	Settlement
Locational boundary	Forest	Mosque	Buildings
FT - Fish trap	P.S - Police Station	Scrubs	
TT - Tea plantation			

Study the map of ATHI area and answer questions 1 - 7.

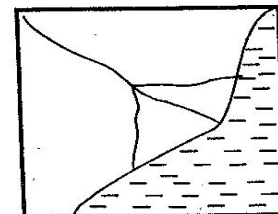
- The general flow of river Athi is
 - SW to NE
 - NE to SW
 - East to West
 - North to South.
- The feature formed at the mouth of river Athi is _____.
 - Cape
 - Estuary
 - Cape
 - Delta.
- Which one of the following economic activities is not carried out in Athi area?
 - Trading.
 - Tourism.
 - Farming.
 - Mining
- The type of population distribution in Athi area can be described as
 - linear
 - dense
 - nucleated
 - evenly distributed
- The people of Athi area are likely to be
 - Muslims
 - Pagans
 - Christianity
 - Hindus.
- Which of the following is the main factor that led to growth of Tewa town?
 - Transport.
 - Religion.
 - Security.
 - Education.
- If you were a member of Athi development Committee, which project would you recommend for the people of Athi area?
 - Stadium.
 - Airstrip.
 - Chief's camp
 - Hotel

8. Who among the following leaders in Buganda kingdom was responsible for ensuring that finances were properly used?
 A. Kabaka. B. Omulamuzi.
 C. Omwanika. D. Lukiko.
9. The following are western Bantus in Kenya Abaluhya, Abagusii, Abasuba and Abakuria Who among the four settled across L. Victoria to Rusinga island?
 A. Abaluhya. B. Abakuria.
 C. Abagusii. D. Abasuba.
10. An outline of law in which ones property is shared after his/her death is called
 A. intestate B. will
 C. succession D. estate.
11. The lake marked Y below was formed as a result of



- A. wind action B. faulting
 C. downwarping D. glacial action
12. Which one of the following is an example of a Lake formed as a result of the above?
 A. L. Teleki B. L. Chala
 C. L. Nyose D. L. Kanyaboli
13. Kabaka ruled with the assistance of three chief ministers Omulamuzi was the
 A. Prime minister B. lukiko
 C. treasure D. Chief justice.
14. Which of the following mountains are residual inselbergs in Africa?
 A. Naruli and Homboli
 B. Cape ranges
 C. Dankil and Mt. Meru
 D. Kenya and Kilimanjaro
15. Three of the following are ways through which one can acquire citizenship. Which one is not?
 A. Dual. B. Birth.
 C. Registration. D. Nomination.
16. Quinta a Std 5 pupil in Chuka primary school was denied food by her parents for not completing the house chores. Which bill of rights was she denied?
 A. Right to basic needs. B. Right to privacy
 C. Right to liberty D. Right to security

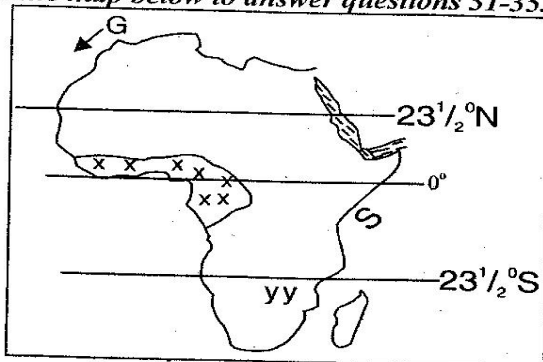
17. Three of the following naturalists were arrested in 1952 during the state of emergency. Who among them was not in the group?
 A. Bildad Kaggia. B. James Gichuru.
 C. Fred Kubai. D. Paul Ngei.
18. Forestry is mono developed in Swaziland than Kenya mainly because?
 A. Most land in Swaziland is covered with man made forests.
 B. Most land in Swaziland is covered by indegenous trees.
 C. There are no charcoal burners in Swaziland.
 D. Most land in Kenya is covered by indigenous trees.
19. Kenya celebrate achievements of her heroes on _____ every year.
 A. 1st June B. 1st May
 C. 20th October D. 21st December
20. Three of the following are business opportunities found in Kenya. Which one is not?
 A. Poaching of wildlife.
 B. Provision of service.
 C. Road construction.
 D. Establishment of institutions of learning.
21. Three of the following are ox-bow lakes found in Kenya. Which one is found in Tanzania?
 A. L. Kanyaboli. B. L. Shakababo.
 C. L. Bilisa. D. L. Utunge.
22. The main parties that formed the ruling coalition in Kenya during the march 2013 general election are
 A. ODM and PNU B. TNA and URP
 C. Jubilee and Cord D. Cord and ODM
23. Three of the following are functions performed by the judiciary in Kenya. Which one is not?
 A. Interpreting the law.
 B. Ensure justice and fairness among citizens.
 C. Making laws.
 D. Hearing and determining cases.
24. The diagram below shows the formation of a



- A. estuary B. delta
 C. ria D. meander

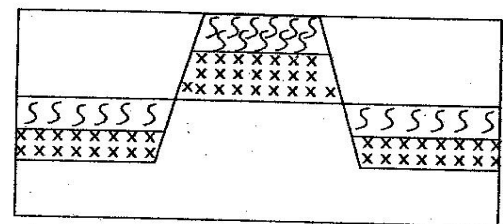
25. Which of the rivers below has a feature like the one above?
 A. Tana. B. Athi.
 C. Niger. D. Nile.
26. People who were born together and initiated at the same line formed?
 A. A unit B. Clan
 C. Age - set D. Age - group
27. The time at town Z 30°E is 12.00 noon. What is the time at town W 30°W ?
 A. 8.00 a.m B. 4.00 pm
 C. 8.00 pm D. 4.00 a.m
28. The scales on maps can be expressed in three ways except?
 A. As a compass direction.
 B. As a statement.
 C. As a representative fraction.
 D. In linear form.
29. The major role of a school in the community is to _____
 A. assist parents in raising their children
 B. prepare pupils for adult life
 C. make pupils have friends
 D. pass knowledge to pupils.
30. The three main theories of human origin include the following except _____ theory
 A. creation B. mythical
 C. evolution D. achemedes

Use the map below to answer questions 31-35.



31. The climate region marked XX is called _____.
 A. Equatorial B. Savannah
 C. Desert D. Tropical
32. The ocean current marked by the letter G is called
 A. Cold Canary B. Warm Canary
 C. Cold Benguela D. Warm Guinea
33. Which one of the countries below is crossed by the latitude $23\frac{1}{2}^{\circ}\text{S}$?
 A. Tanzania B. DRC
 C. Namibia D. Rwanda

34. The grassland found at the area yyy is _____.
 A. High veld B. Savannah
 C. Napier grass D. Reeds
35. The town marked J is called _____.
 A. Moyale B. Mandera
 C. Juba D. Mogadishu
36. Oil refinery is located in three of the following towns in Nigeria except
 A. Kaduna B. Lagos
 C. Port Harcourt D. Accra
37. Who among the following traditional Kenyan leaders led his community to fight the colonialists?
 A. Waiyaki wa Hinga
 B. Lenana
 C. Kabaka Mutesa I
 D. Kabaka Wanga.
38. Who among the following people is the head of the court system in Kenya?
 A. President B. Attorney General
 C. Chief Justice D. Inspector general
39. Who among the following was the head of German East African company?
 A. Carl Peters
 B. Seyyid said
 C. Ludwig Kraph
 D. Dr. Livingstone
40. In which stage of human evolution was man able to hold things with thumb?
 A. Home sapien B. Homo Habilis
 C. Homo sapien D. Homo sapien
41. The new constitution was inaugurated in the year _____.
 A. 2005 B. 2007
 C. 2010 D. 2013
42. The diagram below shows the formation of _____ mountain



- A. fold B. residual
 C. block D. volcanic
43. The physical feature above was formed as a result of
 A. faulting and uplifting
 B. faulting and sinking
 C. folding
 D. vulcanicity

44. Which one of the mountain below was formed as a result of the above?

- A. Ahaggar B. Tsbesti
C. Pare D. Menengai

45. Which of the town below is crossed by the equator?

- A. Nanyuki B. Solai
C. Naivasha D. Lodwar

46. Which one of the minerals below is correctly matched with where it is mined in Kenya.

	Mineral	Where mined
A	Diatomite	Kerio valley
B	Carbon Dioxide	Mombasa
C	Salt	Ngomeni
D	Limestone	L. Magadi

47. Who among the following people is the head of a county executive committee?

- A. Senator
B. Women representative
C. County speaker
D. Governor

48. Which of the following countries is not a member of IGAD?

- A. Uganda B. Sudan
C. Djibouti D. Tanzania

49. Cabinet meetings in Kenya are chaired by

- A. President
B. Chief justice
C. Attorney General
D. Speaker of National Assembly

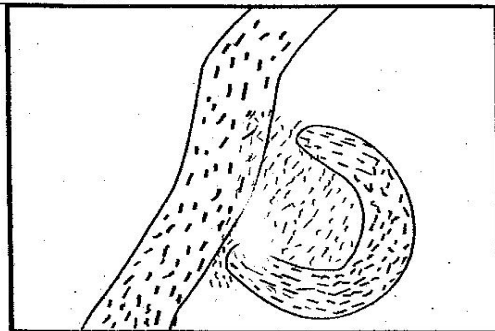
50. Which of the following species of trees is most likely to be found in DRC Congo?

- A. Pine B. Meru oak
C. Cedar D. Wattle

51. The water body that lies to the North of Africa is

- A. Red sea B. Indian ocean
C. Mediterranean D. Pacific ocean

52. The diagram below shows the formation of lake?



- A. Lava dammed B. Crater
C. Meader D. Ox-bow

53. Which of the lakes below was formed as a result of the above?

- A. Kanyamboli B. Paradise
C. Teleki D. Shalla.

54. The following are members of ECOWAS except

- A. Gabon B. Senegal
C. Nigeria D. Mali

55. Which one is not a way of resolving disputes in the society?

- A. Negotiation. B. Physical Fight.
C. Courts D. Agreements.

56. Among the symbols of the Kenyan nation which one symbolizes Kenya's independence

- A. National flag B. National assembly
C. Public seal D. Coat of Arms

57. The title given to the Wanyamwezi army officer was

- A. Mtwale B. Mteko
C. Minule D. Kabaka

58. Which of these towns in East Africa is likely to receive relief rainfall?

- A. Mombasa B. Moshi
C. Jinja D. Kisumu

59. Which of these is not a quality of a good marriage?

- A. Faithfulness. B. Love.
C. Selfishness. D. Tolerance.

60. The leader of Bukusu resistance was _____

- A. Mukile Wa Nameme
B. Lenana
C. Mumia
D. Koitalel.

SECTION II

CHRISTIAN RELIGIOUS EDUCATION

61. Why did God create man last?

- A. To be more intelligent
B. He needed more time to create man
C. He wanted him to be perfect
D. He wanted man to take care of the rest of the creation

62. On which day did God create the sky

- A. 1 B. 2
C. 3 D. 5

63. Which of the following was not God's promise to Abraham

- A. wealth B. great name
C. many descendants D. land

64. The book of Exodus mainly talks about
 A. creation of the universe
 B. coming of the messiah
 C. Noah and the Ark
 D. Freeing of Israelites from the Egyptian slavery to the promised land
65. David showed that he had respect for leaders when he
 A. accepted to be appointed as a king
 B. spared the life of king Saul
 C. accepted to kill Goliath
 D. made his son the king
66. Do not say that you are too young but go to the people I send you to. God said these words to Jeremiah when he
 A. was sleeping at the place of worship in Shiloh
 B. was afraid of going back to Egypt
 C. Found it hard to do God's work
 D. had entered a ship going to a different place
67. Which one of the following correctly explain why God rejected Saul as king of Israel?
 A. He committed Adultery
 B. He disobeyed God's command
 C. He hated David
 D. He committed idolatry
68. Zachariah could not speak after offering the burnt sacrifice because
 A. He had seen a vision
 B. God had made him dumb
 C. He had spoken to an angel
 D. He had been promised a son
69. Who among the following kings of Israel was a musician
 A. Saul
 B. David
 C. Jeroboam
 D. Ahab
70. Which one of the following is not a purpose of the bible
 A. To rebuke the truth
 B. Give instructions
 C. Correct faults
 D. Teach the truth
71. The following are effects of irresponsible behaviour on school pupils. Which one is not?
 A. Unwanted pregnancies
 B. School drop out
 C. Being rewarded
 D. Transmitting STIs
72. People in the traditional African Society believed that God is omniscient. This means that
 A. God knows everything and there is nothing we can hide from him
 B. God has the greatest strength
 C. God is present everywhere
 D. God cares and provides the needs of everyone
73. Which of the following explains what is to be contented
 A. Forgiving our enemies.
 B. Revenging onto our enemies.
 C. Being satisfied with what we have.
 D. Being rich and prosperous
74. The earliest christian missionaries to Kenya were Ludwig Krapf and Johann Rebman. The two were sent by
 A. Church missionary society
 B. Church of the Scotland mission
 C. Luthern church
 D. Holy Ghost fathers
75. Which of the following phrases is not found in the Apostles creed?
 A. Born of virgin Mary.
 B. The power and the Glory.
 C. The Holy catholic church.
 D. He sits on the right hand of God.
76. Which one of the following activities of Jesus prepared his disciples for his coming death?
 A. Feeding the five thousand.
 B. Sharing the last meal with them.
 C. Walking on water.
 D. Visiting people in their homes.
77. Which one of the following activities does not show mainly Man's care for the environment?
 A. Conserving wild animals.
 B. Afforestation.
 C. Conserving soil.
 D. Pouching wild animals.
78. The following are ways that can be used to prevent HIV/AIDs. Which one is not?
 A. Being faithful to many spouses.
 B. Youth Abstinence.
 C. Having screened blood for transfusion.
 D. Avoiding sharing of cutting objects.
79. Three of the following explains why certain children get involved in child labour. Which one is false?
 A. Neglect from home.
 B. Poverty in their homes.
 C. Because of money to buy drugs.
 D. Parental influence to get excess food.

80. Which one of the following statements explains the meaning of the word discernment
- Decision made after fair analysis
 - Ability to exercise judgement
 - Satisfied with judgement
 - Living in harmony.
81. The first mission school was opened at
- Thogoto
 - Rabai
 - Lamu
 - Nairobi
82. What was the main teaching of the sermon on the mountain?
- How to pray and fast.
 - Being humble.
 - Values of Christian living.
 - Christian suffering on Earth.
83. Which of the following is not a reason why we pray?
- To praise and thank God.
 - Ask for forgiveness.
 - Ask for God's protection.
 - Condemn our enemies.
84. Which was the main message of John the Baptist to the people?
- Become his disciples.
 - Love one another.
 - Repent their sins.
 - Feed one another.
85. Jesus washed his disciples feet to teach us that
- Church leaders should always wash their followers feet
 - Christians should wash their feet before prayers
 - Christians should be humble to serve one another
 - When we wash our feet our sins are forgiven.
86. True Christians freedom means all the following except
- Reconciling with God
 - Being free from sin
 - Doing anything you want to do
 - Having our sins forgiven.
87. The period before Christmas is referred to as
- Lent
 - Advent
 - Pentecost
 - Passover
88. The church helps refugees in three of the following ways except
- Providing medical care to the refugees
 - Giving them hope through counselling
 - Providing relief services
 - Discouraging immigration as it leads to population pressure.
89. Which one of the following statements is contained in the Apostles creed
- The grace of the Lord Jesus Christ
 - Thy kingdom come
 - Peace be with you
 - Belief in the resurrection of the body
90. The people who are ordained to work in the church are called
- Laity
 - Evangelists
 - Clergy
 - Witness.