
COUNTY MOCK EXAMS-STD 8 2016

SOCIAL STUDIES AND C.R.E

Coordinated by KENPRO,
Macjo Arcade, 4th Floor, Suite 15E,
Off Magadi Road, Ongata Rongai |Tel: +254202319748 |
E-mail:infosnkenya@gmail.com | Website:www.schoolsnetkenya.com

NAIROBI CITY COUNTY MOCK EXAMS-2016

STANDARD EIGHT SOCIAL STUDIES & C.R.E

Time: 2 Hours 15 Minutes

READ THESE INSTRUCTIONS CAREFULLY

1. You have been given this question booklet and a separate answer sheet. The question paper contains 90 questions.
2. Do any necessary rough work in this booklet.
3. When you have chosen your answer, mark it on the ANSWER SHEET, not in this questionbooklet.

HOW TO USE THE ANSWER SHEET

4. Use an ordinary pencil only.
5. Make sure that you have written on the answer sheet.

YOUR INDEX NUMBER
YOUR NAME
NAME OF YOUR SCHOOL
6. By drawing a **DARK LINE** inside the correct numbered boxes mark your full Index Number (i.e. School Code Number and the three- figure Candidate's Number) in the grid near the top of the answer sheet.
7. Do not make any marks outside the brackets [].
8. Keep the sheet as clean as possible and **DO NOT FOLD IT**.
9. For each of the questions 1 - 90 four answers are given. The answers are lettered A, B, C, D. In each case only **ONE** of the four answers is correct. Choose the correct answer.
10. On the answer sheet the correct answer is to be shown by drawing a dark line inside the box in which the letter you have chosen is written.

Example:-

In the question Paper:

31. One of the following methods is used in Mwea irrigation scheme?

- A. overhead
- B. market gardening
- C. furrow
- D. canal

The correct answer is D.

On The answer sheet:

7. [A][B][C][D] 12. [A][B][C][D] 31. [A][B][C] D 45. [A][B][C][D]

In the Third set, the box with the letter D printed in it is marked.


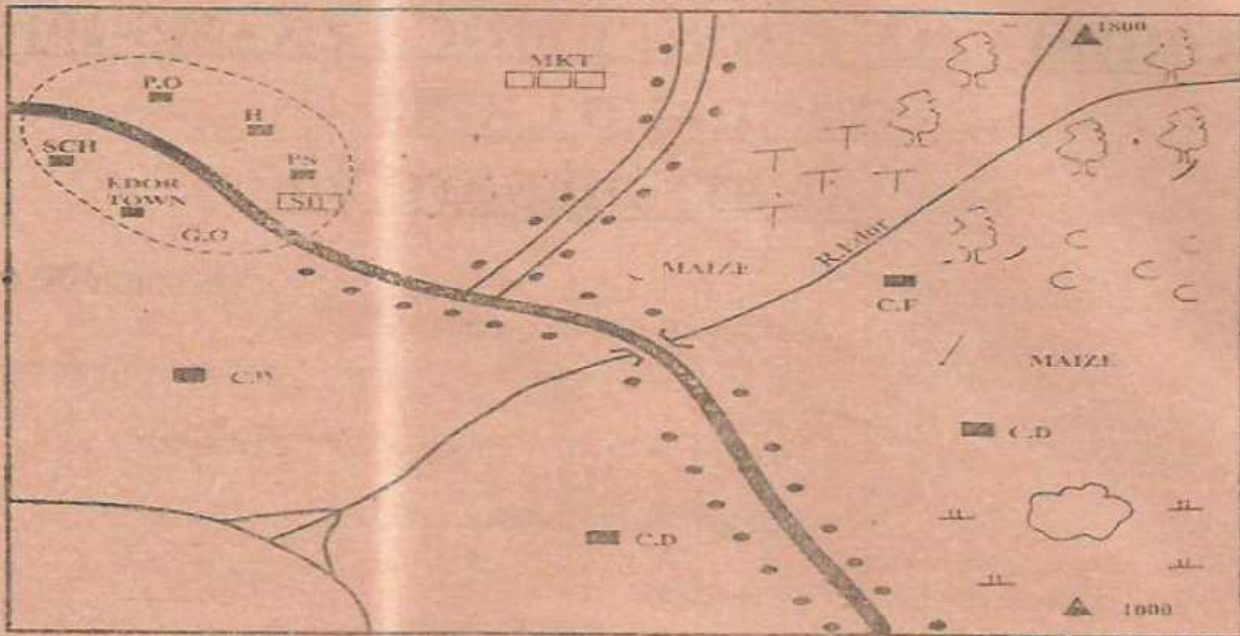
11. Your dark line **MUST** be within the bracket.
12. For each question **ONLY ONE** bracket is to be marked in each of four brackets.

This Question Paper consists of 6 printed pages.

Candidates should check the question paper to ensure that all the pages are printed and no questions are missing.

TURN OVER

EDOR AREA



KEY:

	Forest		Scrub	CD	Cattle Dip
	Tarmac Road		Settlements	PS	Police station
	Murram Road	C.F	Coffe Factory	G.O	Governor's Office
	Town Boundary	C	Coffee	SH	Social hall
	Quarry	SCH	School	H	Hospital
		Mkt	Market	PO	Post Office
		T	Tea		

- The land in Edor area rises towards
 - South East
 - North West
 - South West
 - North East
- Business people in Edor area obtain their trading licences from
 - police station
 - County Governor's office
 - Social hall
 - Post office
- Which one of the following social amenities is not offered in Edor town?
 - Recreation facilities
 - Religious facilities
 - Health facilities
 - Educational facilities
- The main economic activities carried out in Edor area are
 - trading and crop farming
 - trading and mining
 - crop farming and livestock farming
 - fishing and transporting
- What has influenced the settlement pattern in Edor area?
 - Transport
 - Urbanisation
 - Agriculture
 - Mining
- The feature formed at the mouth of River Edor is
 - estuary
 - confluence
 - depression
 - delta
- The climate of the South East of Edor area can be described as
 - hot and wet
 - hot and dry
 - cool and dry
 - cool and wet
- Education in African traditional society helped the people
 - to be able to read and write
 - to demand for their independence
 - to be useful members in the society
 - to migrate from rural to urban areas
- Which one of the following Eastern African communities is correctly matched with its language group?

Community	Language group
A. Karamajong	Bantu
B. Nyamwezi	Cushites
C. Baganda	Nilotes
D. Amharas	Semites
- The following are theories of human origin. Which one is true about creation?
 - God and Allah created all things
 - Humans have developed through stages
 - Agikuyu were descendants of Giluyu and Mumbi
 - All people descended from the sky
- The revolution of the earth

- A. affects the length of day and night
 B. causes differences in the time on earth
 C. takes twenty four hours
 D. causes day and night
12. The best way of resolving disagreements in a school is through
 A. negotiation B. mediation
 C. dialogue D. arbitration
13. Lakes found in the desert of Africa were formed mainly as a result of
 A. deposition B. erosion
 C. earth movement D. human activities
14. Which one of the following statements is true about shifting cultivation?
 A. It is mainly practical where the population is low
 B. Plots are abandoned for several days to restore fertility
 C. Several cash crops are grown using this method
 D. The land is sub-divided into several plots
15. Three of the following are importances of cultural artifacts. Which one is not?
 A. Helps us to know our ancestors and origin
 B. Tell us about life styles of our ancestors
 C. Are items made using modern technology
 D. Inform us of materials used in the past
16. Which one of the following statements is true about Buganda kingdom during the pre-colonial period?
 A. The people elected members of Lukiko.
 B. The clan heads formed council of elders
 C. The Kabaka ruled the kingdom alone
 D. The Kabaka inherited the leadership
17. Who among the following early visitors of Eastern Africa was an explorer?
 A. Seyyid Said B. Carl Peters
 C. H.M Stanley D. William Macknnon
18. The country that borders Kenya to the North is?
 A. Somalia B. South Sudan
 C. Djibouti D. Ethiopia
19. Which one of the following rivers is a major inland fishing ground in Africa?
 A. River Nile B. River Tana
 C. River Senegal D. River Limpopo
20. The production of goods from raw materials is known as
 A. mining B. industry
 C. trade D. agriculture
21. Three of the following are ways through which one may lose citizenship in Kenya. Which one is not?
 A. One is jailed before five years and over registration
 B. One used pretence and false documents to acquire citizenship
 C. One collaborates with the enemy of Kenya
 D. One lives in a foreign country for long
22. The following are examples of direct democracy except one. Which one is it?
 A. Pupils voting for their leaders in a school
 B. President of pupils government attending committee meeting in school
 C. Pupils voting for their school rules and regulations
 D. Pupils agreeing on how to clean their school

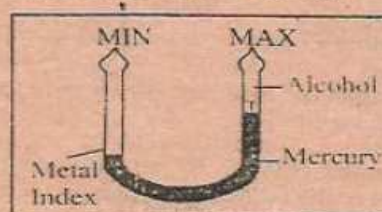
Use the map of Africa to answer questions 23 to 26



23. The vegetation of the shaded part marked T is likely to be
 A. tropical forest B. temperate grassland
 C. mangrove forests D. tropical grasslands
24. The town marked S is
 A. Alexandria B. Tripoli
 C. Benghazi D. Cairo
25. The main reason why the area along river Y in the map is densely populated is
 A. it provides water for irrigation
 B. the area has good climate
 C. the river is a good fishing ground
 D. the area has good drainage
26. The community most likely to occupy the shaded area marked P is
 A. bamba B. fulani C. berbers D. tswana
27. Below are descriptions of a prominent leader in Kenya:
 (i) He was a medicineman
 (ii) He was a spiritual leader
 (iii) He was a prophet
 (iv) He led his community to resist colonial rule
 (v) He led his people in fighting against construction of railway line
 The prominent leader described above is likely to be
 A. Mekatilili wa Menza
 B. Koitalel Arap Samoei
 C. Waiyaki wa Hinga
 D. Mukite wa Nameme
28. Which one of the following is the main factor contributing to rapid population growth in Kenya?
 A. Improved medical care
 B. Early marriages
 C. Lack of family planning
 D. Sex preference
29. Below are conditions favouring growth of a certain crop:
 (i) High temperatures between 20°C and 26°C
 (ii) Well distributed rainfall of more than 1200mm
 (iii) Deep, fertile and well drained soils.
 (iv) Protection from strong winds.
 The conditions above favour growth of
 A. cocoa B. sisal
 C. banana D. sugarcane
30. The following statements are important in the institution of marriage. Which one is not?
 A. It provides companionship
 B. It promotes rivalry among families
 C. It enriches culture
 D. It enhances unity
31. Zai'adi, a Standard Six girl, saw a man stealing from

- a supermarket. What should Zawadi do as a responsible citizen?
- Keep quiet and run away
 - Call her school classmates to beat up the thief
 - Inform the shop owner
 - Report the matter to the head teacher
32. Which one of the following is a factor that promotes unity in Kenya?
- Equal distribution of resources
 - The Coat of Arms
 - The Public Seal
 - The National Anthem
33. Below are statements about a certain missionary
- He worked for the Church Missionary Society (CMS)
 - He helped in translating the Bible from English to Kiswahili
 - He was the first European to see Mt. Kilimanjaro
 - He became blind and left Eastern Africa in 1873
- Who is the missionary described above?
- Dr. David Livingstone
 - Dr. Ludwin Kraph
 - Johann Rebmann
 - John Speke
34. The following are benefits of dairy farming in Kenya. Which one is not?
- It is a source of food
 - It is a source of raw materials in the skin and hide industries
 - Animal droppings are used as manure
 - It has created employment in the farms and milk processing factories
35. Below are descriptions of a town in Eastern Africa:
- It is a tourist centre
 - It is a commercial centre
 - It is a major communication centre
 - It is home to international bodies
- Nairobi
 - Kampala
 - Arusha
 - Dodoma
36. Which one of the following is a factor influencing trade in Eastern Africa?
- Availability of labour
 - Political stability
 - Strong political parties
 - Favourable climatic conditions
37. Juma, a standard Five boy, was not allowed to go for break by his teacher because he had not finished his homework. Which children's right was Juma denied?
- Right to education
 - Right to health care
 - Right to a clean environment
 - Right to leisure
38. Below are some uses of a mineral mined in Kenya"
- Used in making heat insulators
 - Used in strengthening steel
 - Making of sulphuric acid
 - Manufacture of toothpaste
- Which one of the following combination of uses listed above is for fluospar
- (ii), (iii), (iv)
 - (ii), (iii), (v)
 - (iii), (iv), (v)
 - (i), (ii) (iii)

39. The following are challenges facing tourism in Africa. Which one is not?
- Human-wildlife conflict
 - Environment pollution
 - Low tax
 - Political instability
40. The diagram below represents an instrument used to measure an element of weather



The instrument above is used to measure which element of weather

- Humidity
 - Sunshine
 - Air pressure
 - Temperature
41. Which type of fish are caught in inland fishing grounds
- Tilapia, omena, Nile perch
 - King fish, Tuna, parrot fish
 - Lobsters, tilapia, mudfish
 - Cat fish, omena, trout
42. The following are contributions of minerals to the economy of Kenya except?
- employment opportunities
 - earning foreign exchange
 - development of infrastructure
 - pollution of the environment
43. Three of the following were problems that faced OAU. Which one is not?
- Delay in paying funds to run the organization
 - Assisting member countries from trading blocs
 - Border disputes among member countries
 - Lack of capacity to implement the resolutions
44. Which among of the following roles is not played by the community to the school?
- Gives moral support
 - Educates the teachers
 - Allows the school to use their facilities like halls
 - Is the source of labour to the school
45. The following are areas where maize is grown on large scale in Tanzania. Which one is it?
- Songea
 - Tanga
 - Mbeya
 - Arusha
46. Which among the following towns is not a hinter land?
- Kisumu
 - Nakuru
 - Malindi
 - Mombasa
47. The following communities belong to West Atlantic except?
- Wolof
 - Tukolor
 - Tuareg
 - Fula...
48. Which one of the following is a big problem in the Perkerra Irrigation Scheme
- Social conflicts
 - Water shortage
 - Breakdown of equipments
 - Overpopulation



49. The road sign shown above indicates
A. danger ahead B. no entry
C. no overtaking D. no parking
50. The type of tax paid on goods and services is called
A. income tax B. value added tax
C. import duty D. service charge
51. Which one of the following was a role of early political associations in the struggle for independence in Kenya?
A. Educated Africans on the injustices by the colonial government
B. African proved to be capable of governing themselves
C. The members formed Anake A forte
D. Advised the colonial government to prepare a referendum
52. Below are facts about a system of government in Kenya and Swaziland
(i) Parliament has two houses
(ii) The country is a republic
(iii) Position of the head of state is hereditary
(iv) The country has a multi-party democracy
Which one of the factors above is a similarity for Kenya and Swaziland?
A. (ii) B. (iv) C. (iii) D. (i)
53. Which one of the following statements is true about the United Nations?
A. It is made up of all independent countries
B. Its Secretary General nominates presidents for Member countries
C. Has maintained and kept peace in war torn countries
D. Food and Agriculture organizations carry out research on medicine
54. Which one of the following factors are causes of conflict in the society?
A. Unemployment, intolerance, law abiding
B. Tribalism, poverty, fair treatment
C. Equity, racism, hatred
D. Unemployment, tribalism, nepotism
55. Which one of the following is a function of the Judiciary
A. Formulates government policies
B. Makes by-laws that governs the country
C. Ensures justice and fairness in the country
D. Ensure justice and fairness in the country
56. Which one of the following is the main function of the Kenya Defence Forces?
A. Protect the country from external attacks
B. Collect information about people who are threatening the security and peace
C. Protect government buildings and properties
D. Rehabilitates people who have committed crimes
57. When Kenya was declared a republic on 12th December, 1964 Jomo Kenyatta became
A. The President
B. The Prime Minister
C. The Governor
D. The Commander-in-chief of the armed forces

58. A head teacher of a school had conflict with one of the parents. He decided to go to court. Which way of conflict resolution was this?
A. Dialogue B. Litigation
C. Arbitration D. Decision making
59. The constitution of Kenya has the following chapters except?
A. devolved government
B. the public servants
C. citizenship
D. promulgation
60. Below are sources of revenue
(i) Business licences
(ii) Property rates
(iii) Taxes
(iv) Collection of fees
(v) Petroleum levy
Which one of the following options contains sources of revenue for the county government
A. (i) and (v) B. (i) and (ii)
C. (ii) and (iv) D. (iv) and (v)

SECTION II

CHRISTIAN RELIGIOUS EDUCATION

61. ...You must not eat the fruit of that tree. If you do, you will die. Genesis 2:17 These words were spoken by God to _____
A. Eve B. Adam
C. Servant D. Adam and Eve
62. The following are promises made by God to Abraham. Which one is not? Gen 12:1-3
A. I will bless and curse those who curse you.
B. I will give you many descendants
C. I will make your name famous
D. I will curse those who curse you
63. The two sons of Joseph were _____
A. Ephraim and Japheth B. Isaac and Ephraim
C. Manasseh and Ephraim D. Cain and Seth
64. During the passover night, what was to be done to the food that was left over?
A. Roasted B. Buried
C. Preserved D. Burnt
65. One of the following commandments guides and strengthens our relationship with God. Which one is it?
A. Observe the sabbath and keep it holy
B. Do not kill
C. Do not accuse anyone falsely
D. Do not covert other people's property
66. Israelites were ruled by _____ before the rule of kings
A. patriarchs B. priest
C. judges D. prophets
67. The following achievements and failures are true about a certain King of Israel
(i) Led victorious armies against Israelites enemies
(ii) Captured Jerusalem
(iii) Carried out a census against God's will
(iv) God sent prophet Nathan to pronounce judgement to him
Who is being referred to?
A. Solomon B. David C. Ahab D. Saul
68. God rejected King Saul because he _____
A. married many wives
B. did not kill animals captured in war

- C. allowed the worship of idols
D. took another man's wife
69. A minor prophet who prophesied about Jesus triumphant entry into Jerusalem is ____
A. Zechariah B. Haggai C. Obadiah D. Joel
70. The reason why Joseph went to the town of Bethlehem during the census was ____
A. Mary was expectant
B. It was a religious centre.
C. He was a descendant of David
D. It was nearer to Nazareth
71. Jesus and his parents went to Jerusalem for the passover festival when he was ____
A. 12 days B. 12 months C. 8 days D. 12 years
72. During the temptation of Jesus the devil told him to jump from the highest point of the temple but He answered ____
A. "Man shall not live by bread alone."
B. "Do not put the Lord your God to test."
C. "god will give orders to His angels about you."
D. "Worship the Lord your God and serve only Him."
73. What lesson do we learn from the parable of the yeast?
A. Value of the kingdom of God
B. Faithfulness in the kingdom of God
C. Preparation for Christ's return
D. Growth of the kingdom of God
74. Jesus changed water into wine in ____
A. Galilee B. Bethany
C. Carpenaum D. Bethlehem
75. Jesus cursed the fig tree. What teaching did Christians get from it?(Mathew 21:18-22)
A. forgiveness B. honesty
C. faith D. humility
76. Which one of the following events took place during the last supper?
A. Peter denied Jesus
B. Jesus sweat was like drops of blood
C. Judas betrayed Jesus
D. Jesus shared bread with His disciples
77. The man who requested pilate to allow him to bury the body of Jesus in his own tomb was ____ (Mathew 27: 59-60).
A. Joseph of Arimathea B. Simion of Cyrene
C. Nathaniel D. Phillip
78. Jesus stayed with His disciples for 40 days after resurrection and departed to heaven at the place called ____
A. Bethlehem B. Bethany
C. Galilee D. Nazareth
79. These are the activities that took place on the day of Pentecost.
(i) All the believers were gathered together in one place
(ii) The believers were filled with the Holy Spirit
(iii) A strong wind filled the whole house
(iv) Tongues of fire touched each other
Arrange them in the correct sequence
A. (i), (ii), (iv), (iii) B. (i), (iv), (iii), (ii)
C. (iv), (i), (iii), (ii) D. (ii), (iii), (i), (iv)
80. The reason why Saul was going to Damascus when Jesus appeared to him was to ____
A. preach the gospel B. send alms to the poor
C. visit Christians D. persecute Christians
81. The criteria used by the early believers when sharing their possessions was ____
A. the rich fed the poor
B. according to Peter's instructions
C. the poor were left to feed themselves
D. each one was given according to his/her needs
82. Which one of the following ways of worship is common to both traditional African society. Which one is not?
A. Reading scriptures B. Making sacrifices
C. Reciting prayers D. Baptising believers
83. The following concepts of God used in traditional African society. Which one is not?
A. Moulder B. True vine
C. Provider D. Supporter
84. Christians understanding on continuity of life includes the following beliefs apart from ____
A. Pouring libation B. Getting baptized
C. Being born again D. forgiveness of sins
85. Your deskmate does not want you to use her book during a C.R. E lesson. As a Christian, what action would you take?
A. Avoid talking to her
B. Steal the book and hide it
C. Grab the book from her and use it
D. Teach her about sharing
86. Your neighbour, Seth, is twelve years old and his parents have not been able to take him to school because they lack school fees. Seth can neither read nor write. The best thing you can do to help him is ____
A. force the headteacher to admit him
B. talk to your teacher to try and help Seth
C. keep away from him because he is illiterate
D. get him a pencil and a piece of paper and tell him to write his name
87. You have noticed your classmates have joined a group of boys who chew khat during their free time. As a Christian the best thing for you to do is ____
A. stay away from him because he might influence you
B. report him to the classteacher and his parents
C. advise him that chewing khat is harmful to the body
D. advise him to stop relating with the group and tell him to keep quiet about it
88. After completing his assignment, Koni found out that he had a lot of time left before he could visit the museum. The best thing for him to do was ____
A. assist his friend in his weak subject
B. go back to the hostel and sleep
C. play in the field alone
D. talk to his desk mate who was still doing his assignment
89. Your friend was told by her uncle to have sex with him and she refused. Later, she reported the case to her mother. The skill your friend has displayed is ____
A. goal setting B. creative thinking
C. assertiveness D. listening
90. The advice you would give to your playmates so that they can remain HIV and AIDS negative is ____
A. take medicine B. abstain
C. use condom D. be injected