
COUNTY MOCK EXAMS-STD 8 2016

SOCIAL STUDIES AND C.R.E PAPER

Coordinated by KENPRO,
Macjo Arcade, 4th Floor, Suite 15E,
Off Magadi Road, Ongata Rongai |Tel: +254202319748 |
E-mail:infosnkenya@gmail.com | Website:www.schoolsnetkenya.com

MAKUENI COUNTY MOCK EXAMS

STANDARD EIGHT - YEAR 2016

SOCIAL STUDIES & C.R.E

Time : 2 Hours 15 mins

READ THESE INSTRUCTIONS CAREFULLY

1. You have been given this question booklet and a separate answer sheet. The question booklet contains 50 questions
2. Do any necessary rough work in this booklet
3. When you have chosen your answer, mark it on the ANSWER SHEET, not in this question booklet

HOW TO USE THE ANSWER SHEET

4. Use only an ordinary pencil
5. Make sure that you have written on the answer sheet:
YOUR INDEX NUMBER
YOUR NAME
NAME OF YOUR SCHOOL
6. By drawing a dark line inside the correct numbered boxes mark your full Index Number (i.e. School Code Number and the three figure Candidate's Number) in the grid near the top of the answer sheet.
7. Do not make any marks outside the boxes
8. Keep the sheet as clean as possible and do not fold it.
9. For each of the questions 1-50 four answers are given. The answers are lettered A, B, C, D. In each case only one of the answers is correct. Choose the correct answer.
10. On the answer sheet the correct answer is to be shown by drawing a dark line inside the box in which the letter you have chosen is written

Example

In the question Booklet

44. Which one of the following weather instruments does not measure wind?//
- A. Anemometer
 - B. Windsock
 - C. Windvane
 - D. Thermometer

The correct answer is D

On the answer sheet:

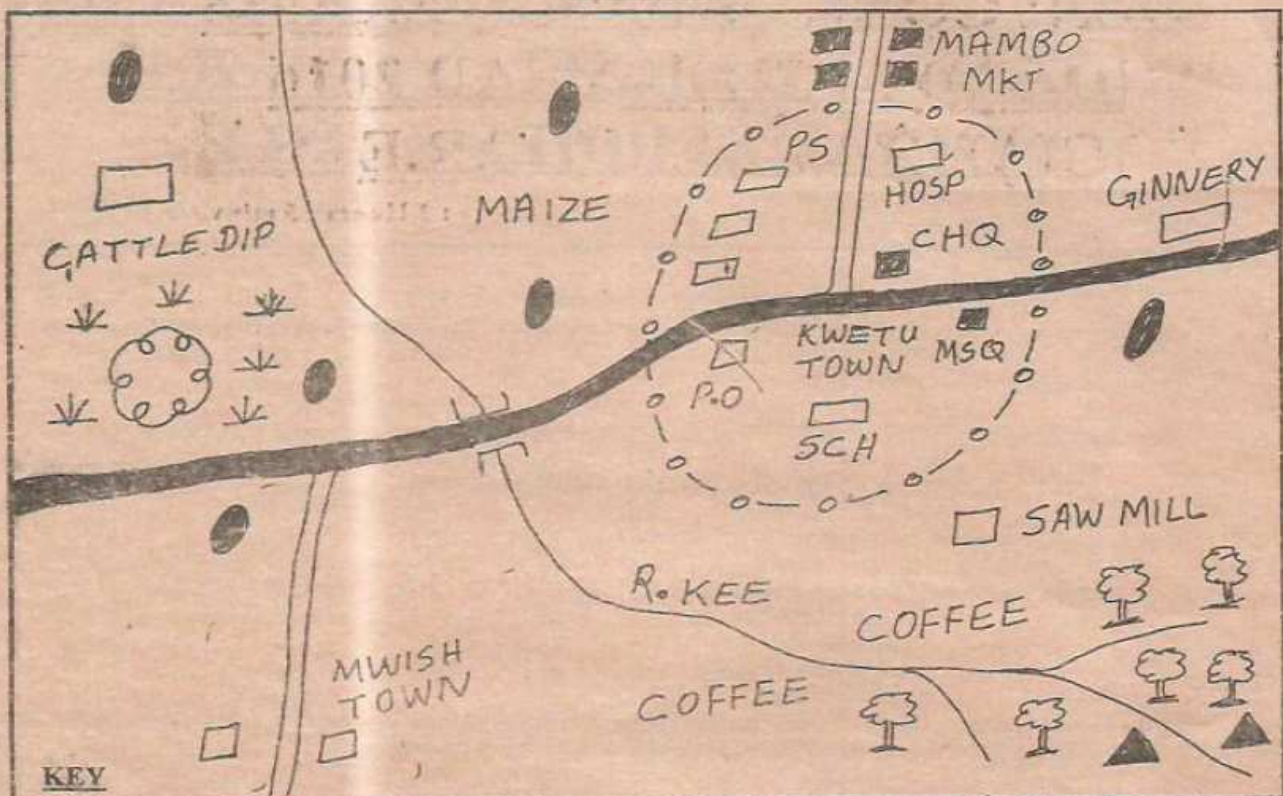
44. [A] [B] [C] [D] 45. [A] [B] [C] [D] 46. [A] [B] [C] [D] 47 [A] [B] [C] [D]

11. Your dark line MUST be within the box
12. For each question ONLY ONE box is to be marked in each set of four boxes

This question paper comprise of 6 printed pages

Candidates should check the question paper to ensure that all the pages are printed and no questions are missing.

KEE AREA



KEY

Murram road	Tarmac Road	Town boundary	Permanent buildings
Houses	Hill	Quarry	Scrub
PS Police Station	MSQ Mosque	SCH School	P.O Post office
CHQ County headquarters	Bridge		

0 1 2 3 4 5 6 7 8 9 10 11 KM

Use the map of KEE area to answer questions 1-7

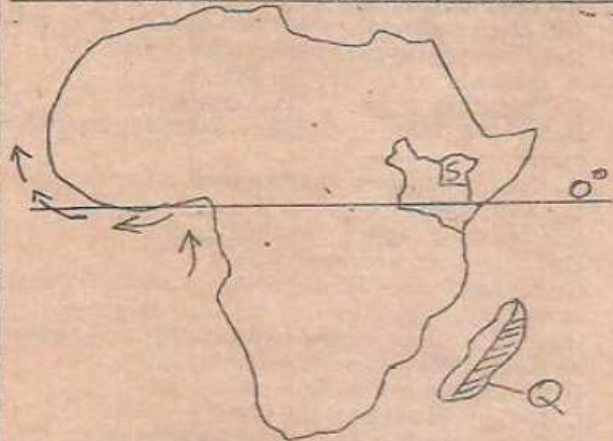
- The land in KEE area slopes
 - North west to South West
 - South West to West
 - North East to South West
 - South East to North West
- The approximate length of the tarmac road in the map is
 - 9 km
 - 15 km
 - 10 km
 - 13 km
- The climate of the area around the quarry is
 - Cool and wet
 - Hot and dry
 - Hot and wet
 - Cool and dry
- Which service is Not offered in Kwetu town?
 - Religious service
 - Education
 - Recreation
 - Health
- The main economic activity carried out in KEE area is
 - lumbering
 - Fishing
 - Mining
 - farming
- The settlement pattern in the map is
 - Scattered
 - Nucleated
 - Linear
- According to the religion shown on the map the people worship on
 - Saturday
 - Friday
 - Sunday
 - Thursday
- Which one of the following Eastern African communities is matched correctly with its place of origin
 - Kipsigis -Mt. Elgon
 - Acholi - Horn Africa
 - Ngoni - Shungwaya
 - Butji - Congo
- Which one of the following is Not an effect of revolution of the earth?
 - Causes season
 - Causes change in the position of the midday
 - Cause difference in time at different longitudes
 - Causes equinoxes and solstices
- The following statements are true about creation theory Which one is not?
 - Human were created by a supreme being
 - God created Adam and Eve
 - Human beings have a common ancestor

MKN/MOCK/SSK/23

- D. They gradually changed from simple forms to complex forms
11. The following are lakes formed through down warping except
 - A. L. Bangwerulu
 - B. L. Eyasi
 - C. L. Kyonga
 - D. L. Chad
 12. Which one of the following is false about bush following?
 - A. Land was cultivated until soil lost fertility
 - B. Land was left idle to regain fertility
 - C. The farmer would go back to the former land after the soil regained its fertility
 - D. The farmer never went back to the former land
 13. The following are ways of resolving disagreements in school except:-
 - A. apologising
 - B. fighting
 - C. involving another person
 - D. finding out the cause of the disagreement
 14. The school routine is important because
 - A. it ensures that planned activities run systematically
 - B. it forces the school community to follow the programme
 - C. The head teachers' work is reduced
 - D. The teachers's on duty follow the programme
 15. The decline of the Kingdom of Old Ghana was mainly caused by
 - A. The decline in trade led to shortage of finance in the Kingdom
 - B. The neighbouring communities united against
 - C. There was drought in the land
 - D. The king became too old to lead the army
 16. Which one of the following is Not a reason why the missionaries came to Africa?
 - A. To stop trade
 - B. Control the spread of Islam religion
 - C. To look for goods
 - D. To civilize Africans
 17. Which one of the following is Not a method preserving fish?
 - A. Salting and drying
 - B. Freezing and canning
 - C. Frying and boiling
 - D. Smoking and salting
 18. Which one of the expresses the position of Eastern African correctly?
 - A. 34°E, 42°E and 5°N, 5°S
 - B. 18°W, 52°E and 37°N, 35°S
 - C. 22°W, 51°E and 12°N, 23°S
 - D. 22°E, 51°E and 23°N, 12°S
 19. The following are descriptions of a town in Eastern Africa
 - (i) It is a transport centre
 - (ii) It is a copper smelting centre
 - (iii) It has an electric power station
 The town described above is
 - A. Kampala
 - B. Jinja
 - C. Addis Ababa
 - D. Dar-es-salaam
 20. Three of the following describe the importance of good citizenship. Which one does not?
 - A. Promoting peace, love and unity

- B. Showing respect to those in authority
 - C. Promotion of national insecurity
 - D. Promotion and national development
21. The following shows importance of democracy among pupils in a school except
 - A. Respecting one another's idea during debate
 - B. Participating in the making of class roles
 - C. Making decisions on which game or club to join
 - D. Choosing class prefects from their religious only

Use the diagram below to answer questions 22- 25



22. The vegetation of the shaded area marked consist of
 - A. Large trees with broad ever green leaves
 - B. Few scattered acacia and baobab trees
 - C. Elephant grass about three metres tall
 - D. Trees air widely spaced and of medium height
23. Which country is not crossed by the line name 0°
 - A. Equatorial Guinea
 - B. Uganda
 - C. Gabon
 - D. Congo
24. The area marked 'S.' has low population mainly because
 - A. its covered by swamp vegetation
 - B. receives low rainfall
 - C. its frequent invented by pest
 - D. its occupied by wild animals
25. The ocean currents named 'Z' are
 - A. Mozambique warm currents
 - B. Guinea warm currents
 - C. Benguela cold ocean currents
 - D. Guinea cold currents
26. Which one of the following is the odd one out?
 - A. Boer
 - B. Dutch
 - C. Afrikanas
 - D. Africans
27. Three of the following statements are true about Nelson Mandela and Leopard Sengor. Which one is NOT?
 - A. They formed parties that worn their countrie independence
 - B. They used militaty to overthrow colonial governments
 - C. They became presidents of their countries after independence
 - D. They brought alot of development in their countries

MKN/MOCK/SS/22

28. Below are ways of managing population growth in any one country. Which one is Not?
 A. Creating awareness through the massmedia on importance of family planning
 B. Promoting food production through agricultural policies
 C. Discouraging polygamy and early marriages
 D. Improved medical facilities to raise life expectancy
29. Which crop requires the following conditions to grow?
 (i) Heavy rainfall
 (ii) Deep, fertile and well-drained soils
 (iii) High temperatures of between 21 °C to 26 °C
 (iv) Props to support plants with fruit
 A. Bananas B. Maize
 C. Sugarcane D. Coffee
30. Below are rights in marriage except one. Which one?
 A. Getting basic needs from each other
 B. Ownership of personal property
 C. Protecting the wife and children
 D. To be loved and be cared for
31. On his way from school, Mutua a standard six pupil saw a stranger stealing from a neighbouring shamba. As a responsible citizen, Mutua should:
 A. Keep quiet about the matter
 B. Inform the owner of the shamba
 C. Call people to beat the thief
 D. Report the matter to the class teacher
32. Arrange the following political association from the first to the last
 A. KTWA, KCA, EAA, YKA
 B. YKA, EAA, KTWA, KCA
 C. EAA, YKA, KTWA, KCA
 D. KCA, KTWA, EAA, YKA
33. Which of the following is not true about the British in Kenya?
 A. They used direct rule in Kenya
 B. The appointed chiefs and recruited African labour in European farms
 C. There was a resident governor in the country
 D. Africans were fairly represented in the legco
34. Which one of the following was not a reason for the collaboration of Kabaka Mutesa I of Buganda with the British?
 A. To stop the Egyptians invasion of this kingdom
 B. To be assisted in weakening the Muslim influence
 C. To stop the expansion of the Bunyoro kingdom
 D. To protect the mineral wealth in his kingdom
35. Which of the following is not a traditional industry?
 A. Wood carving
 B. Leather working
 C. Car manufacturing
 D. Iron working
36. Who among the following is not a member of County Executive Committee?
 A. County governor
 B. Deputy governor
 C. Executive county members
 D. Speaker

37. Which one of the following is not symbol of national unity?
 A. The coat of arms
 B. The presidency
 C. The national anthem
 D. The national flag
38. Which one of the following methods of poultry keeping involves keeping of birds in small cages?
 A. Battery system
 B. Deep litter system
 C. Free range system
 D. Fold system

Use the diagram below to answer questions 39-40

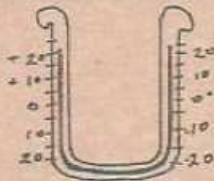


39. In which of the following town in Kenya would you LEAST expect to find the type of rainfall shown in the diagram?
 A. Embu B. Nyeri
 C. Kisumu D. Nyahururu
40. The main human economic activity on the side marked B is _____
 A. lumbering B. pastoralism
 C. Cash crop farming D. mining
41. Which one of the following is not a form of child abuse?
 A. Touching a child's breast
 B. Subject a child to bodily harm
 C. Taking a child to school
 D. Isolating a child
42. What is the difference in hours between a town A 30°W and town B 30° E, when the time is 9.00 am at the prime meridian?
 A. 4 hrs B. 2 hrs
 C. 11 hrs D. 7 hrs
43. Below are some uses of minerals
 i) Filtering of water
 ii) Making of heat insulators
 iii) Making of glass
 iv) Manufacturing of cement
 v) Manufacturing of paints
 Which one of the following combinations of uses listed above is for diatomite
 A. (ii), (iii), (iv)
 B. (i), (ii), (iii)
 C. (iii), (iv), (v)
 D. (i), (ii), (v)
44. Which one of the following is not a business opportunities in Kenya?
 A. Trading B. Fishing
 C. Transport D. Poaching
45. The most popular tourist attraction in Egypt is
 A. Favourable climate
 B. The pyramids

MKN/MOCK/SSRE

C. Different types of wildlife
D. Archaeological sites

46. The instrument below is used to measure



A. Minimum and maximum atmospheric pressure
B. Minimum, and maximum humidity
C. Minimum and maximum temperatures
D. Minimum and maximum speed of wind

47. The road sign below belongs to what category of road signs



A. warning
B. regulatory
C. information
D. secret warning

48. Which of the following countries is not a member of IGAD?

A. Kenya
B. Djibouti
C. Rwanda
D. Ethiopia

49. The main problem facing road transport in Africa is

A. lack of enough capital to build new forms of transport
B. poor management of some forms of transport
C. civil war have slowed down development of forms of transport
D. areas with steep slopes makes it difficult

50. Which one of the following is not true about early immigrants in Kenya?

A. They came as Missionaries
B. They came as colonizers
C. They came as traders
D. They came as scholars

51. The MAIN reason why Perkerra irrigation scheme was established was to

A. increase food production
B. control flood along river Perkerra
C. create employment
D. settle landless people

52. Which one of the following is not a member of national defence?

A. Kenya army
B. Security guards
C. Kenya navy
D. Kenya police

53. The philosophy of African socialism was adopted in

A. 1963
B. 1967
C. 1965
D. 1978

54. Three of the following are factors that promote peace in a society except

A. nepotism
B. obeying laws
C. transparency
D. respect of one another

55. Which one of the following is not a similarity of the Kenyan government and the present systems of government in Swaziland?

A. Cabinet members are appointed by the senior leaders

B. In both counties, the political heads are elected

C. They both have two parliaments

D. Their political heads of states and commanders-in-chief of the armed forces

56. Forests in Kenya are protected mainly because

A. are sources of medicine
B. are sources of timber
C. make the scenery beautiful
D. conserve water sources

57. The body in charge of election in Kenya performs all the following functions except

A. registering voters
B. announcing election results
C. campaigning the candidates
D. creating new constituencies

58. Who among the following is Not a member of the senate in Kenya?

A. The speaker
B. All elected senators in every county
C. 16 women representatives
D. The president

59. In Kenya cases concerning citizens under 18 years are dealt with in one of the following courts. Which one?

A. Court martial
B. Juvenile court
C. Kadhi court
D. Magistrate court

60. The main reason why the government of Kenya conducts census is to

A. Determine rate of death
B. Identify the working people in the country
C. Enable the government to plan for its citizens
D. Determine illiteracy level in the country

C.R.E

61. The main reason why God created Adam and Eve was to:-

A. multiply and fill the earth
B. take care of God's creation
C. disobey God
D. name all animal

62. The father of Rebecca wife to Isaac, was

A. Jacob
B. Issac
C. Abraham
D. Bethuel

63. Who among the following accompanied Moses the mountain to receive the Ten Commandments?

A. Aaron
B. Joshua
C. Caleb
D. Jethro

64. When Moses went on Mt. Sinai God revealed himself through

A. Fire and smoke
B. Cloud and fire
C. Thunder and lightening
D. Wind and rainfall

65. Which one of the following teaches Christians to be satisfied with their own property?

A. Do not accuse anyone falsely
B. Do not commit adultery
C. Keep the Sabbath day Holy
D. Do not desire your neighbours property

66. Who among the following kings of Israel solved a case of two women arguing over a dead child?

MKN/MOCK/SSRE

- A. Ahab B. Saul
C. Solomon D. David
67. God rejected King _____ for consulting a medium
A. Saul B. David
C. Ahab D. Solomon
68. Who among the following prophesied that Jesus would be borne by a virgin?
A. Isaiah B. Micah
C. Jeremiah D. Hosea
69. What lesson do Christian learn from the Mt. Carmel contest?
A. Baal was asleep
B. God answers prayers
C. God is there in one
D. Baal was a coward
70. "The child is chosen by God for the destruction and the salvation of many in Israel. He would be a sign from God which many will speak against". At what occasion were the above words quoted?
A. During transfiguration
B. During last supper
C. During baptism
D. During dedication
71. The main lesson that Christians learn from the parable of the ten virgins is _____
A. they should buy enough fuel
B. they should be punctual
C. they should help the needy
D. they should be ready always
72. The word "ephphatha" as used by Jesus according to mark 7: 34 means _____
A. speak up B. open up
C. get up D. walk away
73. Three of the following are found in the Apostles creed EXCEPT _____
A. I believe in God the father
B. he shall come to judge the living and dead
C. he ascended into hell
D. the forgiveness of sin
74. Who among the following followers of Jesus was a doctor before his call?
A. Luke B. John
C. Nathaniel D. Judas
75. Three of the following are teachings of Jesus on the mountain EXCEPT _____
A. the spiritually poor the kingdom of heaven belongs to them
B. the pure in heart God will call them his children
C. the persecuted the Kingdom of heaven belongs to them
D. those who mourn God will comfort them
76. Who requested for the body of Jesus for burial?
A. Simon of Cyrene
B. Nicodemus
C. Joseph of Arimathea
D. Peter and Mary Magdalene
77. The following are helpers chosen by the apostles apart from _____
A. Phillip B. Prochorus
C. Nicholas D. Mathias
78. Peter and John healed _____ in the beautiful gate. The man was _____
A. blind B. lame
C. deaf and dumb D. Joel
79. When the Ethiopian Eunuch met Philip, he was reading from the scroll of?
A. Hosea B. Micah
C. Isaiah D. Joel
80. "Those who do not work should not eat" these words were said by _____
A. Paul B. James
C. Timothy D. Peter
81. According to African traditional society expectant mothers were given special treatment because _____
A. they were considered lazy
B. they were considered sick
C. they were considered Holy
D. life was sacred
82. A common practice between Christian and African traditional society is _____
A. wearing charms
B. pouring libation
C. mentioning ancestors in prayer
D. worshipping a supreme being
83. Which rite of passage in A.T.R showed that one had moved from childhood to adulthood?
A. Baptism B. Marriage
C. Naming D. Initiation
84. In A.T.S it was the duty of priests to _____
A. conduct circumcision
B. offer sacrifice
C. predict the future
D. blessing warriors before war
85. The BEST way Christians should spent their leisure time is by _____
A. watching a movie
B. reading the bible
C. singing in church choir
D. visiting the sick
86. the main reason why Christians condemn drug abuse is _____
A. they are expensive
B. its a waste of money
C. leads to poor health
D. drugs are illegal
87. Kameno discovers that her class mate Werevu is HIV positive. The best action for her to take is _____
A. tell her friends about it
B. keep away from her
C. advise her to seek medication
D. tell her friend to drop out of school
88. Your friend Charity advises you to sneak away from school. The best action you should take is _____
A. announce to the class
B. accompany her
C. report to your parents
D. tell her friend
89. Mutus's mother requested him to clean the house. He says that its tiresome and makes him dirty. As a Christian the best advice to him is _____
A. understands such word is good
B. ask his mother to employ a house help
C. tell his aunt to talk to his mother
D. move out of home
90. Which one of the following organizations take care of refugees in Kenya?
A. UNHCR B. NCKK
C. UNICEF D. AMREF

MKN/MOCKSSRE