

---

# **COUNTY MOCK EXAMS-STD 8 2016**

## **SOCIAL STUDIES AND C.R.E PAPER**

Coordinated by KENPRO,  
Macjo Arcade, 4th Floor, Suite 15E,  
Off Magadi Road, Ongata Rongai |Tel: +254202319748 |  
E-mail:infosnkenya@gmail.com | Website:[www.schoolsnetkenya.com](http://www.schoolsnetkenya.com)

**BARINGO COUNTY**  
**KOIBATEK -MOCK EXAMS**  
**STANDARD . 8 - 2016**  
**SOCIAL STUDIES & CRE**

Time: 2 hr 15 mins

READ THESE INSTRUCTIONS CAREFULLY

1. You have been given this question booklet and a separate answer sheet. The question booklet contains 90 questions.
2. Do any necessary rough work in this booklet.
3. When you have chosen your answer, mark it on the ANSWER SHEET, not in this question booklet.

**HOW TO USE THE ANSWER SHEET**

4. Use only an ordinary pencil.
5. Make sure that you have written on the answer sheet.

YOUR INDEX NUMBER  
YOUR NAME  
NAME OF YOUR SCHOOL

6. By drawing a line on the correct numbered ellipses (small oval shapes) mark your full Index Number (i.e School Code Number and three-figure Candidate's Number) in the grid near the top of the answer sheet.
7. Do not make any marks outside the ellipses.
8. Keep the sheet as clean as possible and do not fold it.
9. For each of the questions 1 - 90 four answers are given. The answers are lettered A, B, C, D. In each case only ONE of the four answers is correct. Choose the correct answer.
10. On the answer sheet show the correct answer by drawing a line on the ellipse in which the letter you have chosen is written.

**Example**

21. The following are fold mountains. Which one is NOT?

- A. Cape ranges
- B. rain gauge
- C. Abaggar mountains
- D. Drankensburg mountains

The correct answer is A (Cape ranges )

On the answer sheet:

21.  A  B  C  D

22.  A  B  C  D

23.  A  B  C  D

24.  A  B  C  D

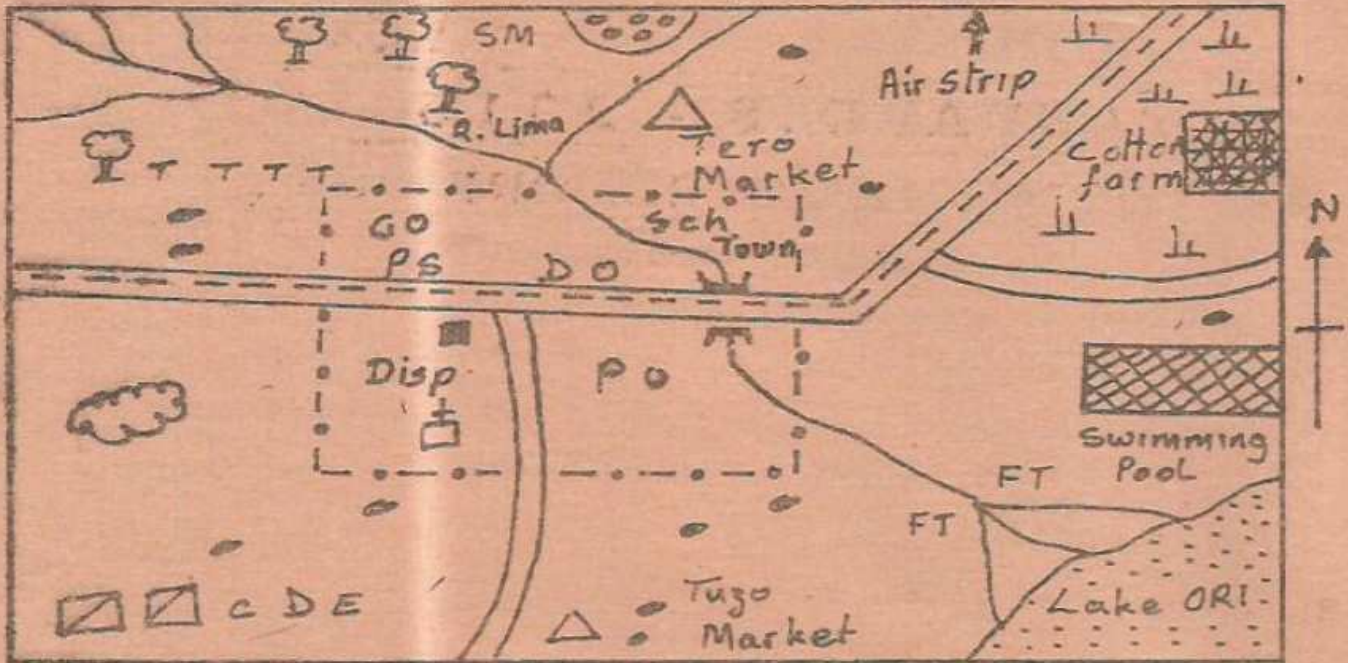
In the first set, a line is drawn within the letter A

11. Your dark line MUST be within the letter.
12. For each question, ONLY ONE ellipse is to be drawn a line in each set of four ellipses.


TURN OVER



Study the map of LIMA AREA and answer questions 1-7



SCALE:



KEY

	Tarmac road	GO	Governor's office	FT	Fish trap
	Bridge	Disp	Dispensary		County director of Education office
	Cotton farm		Exhausted Quarry		Sub county boundary
Sch	School	TTTT	Tea plantation		Forest
D.O	District officer		Chapel	PS	Police station
	Birds sanctuary		River	SM	Saw mill
	Murrum road		Scrub plantation		
	Houses	P.O	Post office		

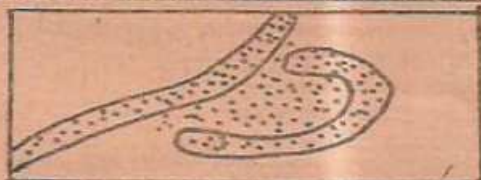
- What is the general rise of land in Lima area?  
A. South East to North  
B. North West to South East  
C. South East to North West  
D. North to South East
- The approximate length of murrum roads in Lima area is likely to be?  
A. 18km B. 8km C. 15km D. 11km
- The climate to the North East of Lima area can be described as  
A. hot and dry B. cool and wet  
C. hot and wet D. cool and dry
- People of Lima area earn their living through the following ways except one. Which one?  
A. Tourism B. Mining C. Fishing D. Lumbering
- The distribution of settlement pattern in Lima area above is likely to be  
A. dispersed B. nucleated C. even D. linear
- According to the information on the map what evidence shows that election process takes place in Lima area?  
A. Presence of district officer  
B. Presence of county director of education officer  
C. Presence of police station  
D. Presence of a governor
- Which one of the following social services is NOT available in Lima town?  
A. Administrative services B. Educational services  
C. Recreational services D. Medication services
- Which one of the following traditional forms of education emphasized values like hard work, patience and honesty?  
A. Ceremonies B. Story-telling  
C. Observation and imitation D. Apprenticeship-skills
- Which one of the following is the main reason why the



chiefs among the Khoikhoi community did not have all the powers to make any decision affecting the community. It was because

- A. The nomadic life they led
  - B. The decisions were reached through chieftaincy
  - C. The community had hereditary kings
  - D. They had a government by consensus
10. Three of the following are benefits of interaction among African communities EXCEPT
- A. Creates misunderstanding which bring disunity at local level
  - B. Promotes trust among people
  - C. Promotes spiritual growth through religious activities
  - D. Facilities new ideas and skills
11. Which one of the following communities belong to the same language group in Eastern Africa?
- A. Datoga, Gogo and Jie
  - B. Falasha, Burji and Tutsi
  - C. Tutsi, Mbugu and Afar
  - D. Sebei, Amharas and Pokot

Study the diagram below and answer question 12

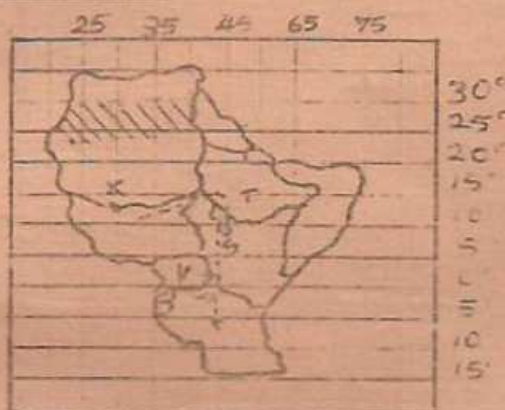


12. Which one of the following lakes is an example of a lake formed as a result of the above diagram but is found on the Nile Delta?
- A. Lake Utange
  - B. Lake Manzala
  - C. Lake Shala
  - D. Lake Iyvos
13. Cultural artefacts were preserved in traditional communities mainly because
- A. there were no written documents
  - B. they were symbols of authority
  - C. some were used for food storage
  - D. to help future generations learn about the past
14. Which one of the following best explains why the population of Kenya has been on the rise?
- A. Improved medical care
  - B. Introduction of family planning methods
  - C. Rising cost of living
  - D. Higher education levels
15. Samouri Toure resisted the French for the following reasons EXCEPT
- A. To maintain independence of his empire
  - B. He wanted to control slave trade
  - C. He wanted to prevent the spread of Christianity
  - D. The French interfered with coastal trade
16. Which one of the following traditional methods of weather observation would mean that a prolonged dry period is about to start?
- A. Presence of dew in the morning
  - B. Smell of moist soils
  - C. Movement of large swarms of locusts
  - D. Sudden rise in temperature
17. Shifting cultivation was easily practised by farmers mainly because

- A. There is plenty of land
- B. Neighbours produced same type of crops
- C. Simple tools were used
- D. Farmers practised crop rotation and not plot rotation

18. The following are tourist destinations found in Africa. Which country is CORRECTLY matched with its sites only?
- A. Morocco - Kruger park, sandy beaches
  - B. Egypt - pyramids of Giza, library of Alexandria
  - C. Zimbabwe - Victoria falls, Roben Islands
  - D. South Africa - Table mountains, Hwango park
19. For one to be assimilated according to the assimilation policy of administration, the following requirements were to be fulfilled. Which one was NOT?
- A. Practice Christianity
  - B. Practice monogamy
  - C. Serve in the French army
  - D. Speak and write both English and Kiswahili
20. Pupils have the following important roles to perform in school management EXCEPT
- A. Promoting good relations in school
  - B. Being keen on their studies
  - C. Appointing school prefects
  - D. Respecting school rules
21. The following are descriptions of a certain way of resolving conflicts in the society
- (i) the third party is a commission or international body
  - (ii) investigations are conducted to get facts of the disputes
  - (iii) the third party tries to bring the two parties to talk by making them less angry or calm
- The above description suits which method of resolving conflicts?
- A. Arbitration
  - B. Conciliation
  - C. Mediation
  - D. Litigation
22. The following are persons with special needs in the society. Who is NOT?
- A. HIV/AIDS patient
  - B. The elderly people
  - C. The street children
  - D. The poor people

Study the map of Eastern African and answer questions 23-26



23. Which of the following communities followed the route marked S?
- A. Datoga
  - B. The Hesa
  - C. Huma
  - D. Dahalo







24. Which one of the following climatic regions is shaded in the map above?  
 A. Desert B. Tropical  
 C. Semi-desert D. Desert and semi-desert
25. Which one of the following statements is true about the crop marked V on the map?  
 A. Is mainly grown on large scale farms  
 B. Does well in a well drained alluvial soils  
 C. Are mainly grown for their fibres  
 D. Is a staple food for Kenyan people
26. The position of the town marked X on the map is  
 A. 30°E and 12°N B. 12°S and 35°E  
 C. 26°E and 12°E D. 12°N and 30°E
27. The characteristics below describe types of climates in Africa:  
 (i) Rainfall is between 900mm and 1150mm  
 (ii) Rainfall falls in summer  
 (iii) Annual rainfall varies from 500mm to 1750mm  
 (iv) Both convectional and relief rainfall are received  
 (v) Rainfall is received all year round  
 Which one of the above statements describes the characteristics of humid sub-tropical climate only?  
 A. i, ii, iv B. i, ii, iii C. iii, iv, v D. ii, iii, v
28. Below are statements about an early visitor to Eastern Africa.  
 (i) named Lake Victoria  
 (ii) was the first to travel into the interior of Eastern Africa  
 (iii) discovered the source of river Nile  
 The above described explorer is likely to be:-  
 A. Vasco da Gama B. John Speke  
 C. Richard Burton D. Henry Morton Stanley
29. Which of the following factors below will undermine peace in a society?  
 A. games and sports B. Tolerance  
 C. Religious differences D. Transparency
30. Which one of the following methods of forest conservation would best work in areas where farming land is scarce?  
 A. Afforestation B. Reafforestation  
 C. Fire prevention D. Agroforestry
31. Which one of the following is an example of social and cultural rights?  
 A. Right to life  
 B. Freedom of worship  
 C. Right to support a political party  
 D. Right to own property
32. The best method of mining sand found on hill sides is  
 A. adit method B. scooping method  
 C. open cast method D. shaft mining
33. Which one of the following problems faced river Tana projects during its development?  
 A. Siltation of the dam  
 B. Reduction of water-down stream  
 C. Spread of diseases  
 D. Lack of adequate funds
34. A certain town has the following characteristics  
 (i) located on an island  
 (ii) its early development was due to deep well sheltered harbour  
 (iii) it was well protected from attacks by outsiders  
 (iv) has a main entry port  
 The above descriptions are for \_\_\_\_\_ town.  
 A. Nairobi B. Dar-es Salaam  
 C. Mombasa D. Kisumu
35. The following are characteristics of type of vegetation zone in Africa:  
 (i) aromatic shrubs are dominant  
 (ii) trees are cone-shaped  
 (iii) esparto grass is very common  
 The vegetation is likely to be \_\_\_\_\_  
 A. Tropical grassland B. Mediterranean  
 C. Tropical rainforests D. Temperate grassland
36. Which European masters partitioned Angola and Namibia respectively in the 19th Century?  
 A. Germans and Portugal B. French and British  
 C. Italy and Spain D. Portugal and Germans
37. During the struggle for Independence in Zimbabwe several political parties were used. Which one was NOT used?  
 A. United Gold Coast Convention (UGCC)  
 B. African National Congress (ANC)  
 C. Zimbabwe African National Union (ZANU)  
 D. Zimbabwe African Peoples UNION (ZAPU)
38. Which group consists of tertiary industries only?  
 A. Maize milling, printing  
 B. Banking, steel rolling  
 C. Hair dressing, shoe repair  
 D. Vehicle repair, shoe making
39. Horticultural farming in Kenya has the following features except:-  
 A. plots are intensively cultivated  
 B. use of high quality seeds  
 C. farmers use pesticides regularly  
 D. it is mainly done on large scale
40. Which one of the following forms of communication can be used to send the same written message to many people at the same time?  
 A. Telefax B. Email  
 C. Courier services D. Postal services
41. One of the following combinations consist of members of Southern Africa Development community (SADC). Which one?  
 A. Lesotho and Zambia B. Burundi and Madagascar  
 C. Mauritius and Benin D. Cape Verde and Liberia
42. The number of girls attending school in Northern Kenya is less than boys mainly because of \_\_\_\_\_  
 A. poverty  
 B. Interference by political leaders  
 C. Outdated cultural practices  
 D. Harsh climatic conditions
43. What is the time at Addis Ababa 32°E, when time at Abyei 180E is 8.20 a.m?  
 A. 7.34 a.m B. 9.16 a.m C. 7.34 p.m D. 9.16 p.m
44. Consequently, the African leaders transformed organization of African Unity (OAU) into the African union (AU) with the hope of effectively \_\_\_\_\_  
 A. helping African countries to attain independence from colonialism  
 B. promoting co-operation among African states  
 C. protecting the independence of member states  
 D. addressing the new challenges facing African states

BARRINGO - MOCK 2016



45. The following statements are description of a certain crop in Africa:  
 (i) serve as a raw material in soap and medicine industries  
 (ii) are grown mainly in tropical climate  
 (iii) do well in high humidity  
 (iv) to day are grown on small scale farms  
 The type of crop described above is \_\_\_\_\_  
 A. cloves B. cocoa C. pyrethrum D. wheat
46. Which one of the following road signs is correctly matched with what it means?

Road sign	Meaning
A. 	U - turn
B. 	Danger ahead
C. 	Bumps ahead
D. 	Railway crossing

47. Which one of the following is the main reason for rural-rural migration?  
 A. Employment B. Settlement  
 C. Transfer D. Retirement
48. Below are descriptions of a pastoral community in Africa.  
 (i) they practised transhumance  
 (ii) they kept traditional cattle, sheep and goats  
 (iii) their movement was limited to avoid tsetse-flies  
 (iv) they scouted for new grazing land on horse backs  
 The community described above is \_\_\_\_\_  
 A. Fulani B. Tswana C. Maasai D. Pokot
49. One of the achievements of Gamal Abdel Nasser was that he  
 A. He represented his people in the french parliament  
 B. He united all races in his country  
 C. He retired voluntarily from active politics  
 D. He abolished sharia courts
50. One of the following statements is true about fishing in Kenya and Tanzania. Which one?  
 A. Fishermen have adequate modern fish processing facilities  
 B. Water weeds have improved quality of fish caught  
 C. High demand for fish has led to overfishing in some fishing grounds  
 D. Fishing is mainly carried out in the deep sea
51. African socialism promoted the following aspects EXCEPT  
 A. Regionalism B. Political democracy  
 C. Equality D. Respect of people rights
52. One similarity between the government of Swaziland and Kenya is  
 A. both countries hold general elections after every five years  
 B. both countries have many political parties  
 C. the king in Swaziland and president in Kenya appoint some members to the senate  
 D. The President in Kenya and king in Swaziland are commanders in-chief
53. Which type of democracy occurs where all individuals or organized groups of people are involved in making decisions on various issues that concern them?  
 A. Representative democracy  
 B. Participatory democracy  
 C. Indirect democracy  
 D. Delegative democracy
54. Who among the following personalities is NOT a member of Judiciary?  
 A. Chief registrar B. Magistrates  
 C. Attorney general D. Judges
55. Who among the following people belong to the same clan?  
 A. Otieno, his mother and his sister  
 B. Otieno, his sister and his father  
 C. Otieno, the drand mother and grandfather  
 D. Otieno, the wife and the father
56. Which one of the following is the main function of the legislature?  
 A. Interprets laws B. Making laws  
 C. Keeps the law D. Implement government policies
57. Three of the following are functions of the county governor. Which one is NOT?  
 A. Supervises the departments and government workers in the county  
 B. Is a link between the county government and national government  
 C. Appoints the members of county executive committee  
 D. Supervises the government workers in the nation
58. Citizenship is found in which chapter of the constitution of Kenya?  
 A. Chapter 4 B. Chapter 6  
 C. Chapter 3 D. Chapter 1
59. A sitting member of parliament may lose his or her parliamentary seat through the following ways, EXCEPT  
 A. Misuse of funds B. death  
 C. Insane D. Life imprisonment
60. Jennifer a girl aged seven years was found in an Airports. Her parents nationality were not known. How can Jennifer become a citizen of Kenya?  
 A. Registration B. Birth C. Adoption D. Dual  
**CRE**
61. God promised Adam \_\_\_\_\_  
 A. protection from enemies  
 B. everlasting kingdom  
 C. authority over all animals  
 D. many descendants like the stars
62. The presence of God during His covenant with Noah was  
 A. bow in the cloud B. flaming torch  
 C. fire D. earthquake and lightening
63. What Christian value do Christians learn from the incident where Abraham accepted to sacrifice Isaac?  
 A. Obedience B. Faith C. Honesty D. Courage
64. Who among the following Biblical personalities exercised the value of forgiveness and acceptance?  
 A. The prodigal son B. Herod  
 C. Samson D. Joseph
65. "On that night I will go through the land of Egypt, killing every first born male... (Exodus 12:12) These words referred to \_\_\_\_\_ occasion.



- A. passover  
B. crossing the Red sea  
C. receiving the ten commandments  
D. worshipping the golden calf
66. Who among the following kings of Israel is also referred to as the father of idolatry?  
A. Solomon B. Ahab C. Uzziah D. Rehoboam
67. Gideon was a great judge. Who succeeded by his son?  
A. Ehud B. Tola C. Abimelech D. Jephtha
68. He was a prophet in Israel, drank water from the Brook, was fed by ravens and prophesied about drought. Who was he?  
A. Hosea B. Elijah C. Elisha D. Jeremiah
69. Prophet Malachi talked about \_\_\_\_\_  
A. The ministry of John the Baptist  
B. The ministry of Jesus  
C. The annunciation of the birth of John the Baptist  
D. The suffering of Jesus
70. The reason to why Mary doubted Angel Gabriel's message was because \_\_\_\_\_  
A. she was blessed B. she was married to Joseph  
C. she was a virgin D. she was a still young
71. At the age of forty days, Jesus was taken to the temple for \_\_\_\_\_  
A. circumcision B. naming  
C. passover D. dedication
72. What Christian lesson do we learn from the behaviour of Jesus at twelve years in Jerusalem?  
A. Obedience B. Faith  
C. Perform miracles D. Always go to pray
73. What is spiritual poverty in Christianity?  
A. Lacking money and food B. Depending on God  
C. Being in need D. Suffering for God
74. By Jesus healing the Canaanite woman's daughter, who was possessed by evil spirits, we learn that \_\_\_\_\_  
A. He has power over nature  
B. He has power to forgive sins  
C. He's universal saviour  
D. He has power to perform miracles
75. Jesus asked the ten lepers to go and show themselves to a priest because \_\_\_\_\_  
A. He respected the law of Moses  
B. They doubted their healing  
C. The priests were against Jesus  
D. The lepers wanted to show off
76. Which one of the following Old Testament books is a Historical book?  
A. Exodus B. Joshua C. Lamentations D. Leviticus
77. What lesson do Christians learn from the death and resurrection of Jesus?  
A. Christians cannot die  
B. Believers will be crucified  
C. There is life after death for believers  
D. Righteous can die too
78. Christian churches mainly believe in Ecumenism because \_\_\_\_\_  
A. they all go to worship on Sundays  
B. they build churches together  
C. they collect funds from believers  
D. they share common faith
79. "Galileans why are you standing there looking up at the sky?" Acts 1:11. These words were said during \_\_\_\_\_  
A. coming of the Holy spirit  
B. ascension of Jesus in Bethany  
C. crucifixion of Jesus by Golgotha  
D. rejection of Jesus in Nazareth
80. The main work of Holy spirit is to \_\_\_\_\_  
A. convert all people to Christianity  
B. help believers to understand God's message  
C. strike and destroy all evil plans of our enemies  
D. help us acquire secular values in the society
81. Who among the following was a deacon in the Early Church?  
A. Mathias B. Apollo C. Parmenas D. Peter
82. Peter performed one of the following miracles. Which one?  
A. Healing the sick B. Walking on water  
C. Healing Cornelius D. Multiplied fish
83. According to African Traditional society Eternal life means \_\_\_\_\_  
A. believing in Christ  
B. life continues after death in form of Spirit  
C. the world began and will come to an end  
D. life begins after initiation
84. In African traditional communities, children were told stories mainly to \_\_\_\_\_  
A. entertain them  
B. help them bond with their grandparents  
C. occupy them during leisure time  
D. impart moral values
85. Which one of the following beliefs is practised in both Christianity and African traditional society?  
A. Female genital mutilation  
B. Existence of heaven and hell  
C. Appease the living dead through libation  
D. Marriage is sacred
86. Three of the following worship practices are common between the African tradition religion and Christianity EXCEPT:  
A. giving offerings B. offering sacrifices  
C. chanting prayers D. gathering in sacred places
87. Jane has friend who has started taking piriton tablets claiming that they help her to sleep well. As a Christian, what is the best advice to Jane's friend \_\_\_\_\_  
A. encourage her to continue  
B. report her to the parents  
C. tell her the effects of piriton  
D. join her in taking the piriton
88. My body is the temple of the Holy Spirit, how BEST can I take care of it?  
A. avoiding immoral activities  
B. keeping off bad company  
C. eating balanced diet  
D. doing physical exercises
89. It is a leisure activity that was practised by both boys and girls in African Traditional society. Which one?  
A. Wrestling B. Watching television  
C. Swimming D. Dancing
90. The early missionaries taught Africans how to read and write mainly to enable them \_\_\_\_\_  
A. get academic certificates  
B. read and understand the scriptures  
C. acquire vocational skills  
D. become good professionals