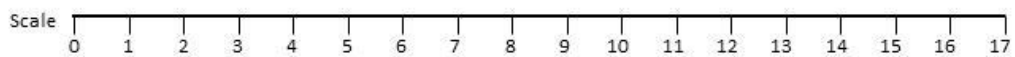
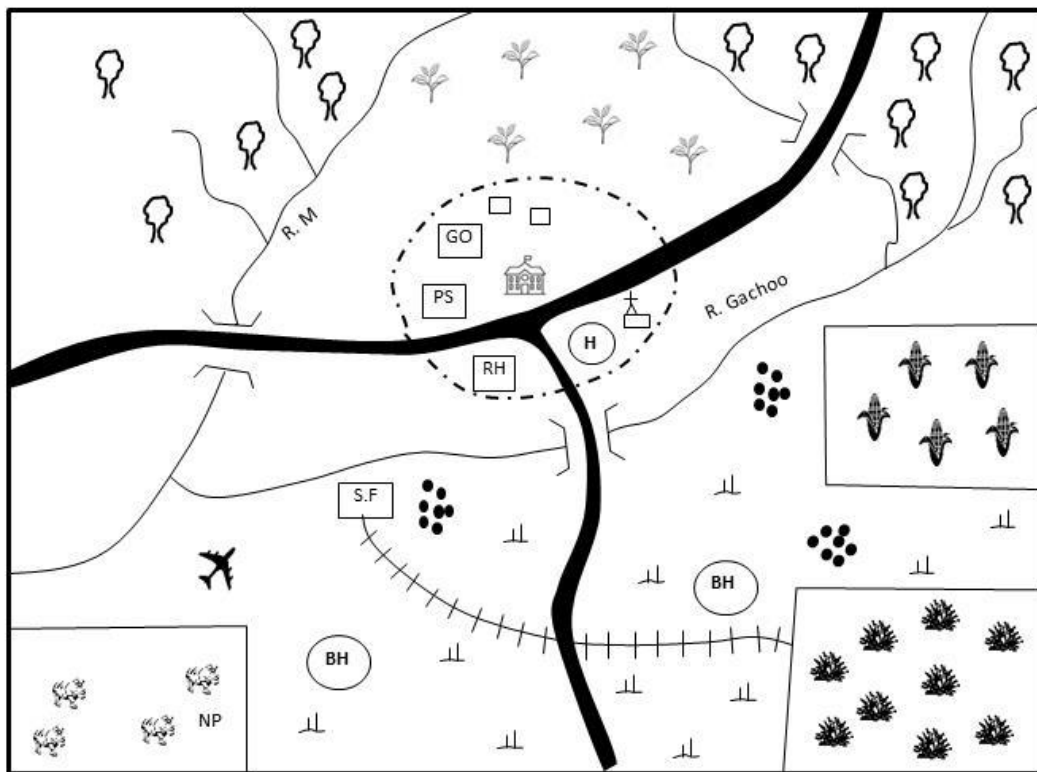


SAKWA AREA

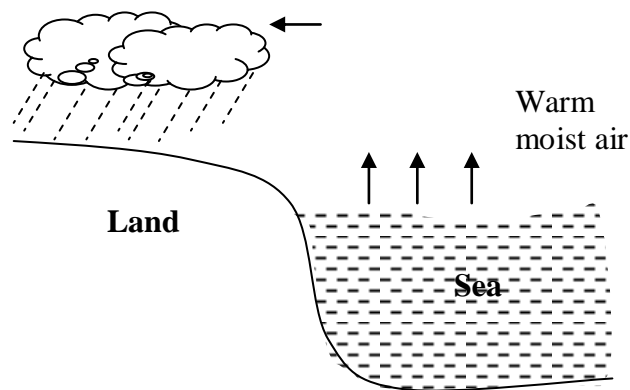


<u>KEY</u>			
	Forest		Church
	River & bridge		Airstrip
	Tea		Scrubs
	Maize		Borehole
	National park		Settlements
	Tarmac road		Sisal plantation
			School
			Rest house
			Governor's office
			Police station
			Hospital
			Sack factory
			Town boundary

Study the map of Sakwa area and use it to answer question 1-7

1. The area represented by the map above is likely to be a:-
 - A. location
 - B. district
 - C. county
 - D. division
2. The factory in the map is **likely** to be grouped under ____ industries.
 - A. processing
 - B. assembly
 - C. manufacturing
 - D. tertiary
3. The airstrip in the map is likely to transport?
 - A. Tourists
 - B. Wild animals
 - C. Sisal leaves
 - D. Water
4. The settlement pattern in the map is **likely** to be influenced by:-
 - A. Presence of water
 - B. Transport and communication
 - C. climate
 - D. economic activities
5. River Gachoo rises from:-
 - A. North East
 - B. South West
 - C. North West
 - D. South East
6. What is the approximate length of the railway line in the map?
 - A. 9 km
 - B. 10km
 - C. 15km
 - D. 14.5 km
7. People in Sakwa area belong to:-
 - A. Islam
 - B. Christianity
 - C. Hindu
 - D. African Traditional Religion
8. Which one of the following groups of items consists of Kenya's major exports?
 - A. Coffee, electronics, animal products
 - B. Sugar, flowers, pyrethrum

- C. Horticultural produce, tea, soda ash
 - D. Petroleum, cement, textiles
9. National population census in Kenya is carried out after a period of ____ years.
 - A. 5
 - B. 10
 - C. 20
 - D. 18
10. The most common types of industries in Kenya are:-
 - A. Tertiary industries
 - B. Manufacturing industries
 - C. Assembly industries
 - D. Processing industries
11. The following are examples of mountains found in Africa. Which one was formed when young sedimentary rocks twisted due to compressional forces?
 - A. Mt. Cameroon
 - B. Tibesti
 - C. The Great Karas
 - D. Drakensberg mountain
12. The diagram below shows the formation of a certain type of rainfall. It is called:-




- A. Orographic rainfall
 - B. Convectional rainfall
 - C. Frontal rainfall
 - D. Cyclonic rainfall
13. The following are factors and structures of population in Kenya. Which one is no true?
 - A. High dependency ratio
 - B. Ageing population is small
 - C. Life expectancy is high
 - D. Females are more than males

14. Which one of the following weather measuring instruments is **not correctly**, matched with what it measures?
- Barometer – air pressure
 - Anemometer – strength of wind
 - Hygrometer – humidity
 - Wind vane – direction of wind
15. Which of the stages of evolution may represent the **correct** order from the latest to the earliest?
- Homo-sapiens – Homo Habilis – Homo erectus
 - Homo habilis – homo erectus – homo sapiens
 - Homo erectus – homo habilis – homo sapiens
 - Homo sapiens – homo erectus – homo habilis
16. Since Kenya became a multiparty state, how many general elections have been held?
- A. 10 B. 5 C. 3 D. 4
17. Which one of the following statements is true about maize grown in Kenya and Tanzania?
- Grown by large scale farmers in Kenya
 - Major foreign exchange earner in Kenya
 - Grown under irrigation in both countries
 - Staple food for both countries
18. Which one of the following events took place latest in Kenya?
- Death of Jomo Kenyatta
 - Coalition government
 - Making Kenya Multiparty state
 - Death of Tom Mboya
19. The following are facts about road signs. Which one is **true** about regulatory signs?
- Usually surrounded by red circle
 - Must be observed by pedestrians only
 - Have a light blue background
 - Normally enclosed in a red triangle
20. Among the following which group represents the Bantus only
- Abaluhya, Pokomo, Nandi, Dinka
 - Kikuyu, Embu, Meru, Turkana
 - Hehe, Yao, Zulu, Ngoni
 - Kamba, Yao, Samburu, Makua
21. All of the following were reasons why European scrambled/partitioned for Africa which was the **main** reason?
- settle surplus population
 - strategic position
 - market for goods
 - raw materials
22. The smallest country in Africa in Areas per sq. km is
- Lesotho
 - Seychelles
 - Sao Tome
 - Djibout
23. Which agency of the UN (United Nations) is in charge if distributing food to the needy?
- WHO B. WFP
 - UNICEF D. FAO
24. Below are descriptions of a certain community
- Ruled by hereditary chiefs
 - Are farmers
 - Participated in long distance trade
- The community described above is
- Buganda B. Nyamwezi
 - Akamba D. Abawanga
25. The Bantus who had settled at Shungwaya could not proceed further Northwards because:-
- They were attacked by hostile communites
 - The area was dry
 - There was infertile soil
 - There wasn't enough pasture
26. Which one of the following industries is an example of a secondary industry?
- Sugar refinery
 - Saw milling
 - Cement making
 - Cotton ginnery
27. The following are minerals mined in Kenya. Which one is **correctly** matched with its method of mining?
- Gold – underground method
 - Oil – dredging
 - Diatomite – drilling
 - Soda ash – open cast
28. Which one of the following is the main factor that influences population distribution?

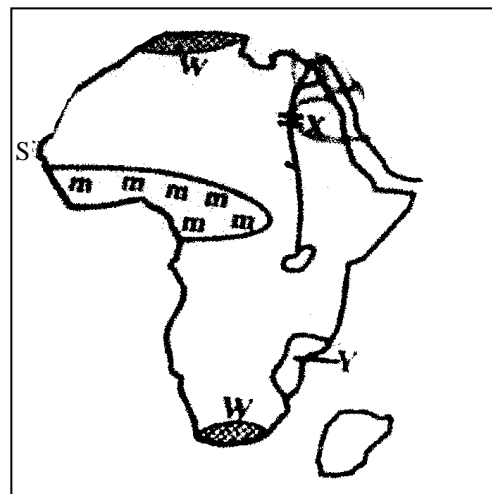
- A. Relief
 - B. Social amenities
 - C. Climate
 - D. Vegetation
29. The following are methods used by nationalists in Ghana in their struggle for independence. Which one was not?
- A. Strikes and boycotts
 - B. Waging guerilla warfare
 - C. Peaceful negotiations
 - D. Demonstration
30. Which one of the following countries is not former German colony?
- A. Togo
 - B. Cameroon
 - C. Libya
 - D. Namibia
31. Most rivers in Africa are polluted by:-
- A. Farm chemicals
 - B. Industrial wastes
 - C. Presence of water weeds
 - D. Soil particles
32. The Hebe people were defeated by the Germans **mainly** because:-
- A. German soldiers were better armed
 - B. German soldiers were more in number
 - C. The Hehe were few
 - D. The Hehe had superior weapons
33. Which one of the following towers is **not** part of the cocoa triangle in Ghana?
- A. Sekondi - Takoradi
 - B. Port Harcourt
 - C. Kumasi
 - D. Accra
34. Which one of the following aspects of our culture should we not preserve?
- A. Traditional foods
 - B. Wife inheritance
 - C. Traditional songs and dances
 - D. Traditional ways of greetings
35. After a general elections, the newly elected members of parliament are sworn in by:-
- A. Chief justice
 - B. Attorney general
 - C. Speaker of the National Assembly
 - D. Judge

36. The mad sign below indicates:-



- A. No entry
 - B. Stop
 - C. Danger ahead
 - D. Round about
37. Which one of the following effects of colonial rule in Africa is positive?
- A. Division of communities
 - B. Erosion of African culture
 - C. Forced labour
 - D. Introduction of Western Education
38. According to the consitution of Kenya, the amendment of the constitution is the responsibility of:-
- A. Senate
 - B. Judiciary
 - C. National assembly
 - D. Executive
39. Which one of the following is not caused by the movement of the earth around the sun?
- A. Different seasons
 - B. Differences in time in different parts of the word
 - C. Changes in position of midday sun
 - D. Differences in the length of the day and night

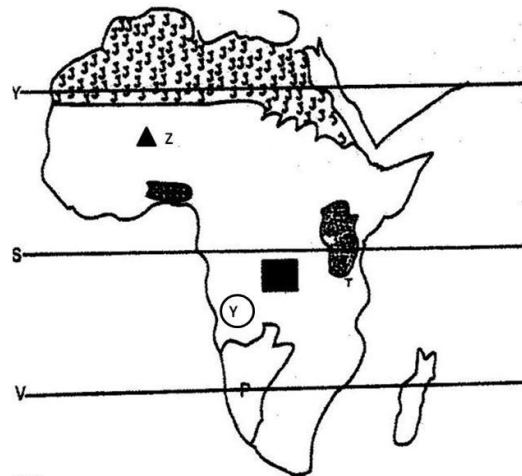
Study the map of Africa below and use it to answer the questions that follow.



40. The following are examples of trees found in the shaded region marked mmm. Which one is **not**?
- Meru Oak
 - Mvule
 - Rosewood
 - Pine
41. The country marked **Y** was colonized by the:-
- Portuguese
 - French
 - British
 - Germans
42. The multi-purpose river project marked **x** is _____.
- Kariba dam
 - Volta river project
 - Aswan High Dam
 - Seven Guardafui
43. The **most** westerly part marked **S** is:-
- Cape Agulhas
 - Cape Verde
 - Cape Bon
 - Cape Guadafui
44. The climate region marked **w** is known as:-
- Equatorial climate region
 - Mediterranean climate region
 - Tropical climate
 - Temperature climate region
45. Below are results of interaction between Cushites and Bantus during the pre-colonial period. Which one is **not**?
- Bantus learnt animal keeping from Cushites
 - Bantu learnt cultivation from Cushites
 - Cushites learnt farming from Bantus
 - Bantus learnt circumcision from Cushites
46. The dispersal point of the Bantus during their migration was:-
- Shungwaya
 - Taita Hills
 - Congo forest
 - PubunguPakwach
47. For one to be elected as a county representative, he should:-
- Be married
 - Have a university degree

- Be 21 years of age and above
 - Be a registered voter
48. Which of the following is **NOT** a marriage system in Kenya?
- Religious marriage
 - External marriage
 - Customary marriage
 - Civil marriage
49. Which of the following towns would we experience hot and wet climate.
- Mandera
 - Nyeri
 - Lokichogio
 - Kisumu
50. The following are characteristics of a certain type of vegetation in Africa?
- Consists of tall elephant grass
 - Has a few and scattered trees
 - Leaves of the few trees are thick and hard
- The vegetation described above is
- Mountain vegetation
 - Scrub vegetation
 - Grassland vegetation
 - Mediterranean vegetation

Use the map of Africa below to answer questions 27-31

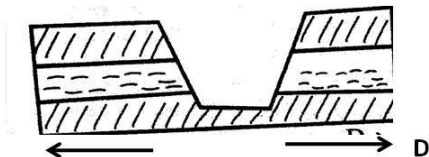


51. The mountains marked **Z** is known to us as _____.
- | | |
|------------|------------|
| A. Adamawa | B. Ahaggar |
| C. Tibest | D. Atlas |
52. The Basin marked **T** is _____.
- Qattara
 - Lake Chad
 - L. Victoria basin

- D. Congo
53. Capital city of the country marked P is ____.
- Lusaka
 - Luanda
 - Gaborone
 - windhoek
54. the physical feature Y is
- atlas Mts.
 - Ruwenzori Mts.
 - Ahaggar Mts.
 - Bie plateaus
55. The **main** purpose of established a school is ____.

- to pass knowledge and skills to pupils
- give guidance and counselling
- occupy children so that they grow up
- to prepare pupils for adults

56. The force indicated by letters D is called ____ force.



- Uplifting force
 - Fault lines
 - Tension force
 - Compression force
57. Which of these statements is true about the formation of this mountain?
- Mostly formed on semi solid sedimentary rock
 - Common along the coastline extremes of the continents
 - Leads to creation of rift valley lakes
 - The mountains are found in Northern and Southern tips of Africa
58. Which of these child rights is NOT indicated in the bill of rights?
- Right to a name

- Right to basic needs
 - Right to security
 - Right to vote
59. Your father has been offered smuggled goods at a very cheap price. What advice would you give him?
- Cease them immediately and resell them at very high prices
 - To report to the customs officials so that the smugglers can be apprehended
 - Take the goods and be silent about them
 - Take the goods , resell them and then report the smugglers to the authorities
60. The **main** reason why road safety education is taught in primary school is to.
- Make learning more practical
 - Create awareness on careful use of roads
 - Give information about road signs
 - Reduce work load for traffic officers

C.R.E

61. The **main** teaching of the book of Genesis chapter one is that:-
- Human beings were made in the image of God
 - Human beings were given authority over animals
 - God is the creator of the universe
 - Creation was done in 6 days
62. The sign of the covenant between God and Noah was:-
- Fire
 - Circumcision
 - Rain
 - Rainbow
63. Joseph and Benjamin were favourite sons of Jacob because they were the only children of:-
- Rachel
 - Rebeccah
 - Leah
 - Sarah
64. During the Passover feast the Israelites had to eat while standing **mainly** because:-
- They wanted to leave before Egyptians could kill them

- B. They wanted to save time
 - C. They wanted to show that they had to leave Egypt immediately
 - D. It was a symbol of God's presence
65. Which of the following books was not written by Moses?
- A. Numbers
 - B. Judges
 - C. Exodus
 - D. Deuteronomy
66. The Lord said; "The time is coming when I will make a covenant with people of Israel and the people of Judah. The above was a prophecy of:-
- A. Jeremiah
 - B. Micah
 - C. Isaiah
 - D. Joel
67. Which prophet prophesied the refugee status of Jesus in Egypt?
- A. Joel
 - B. Isaiah
 - C. Hosea
 - D. Jeremiah
68. "Wherever you go I will go; wherever you live I will live; your God will be my God. "These words were said by ____ to ____.
- A. Samuel to David
 - B. Naomi to Oprah
 - C. Ruth to Naomi
 - D. Boaz to Ruth
69. The first king of Israel was _____.
- A. Solomon
 - B. David
 - C. Ahab
 - D. Saul
70. The parents of John the Baptist were ____ and _____.
- A. Zachariah and Elizabeth
 - B. Elkanah and Hannah
 - C. Ruth and Boaz
 - D. Joseph and Mary

71. "This is my own dear son with whom I am well pleased." These words were spoken during Jesus _____.
- A. ascension
 - B. resurrection
 - C. baptism
 - D. crucifixion
72. Which parable of Jesus teaches about the growth of the church?
- A. The parable of the mustard seed
 - B. The lost coin
 - C. The parable of the sower
 - D. The parable of the Good Samaritan
73. The miracle that shows that Jesus had power over nature is:-
- A. Healing the blind man
 - B. Commanding the wind
 - C. Healing the paralyze man
 - D. Raising the centurion son
74. In which garden did Jesus take his disciples after the last supper?
- A. Mount Olives
 - B. Golgotha
 - C. Mt. Sinai
 - D. Gethsemane
75. Happy are those who are merciful to others _____.
- A. God will satisfy them fully
 - B. God will call them his children
 - C. The kingdom of heaven belongs to them
 - D. God will be merciful to them
76. Who was the disciple who spoke to the crowd on the day of Pentecost?
- A. Mathew
 - B. Paul
 - C. Peter
 - D. Barthlomew
77. The following were ways in which Christians suffered for their faith. Which one is **not**?
- A. Thrown in prison
 - B. Were whipped
 - C. They were stoned to death
 - D. Involved in a road accident

78. Which one of the following is not a letter?
 A. Ephesians
 B. Colosians
 C. Timothy
 D. Mathew
79. The **best** way for a Christian to witness to a beggar is to:-
 A. Pray for them
 B. Tell him Jesus loves you
 C. Give him money
 D. Help him find employment
80. Who said that “faith without action is dead?”
 A. Timothy
 B. Peter
 C. James
 D. Paul
81. Which of the following was not given to Gikuyu by God after creation?
 A. Nine sons
 B. Animals to rear
 C. A lot of wealth
 D. Land to cultivate
82. Education in the traditional African society was aimed at:-
 A. Character moulding
 B. Acquiring a degree
 C. Preparation for marriage
 D. Cattle keeping
83. The stream of life in African Traditional Society includes the _____, the living. The living dead and the ancestors.
 A. Married
 B. Unborn
 C. Initiation
 D. Non-living
84. Which of the following is **not** a stage of new life in Traditional African Society?
 A. birth
 B. confirmation
 C. marriage
 D. death
85. According to the Bukusu creation story, were Khabaka’s two assistants were Mukhobe and:-
 A. Gikuyu
 B. Mumbi
 C. Murumwa
 D. Nyasaye
86. Which one of the following activities in a Christian life is an example of the gift of the Holy Spirit?
 A. Collecting offerings
 B. Cleaning the church
 C. Preaching the word of God
 D. Reading the Bible
87. Which one of the following is a fruit of the Holy Spirit?
 A. Self-control
 B. Faith
 C. Wisdom
 D. Knowledge
88. You were playing with your friends in the field who picked sh. 20, as a Christian, what is the best advice to give to your friend?
 A. Tell her to take the money to her parent
 B. Ask her you share the money
 C. Tell her to go and buy sweets
 D. Tell her to take the money to the teacher on duty
89. Halima a std 8 pupil, carries an umbrella to school and it does not rain. When she fails to carry, it rains. What type of suffering is Halima likely to undergo.
 A. Physical suffering
 B. Emotional suffering
 C. Mental suffering
 D. Spiritual suffering
90. The first mission station was build at _____.
 A. Kaimosi
 B. Kisumu
 C. Nairobi
 D. Rabai