

PRE-UNIT END TERM 2 EXAM, 2017  
MATHEMATICS


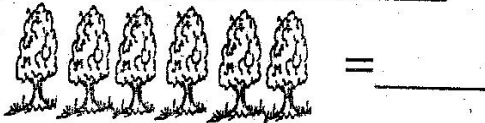
|         |  |
|---------|--|
| NAME:   |  |
| SCHOOL: |  |

1. Write numbers 31 - 50

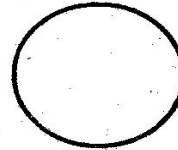
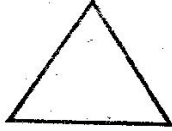
\_\_\_\_\_

\_\_\_\_\_

2. Count and write



3. Name the shapes



(square, circle, triangle, rectangle)

4. Add

$2 + 4 = \underline{\quad}$

$3 + 6 = \underline{\quad}$

$5 + 1 = \underline{\quad}$

$$\begin{array}{r} 12 \\ + 4 \\ \hline \end{array}$$

$$\begin{array}{r} 9 \\ + 7 \\ \hline \end{array}$$

$$\begin{array}{r} 13 \\ + 10 \\ \hline \end{array}$$

$$\begin{array}{r} 9 \\ - 5 \\ \hline \end{array}$$

$$\begin{array}{r} 15 \\ - 11 \\ \hline \end{array}$$

$$\begin{array}{r} 12 \\ - 9 \\ \hline \end{array}$$

5. Take away

$9 - 6 = \underline{\quad}$

$7 - 2 = \underline{\quad}$

$4 - 1 = \underline{\quad}$