

# NURSERY END TERM 2 EXAM, 2017

## NUMBER WORK

NAME:	
SCHOOL:	

### 1. Write numbers 1 - 25

\_\_\_\_\_

\_\_\_\_\_

\_\_\_\_\_

### 2. Draw the balls

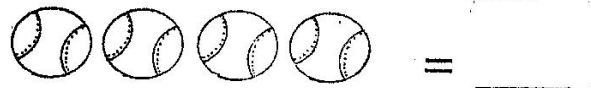
5 =

6 =

9 =

7 =

### 3. Count and write



= \_\_\_\_\_



= \_\_\_\_\_




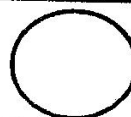


= \_\_\_\_\_



= \_\_\_\_\_

### 3. Re-draw the shapes

### 4. Match the numbers

2 + 3 = \_\_\_\_\_

2 + 5 = \_\_\_\_\_

$$\begin{array}{r} 6 \\ +3 \\ \hline \end{array}$$

$$\begin{array}{r} 4 \\ +4 \\ \hline \end{array}$$